

Question 1 (3 marks)

Let $P(n)$ be the proposition that for each natural number n , $6^n + 4$ is divisible by 5.

Step 1 Show $P(1)$ is true.
 $6^1 + 4 = 10$ which is divisible by 5
(1 mark)

Step 2 Assume that $P(k)$ is true for $k \in N$.
 That is, assume that $6^k + 4 = 5m$, $m \in N$
(1 mark)

Step 3 Prove that $P(k)$ implies that $P(k+1)$ is true .
 $6^{k+1} + 4$
 $= 6^k \times 6^1 + 4$
 $= 6^k (5+1) + 4$
 $= 5 \times 6^k + 1 \times 6^k + 4$
 $= 5 \times 6^k + 5m$ using $P(k)$
 $= 5(6^k + m)$, $6^k, m \in N$ so $6^k + m \in N$
 It follows that $P(k)$ implies that $P(k+1)$ is true .
 Using the principle of mathematical induction, it therefore follows that $P(n)$
 is true for all natural numbers n .
(1 mark)

Question 2 (3 marks)

$\frac{dy}{dx} = \frac{\sin^2(x)}{\cos(y)}$ $\int \cos(y) dy = \int \sin^2(x) dx \quad \text{(1 mark)}$ $\sin(y) + c_1 = \int \frac{1}{2} (1 - \cos(2x)) dx$ $= \frac{1}{2} x - \frac{1}{4} \sin(2x) + c_2$ $\sin(y) = \frac{1}{2} x - \frac{1}{4} \sin(2x) + c \quad \text{where } c = c_2 - c_1$ <p style="text-align: right;">(1 mark)</p>	$y(0) = \frac{\pi}{6}$ $c = \frac{1}{2}$ $\text{So } y = \sin^{-1} \left(\frac{1}{2} x - \frac{1}{4} \sin(2x) + \frac{1}{2} \right)$ <p style="text-align: right;">(1 mark)</p>
--	---

Question 3 (4 marks)

- a. Let X represent the weight of a loaf, where $\mu = 850$ and $\sigma = 10$.

Let W represent the **total** weight of four loaves.

$W = (X_1 + X_2 + X_3 + X_4)$ where X_1, X_2, X_3 and X_4 are four identically distributed variables.

$$E(W) = 4 \times 850 = 3400$$

$$\text{Var}(W) = 4 \times 10^2 = 400$$

(formula sheet)

$$\text{sd}(W) = \sqrt{400} = 20$$

(1 mark)

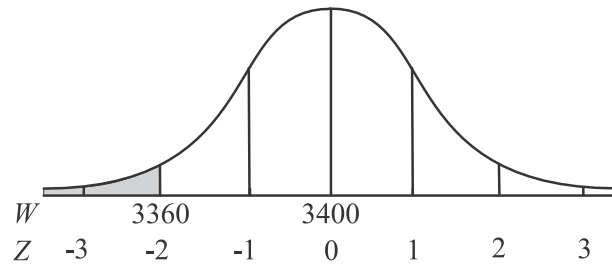
$$W \sim N(3400, 20^2)$$

$$\Pr(W < 3360) = \Pr(Z < -2)$$

$$= \frac{1 - 0.95}{2} \quad (\text{given } \Pr(-2 < Z < 2) = 0.95)$$

$$= 0.025$$

(1 mark)

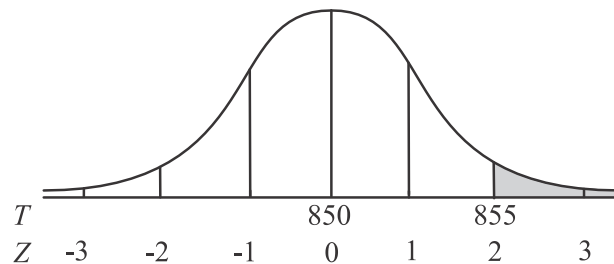


- b. Let T represent the distribution of the sample mean of samples of 16 loaves.

$$E(T) = 850 \quad \text{and} \quad \text{sd}(T) = \frac{10}{\sqrt{16}} = 2.5$$

(1 mark)

$$T \sim N(850, 2.5^2)$$



$$\Pr(T > 855) = \Pr(Z > 2)$$

$$= \frac{0.05}{2} \quad (\text{given that } \Pr(-2 < Z < 2) = 0.95 \text{ from part a.})$$

$$= 0.025$$

(1 mark)

Question 4 (3 marks)

$$x \sec(2y) + \log_e(x) + \frac{6}{\pi} y^2 = 2 + \frac{\pi}{6}$$

$$x(2 \sec(2y) \tan(2y)) \frac{dy}{dx} + \sec(2y) + \frac{1}{x} + \frac{12}{\pi} y \frac{dy}{dx} = 0$$

Note that the derivative of $\sec(2y)$ is on the formula sheet.

(1 mark) an attempt to use the product rule

(1 mark) all correct

Substitute in $\left(1, \frac{\pi}{6}\right)$.

$$1 \times 2 \sec\left(\frac{\pi}{3}\right) \tan\left(\frac{\pi}{3}\right) \frac{dy}{dx} + \sec\left(\frac{\pi}{3}\right) + 1 + \frac{12}{\pi} \times \frac{\pi}{6} \frac{dy}{dx} = 0$$

$$2 \times 2 \times \sqrt{3} \frac{dy}{dx} + 2 + 1 + 2 \frac{dy}{dx} = 0$$

$$(4\sqrt{3} + 2) \frac{dy}{dx} = -3$$

$$\frac{dy}{dx} = \frac{-3}{4\sqrt{3} + 2}$$

$$= \frac{-3}{4\sqrt{3} + 2} \times \frac{4\sqrt{3} - 2}{4\sqrt{3} - 2}$$

$$= \frac{6 - 12\sqrt{3}}{48 - 4}$$

$$= \frac{2(3 - 6\sqrt{3})}{44}$$

$$= \frac{3 - 6\sqrt{3}}{22}$$

(1 mark)

Question 5 (4 marks)

a.
$$z = \frac{(1+i)^6}{(\sqrt{3}-i)^4}$$

For $1+i$, $r = \sqrt{2}$ and $\theta = \tan^{-1}(1) = \frac{\pi}{4}$ (first quadrant angle).

For $\sqrt{3}-i$, $r = \sqrt{4}$ and $\theta = \tan^{-1}\left(-\frac{1}{\sqrt{3}}\right) = -\frac{\pi}{6}$ (fourth quadrant angle).

$$z = \frac{\left(\sqrt{2}\text{cis}\left(\frac{\pi}{4}\right)\right)^6}{\left(2\text{cis}\left(-\frac{\pi}{6}\right)\right)^4} \quad \text{(1 mark)}$$

$$= \frac{8\text{cis}\left(\frac{3\pi}{2}\right)}{16\text{cis}\left(-\frac{2\pi}{3}\right)} \quad \text{(De Moivre)} \quad \text{(1 mark)}$$

$$= \frac{1}{2}\text{cis}\left(\frac{3\pi}{2} + \frac{2\pi}{3}\right)$$

$$= \frac{1}{2}\text{cis}\left(\frac{13\pi}{6}\right)$$

$$= \frac{1}{2}\text{cis}\left(\frac{\pi}{6}\right)$$

$$= \frac{1}{2}\cos\left(\frac{\pi}{6}\right) + \frac{1}{2} \times i \sin\left(\frac{\pi}{6}\right)$$

$$= \frac{\sqrt{3}}{4} + \frac{1}{4}i \quad \text{(1 mark)}$$

b.
$$z^n = \left[\frac{1}{2}\text{cis}\left(\frac{\pi}{6}\right)\right]^n$$

$$= \frac{1}{2^n}\left(\cos\left(\frac{n\pi}{6}\right) + i \sin\left(\frac{n\pi}{6}\right)\right)$$

For z^n to be real, then we require $\sin\left(\frac{n\pi}{6}\right) = 0$, so $\frac{n\pi}{6} = \dots - \pi, 0, \pi, 2\pi, 3\pi, \dots$

and $n = \dots - 6, 0, 6, 12, 18, \dots$

So $n = 6k$, $k \in \mathbb{Z}$.

(1 mark)

Question 6 (5 marks)

a. $\underline{v}(t) = 2 \sin(4t)\underline{i} + 4 \cos(4t)\underline{j} \quad 0 \leq t \leq \frac{\pi}{4}$

$$\underline{r}(t) = -\frac{1}{2} \cos(4t)\underline{i} + \sin(4t)\underline{j} + \underline{c} \quad \text{(1 mark)}$$

$$\underline{r}(0) = -\frac{1}{2}\underline{i}$$

$$-\frac{1}{2}\underline{i} = -\frac{1}{2}\underline{i} + 0\underline{j} + \underline{c} \quad \text{so } \underline{c} = \underline{0}$$

$$\underline{r}(t) = -\frac{1}{2} \cos(4t)\underline{i} + \sin(4t)\underline{j} \quad \text{(1 mark)}$$

b. $x = -\frac{1}{2} \cos(4t) \quad y = \sin(4t)$

$$-2x = \cos(4t) \quad y = \sin(4t)$$

$$4x^2 = \cos^2(4t) \quad y^2 = \sin^2(4t)$$

$$4x^2 + y^2 = 1 \quad \text{as required} \quad \text{(1 mark)}$$

c. We need to consider the restrictions on the domain of the original velocity function

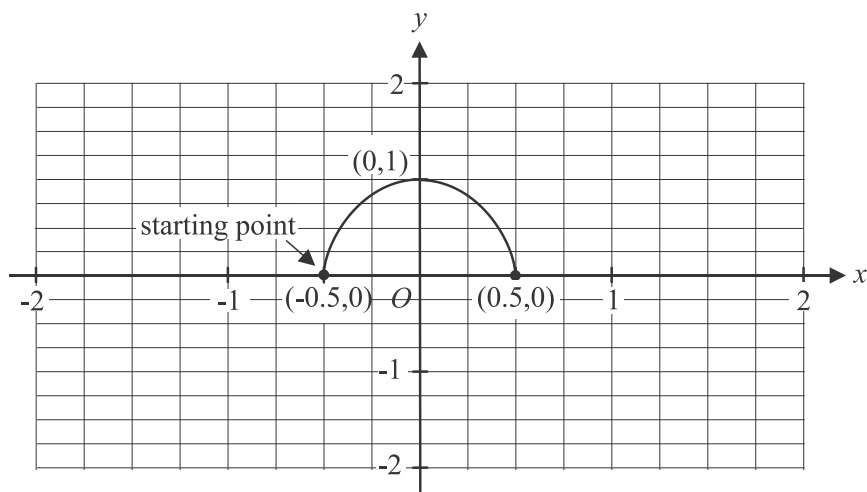
i.e. $0 \leq t \leq \frac{\pi}{4}$.

$$\underline{r}(0) = -\frac{1}{2} \cos(0)\underline{i} + \sin(0)\underline{j} \quad \text{so starting point is at } \left(-\frac{1}{2}, 0\right).$$

$$\underline{r}\left(\frac{\pi}{4}\right) = -\frac{1}{2} \cos\left(4 \times \frac{\pi}{4}\right)\underline{i} + \sin\left(4 \times \frac{\pi}{4}\right)\underline{j} \quad \text{so endpoint is at } \left(\frac{1}{2}, 0\right).$$

Note that $\sin(4t) \geq 0$ for $0 \leq t \leq \frac{\pi}{4}$, so $y \geq 0$.

The y-axis intercept is at (0,1). The graph is symmetrical about the y axis.



(1 mark) correct shape

(1 mark) correct starting point and axis intercepts

Question 7 (5 marks)

$$y = \frac{x^2 - 1}{2}$$

$$\text{surface area} = \int_{y_1}^{y_2} 2\pi x \sqrt{1 + \left(\frac{dx}{dy}\right)^2} dy \quad (\text{formula sheet}) \quad (1 \text{ mark})$$

$$x = 0, \quad y = -\frac{1}{2} \quad \text{and} \quad 2y + 1 = x^2$$

$$x = 3, \quad y = 4$$

$$x = \sqrt{2y + 1} \quad \text{as } x > 0$$

$$\frac{dx}{dy} = \frac{1}{2}(2y + 1)^{-\frac{1}{2}} \times 2$$

$$= \frac{1}{\sqrt{2y + 1}}$$

$$\text{surface area} = 2\pi \int_{-\frac{1}{2}}^4 \sqrt{2y + 1} \sqrt{1 + \frac{1}{2y + 1}} dy \quad (1 \text{ mark})$$

$$= 2\pi \int_{-\frac{1}{2}}^4 \sqrt{2y + 1} \sqrt{\frac{2y + 1}{2y + 1} + \frac{1}{2y + 1}} dy$$

$$= 2\pi \int_{-\frac{1}{2}}^4 \sqrt{2y + 1} \sqrt{\frac{2y + 2}{2y + 1}} dy$$

$$= 2\pi \int_{-\frac{1}{2}}^4 (2y + 2)^{\frac{1}{2}} dy \quad (1 \text{ mark})$$

$$= 2\pi \left[\frac{(2y + 2)^{\frac{3}{2}}}{\frac{3}{2} \times 2} \right]_{-\frac{1}{2}}^4 \quad (1 \text{ mark})$$

$$= \frac{2\pi}{3} \left[(2y + 2)^{\frac{3}{2}} \right]_{-\frac{1}{2}}^4$$

$$= \frac{2\pi}{3} \left(10^{\frac{3}{2}} - 1^{\frac{3}{2}} \right)$$

$$= \frac{2\pi}{3} (10\sqrt{10} - 1) \text{ square units} \quad (1 \text{ mark})$$

Question 8 (3 marks)

The three vectors \underline{a} , \underline{b} and \underline{c} are linearly dependent if there exist real numbers m and n such that, for example, $\underline{c} = m\underline{a} + n\underline{b}$.

Equating the components

for \underline{i} , \underline{j} and \underline{k} , we have

$$-2 = 2m + 3n \quad (1)$$

$$\lambda = -m + 3n \quad (2)$$

$$1 = 3m - 2n \quad (3)$$

(1 mark)

$$(1) \times 3 \text{ gives } -6 = 6m + 9n \quad (4)$$

$$(3) \times 2 \text{ gives } 2 = 6m - 4n \quad (5)$$

$$(4) - (5) \text{ gives } -8 = 13n$$

$$n = -\frac{8}{13} \quad (1 \text{ mark})$$

Substitute this value into (1).

$$-2 = 2m + 3 \times -\frac{8}{13}$$

$$-\frac{2}{13} = 2m$$

$$m = -\frac{1}{13}$$

Substitute this value into (2).

$$\lambda = \frac{1}{13} + 3 \times -\frac{8}{13}$$

$$= \frac{1}{13} - \frac{24}{13}$$

$$= -\frac{23}{13}$$

So the three vectors are linearly dependent when $\lambda = -\frac{23}{13}$. (1 mark)

Question 9 (5 marks)

a. At the point of intersection, $\underline{r}_1(s) = \underline{r}_2(t)$.

$$\underline{r}_1(s) = \underline{i} + 3\underline{j} - 3\underline{k} + s(2\underline{i} + 2\underline{j} - \underline{k})$$

$$\underline{r}_2(t) = 3\underline{i} + \underline{j} - 2\underline{k} + t(\underline{i} + 3\underline{j} + 8\underline{k})$$

$$\text{Equating } \underline{i} \text{ components gives } 1 + 2s = 3 + t \text{ so } 2s - t = 2 \quad (1)$$

$$\text{Equating } \underline{j} \text{ components gives } 3 + 2s = 1 + 3t \text{ so } 2s - 3t = -2 \quad (2) \quad (1 \text{ mark})$$

$$(1) - (2) \text{ gives } 2t = 4$$

$$t = 2 \text{ and } s = 2 \quad (1 \text{ mark})$$

So $\underline{r}_1(2) = \underline{r}_2(2) = 5\underline{i} + 7\underline{j} - 5\underline{k}$ and the point of intersection is $(5, 7, -5)$. (1 mark)

If you have time, check that these values are consistent with the \underline{k} components.

$$-3 - s = -21 + 8t \text{ becomes } -3 - 2 = -21 + 16 \text{ which is true}$$

b. distance = $\left| \overrightarrow{PQ} \cdot \hat{n} \right|$, $P = (5, 7, -5)$, Q is any point on Π , for example $Q(2, 0, 0)$, and

$\hat{n} = \frac{\underline{n}}{|\underline{n}|}$ where \underline{n} is a unit vector normal to the plane.

$$\overrightarrow{PQ} \cdot \hat{n} = (-3\underline{i} - 7\underline{j} + 5\underline{k}) \cdot (2\underline{i} + \underline{j} + 2\underline{k}) \times \frac{1}{3} \quad (1 \text{ mark})$$

$$\left| \overrightarrow{PQ} \cdot \hat{n} \right| = \left| (-6 - 7 + 10) \times \frac{1}{3} \right|$$

$$= \left| -3 \times \frac{1}{3} \right|$$

$$= 1 \text{ unit} \quad (1 \text{ mark})$$

Question 10 (5 marks)

a. $\int xe^{2x} dx = \frac{1}{2}xe^{2x} - \int \frac{1}{2}e^{2x} dx$ (1 mark)

So $\int_0^1 xe^{2x} dx$

$$= \left[\frac{1}{2}xe^{2x} \right]_0^1 - \left[\frac{1}{4}e^{2x} \right]_0^1$$

$$= \left(\frac{1}{2}e^2 - 0 \right) - \left(\frac{1}{4}e^2 - \frac{1}{4}e^0 \right)$$

$$= \frac{1}{2}e^2 - \frac{1}{4}e^2 + \frac{1}{4}$$

$$= \frac{1}{4}e^2 + \frac{1}{4}$$
 (1 mark)

$$\left. \begin{array}{l} \text{let } u = x \\ \frac{dv}{dx} = e^{2x} \\ \frac{du}{dx} = 1 \\ v = \frac{1}{2}e^{2x} \end{array} \right\}$$

b. Let $\frac{5x-3}{(x+1)(x^2+3)} = \frac{A}{x+1} + \frac{Bx+C}{x^2+3}$

$$= \frac{A(x^2+3) + (Bx+C)(x+1)}{(x+1)(x^2+3)}$$

True iff $5x-3 = A(x^2+3) + (Bx+C)(x+1)$

Put $x = -1$, $-8 = 4A$ $A = -2$

Put $x = 0$, $-3 = 3A + C$

$$-3 = -6 + C \quad C = 3$$

Put $x = 1$, $2 = 4A + (B+C) \times 2$

$$2 = -8 + 2B + 6 \quad B = 2$$

So $\int_0^1 \frac{5x-3}{(x+1)(x^2+3)} dx$

$$= \int_0^1 \left(\frac{-2}{x+1} + \frac{2x+3}{x^2+3} \right) dx$$
 (1 mark)
$$= \int_0^1 \left(\frac{-2}{x+1} + \frac{2x}{x^2+3} + \frac{3}{x^2+3} \right) dx$$

$$= \left[-2 \log_e |x+1| + \log_e |x^2+3| + \sqrt{3} \tan^{-1} \left(\frac{x}{\sqrt{3}} \right) \right]_0^1$$
 (1 mark)
$$= \left(-2 \log_e (2) + \log_e (4) + \sqrt{3} \tan^{-1} \left(\frac{1}{\sqrt{3}} \right) \right) - (0 + \log_e (3) + 0)$$

$$= -\log_e (2^2) + \log_e (2^2) + \frac{\sqrt{3}\pi}{6} - \log_e (3)$$

$$= \frac{\sqrt{3}\pi}{6} - \log_e (3)$$
 (1 mark)