

**THE  
HEFFERNAN  
GROUP**

P.O. Box 1180  
Surrey Hills North VIC 3127  
ABN 20 607 374 020  
Phone 9836 5021  
Fax 9836 5025

Student Name: .....

## **SPECIALIST MATHEMATICS**

### **TRIAL EXAMINATION 1**

### **(FACTS, SKILLS AND APPLICATIONS TASK)**

**2003**

Reading Time: 15 minutes

Writing time: 90 minutes

#### **Instructions to students**

This exam consists of Part I and Part II.

Part I consists of 30 multiple-choice questions and should be answered on the detachable answer sheet on page 22 of this exam. This section of the paper is worth 30 marks.

Part II consists of 6 short-answer questions, all of which should be answered in the spaces provided. Part II begins on page 16 of this exam. This section of the paper is worth 20 marks.

There is a total of 50 marks available.

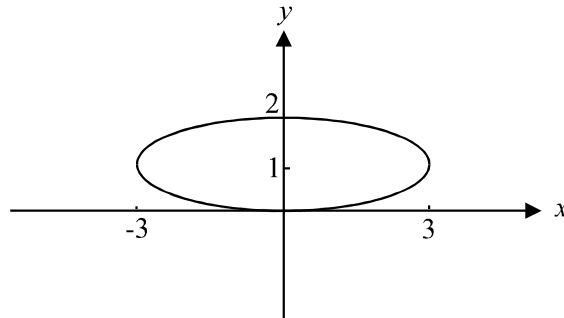
The acceleration due to gravity should be taken to have magnitude  $g \text{ m/s}^2$  where  $g = 9.8$

Students may bring up to two A4 pages of pre-written notes into the exam.

*This paper has been prepared independently of the Victorian Curriculum and Assessment Authority to provide additional exam preparation for students. Although references have been reproduced with permission of the Victorian Curriculum and Assessment Authority the publication is in no way connected with or endorsed by the Victorian Curriculum and Assessment Authority.*

**© THE HEFFERNAN GROUP 2003**

This Trial Exam is licensed on a non transferable basis to the purchaser. It may be copied for educational use within the school which has purchased it. This license does not permit distribution or copying of this Trial Exam outside that school or by any individual purchaser.

**PART I****Question 1**

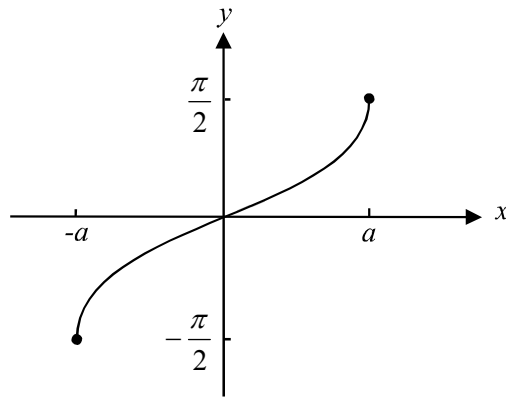
The equation of the ellipse shown in the diagram above is

- A.  $\frac{x^2}{3} + \frac{y^2}{2} = 1$
- B.  $\frac{x^2}{2} + \frac{(y+1)^2}{3} = 1$
- C.  $\frac{(x-1)^2}{\sqrt{3}} + \frac{y^2}{\sqrt{3}} = 1$
- D.  $\frac{x^2}{9} + \frac{(y-1)^2}{1} = 1$
- E.  $\frac{x^2}{9} + \frac{(y-1)^2}{4} = 1$

**Question 2**

Which one of the following equations would have a graph that has an asymptote of  $y = \frac{5}{3}x$ ?

- A.  $\frac{x^2}{3} - \frac{y^2}{5} = 1$
- B.  $\frac{x^2}{9} - \frac{y^2}{25} = 1$
- C.  $\frac{x^2}{9} + \frac{y^2}{25} = 1$
- D.  $\frac{x^2}{25} - \frac{y^2}{9} = 1$
- E.  $\frac{(x-2)^2}{25} + \frac{y^2}{9} = 1$

**Question 3**

The equation of the graph shown above could be

- A.  $y = \tan(ax)$
- B.  $y = \cos^{-1}\left(\frac{x}{a}\right)$
- C.  $y = \sin^{-1}\left(\frac{x}{a}\right)$
- D.  $y = \cos^{-1}(ax)$
- E.  $y = \sin^{-1}(ax)$

**Question 4**

If  $y = \operatorname{cosec}(2x - 1)$ , then  $\frac{dy}{dx}$  is equal to

- A.  $2 \tan^2(2x - 1)$
- B.  $-\operatorname{cosec}^2(2x - 1)$
- C.  $\frac{-\cot(2x - 1)}{\sin(2x - 1)}$
- D.  $-2 \cot(2x - 1)\operatorname{cosec}(2x - 1)$
- E.  $2 \tan(2x - 1)\sec(2x - 1)$

**Question 5**

If  $z = 4 - 3i$  then  $z + zi - \bar{z} + |z|$  is equal to

- A.  $2 - 2i$
- B.  $8 - 2i$
- C.  $8 + 4i$
- D.  $16 + 10i$
- E.  $3 + \sqrt{5} - 2i$

**Question 6**

If  $u = 1 + \sqrt{3}i$  and  $v = 2\text{cis}\left(\frac{\pi}{6}\right)$  then  $\frac{u}{v}$  is equal to

- A.  $\text{cis}\left(-\frac{\pi}{6}\right)$
- B.  $\text{cis}\left(\frac{\pi}{6}\right)$
- C.  $2\text{cis}\left(\frac{\pi}{6}\right)$
- D.  $\text{cis}\left(\frac{\pi}{2}\right)$
- E.  $2\text{cis}\left(\frac{\pi}{2}\right)$

**Question 7**

Given that  $z - 3i$  is a factor of  $P(z) = z^3 + 2z^2 + 9z + 18$ , which one of the following statements is **not** true?

- A.  $P(3i) = 0$
- B.  $P(-3i) = 0$
- C.  $P(z) = 0$  has 3 roots
- D.  $P(z) = 0$  has 2 complex roots
- E.  $P(z) = 0$  has 2 real roots

**Question 8**

The solutions to the equation  $z^2 = 2 + 2i$  where  $z$  is a complex number are

- A.  $-2\sqrt{2}\text{cis}\left(\frac{\pi}{4}\right)$  and  $2\sqrt{2}\text{cis}\left(\frac{\pi}{4}\right)$
- B.  $-\sqrt[4]{8}\text{cis}\left(\frac{\pi}{4}\right)$  and  $\sqrt[4]{8}\text{cis}\left(\frac{\pi}{4}\right)$
- C.  $\sqrt[4]{8}\text{cis}\left(\frac{\pi}{2}\right)$  and  $\sqrt[4]{8}\text{cis}\left(\frac{3\pi}{2}\right)$
- D.  $2\text{cis}\left(\frac{\pi}{8}\right)$  and  $\sqrt[2]{2}\text{cis}\left(\frac{3\pi}{8}\right)$
- E.  $\sqrt[4]{8}\text{cis}\left(\frac{\pi}{8}\right)$  and  $\sqrt[4]{8}\text{cis}\left(\frac{9\pi}{8}\right)$

**Question 9**

An antiderivative of  $\frac{3x}{\sqrt{x^2 - 2}}$  is

- A.  $-3\sqrt{x^2 - 2}$   
 B.  $3\sqrt{x^2 - 2}$   
 C.  $\frac{-3}{4}\sqrt{x^2 - 2}$   
 D.  $6x(x^2 - 2)$   
 E.  $\frac{-3x}{(x^2 - 2)^{\frac{3}{2}}} + \frac{1}{3(x^2 - 2)}$

**Question 10**

$\int x\sqrt{2x-1} dx$  equals

- A.  $\frac{3x-1}{\sqrt{2x-1}} + c$   
 B.  $\frac{4x^{\frac{5}{2}}}{5} - \frac{2x^{\frac{3}{2}}}{3} + c$   
 C.  $\frac{(2x-1)^{\frac{5}{2}}}{10} + \frac{(2x-1)^{\frac{3}{2}}}{6} + c$   
 D.  $\frac{(2x-1)^{\frac{5}{2}}}{5} + \frac{(2x-1)^{\frac{3}{2}}}{3} + c$   
 E.  $\frac{4(2x-1)^{\frac{5}{2}}}{5} + \frac{2(2x-1)^{\frac{3}{2}}}{3} + c$

**Question 11**

If  $\frac{dy}{dx} = \cos^3(3x)$  then  $y$  is equal to

- A.  $\frac{\cos^4(3x)}{12} + c$   
 B.  $\frac{\cos^4(3x)}{4} + c$   
 C.  $x - \frac{\sin^3(3x)}{9} + c$   
 D.  $\frac{\sin(3x)}{3} - \frac{\sin^3(3x)}{9} + c$   
 E.  $\frac{\sin(3x)}{3} - \frac{\sin^3(3x)}{3} + c$

**Question 12**

$\int_1^{\sqrt{3}} \frac{1}{x^2 + 3} dx$  is equal to

- A.  $\frac{\pi}{36}$
- B.  $\frac{\sqrt{3}\pi}{36}$
- C.  $\frac{\pi}{12}$
- D.  $\frac{\sqrt{3}\pi}{6}$
- E.  $\sqrt{3}$

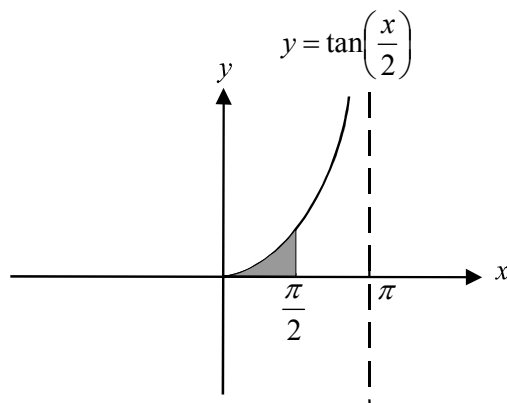
**Question 13**

The value of

$$\int_{0.5}^1 \frac{\log_e(2x)}{\sin(2x)} dx,$$

correct to 4 decimal places is

- A. 0.0572
- B. 0.1134
- C. 0.1997
- D. 0.2342
- E. 0.2871

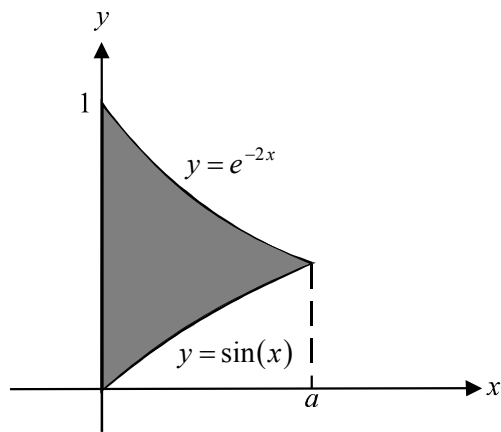
**Question 14**

The graph of  $y = \tan\left(\frac{x}{2}\right)$  is shown in the diagram above. The mid-point rule with two equal intervals is used to approximate the shaded area shown in the diagram above. The approximate area found, in square units and correct to 2 decimal places is

- A. 0.68
- B. 0.87
- C. 1.36
- D. 1.78
- E. 2.22



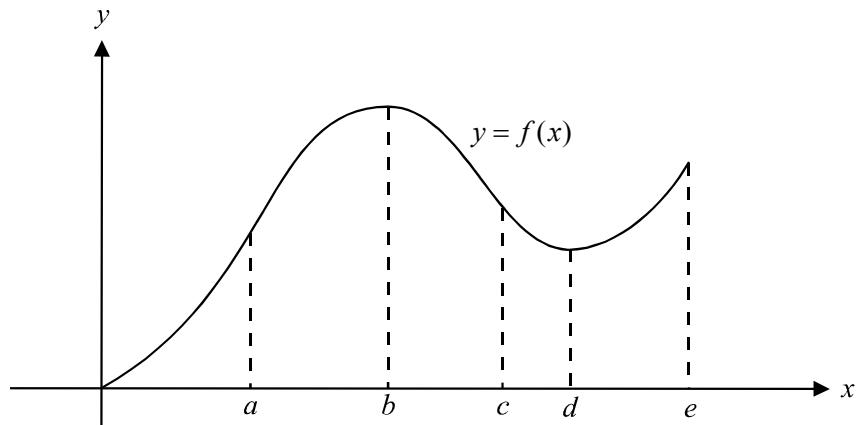
## Question 15



The graphs of  $y = \sin(x)$ ,  $0 \leq x \leq a$  and  $y = e^{-2x}$ ,  $0 \leq x \leq a$  are shown above.  
The area of the shaded region is

- A.  $-\frac{1}{e^{2a}} - \cos(a) - \frac{1}{2}$   
 B.  $-\frac{1}{2e^{2a}} + \cos(a) - \frac{1}{2}$   
 C.  $-\frac{1}{e^{2a}} + \cos(a) - 3$   
 D.  $-\frac{2}{e^{2a}} - \cos(a) + 3$   
 E.  $\frac{1}{2e^{2a}} - \cos(a) + \frac{1}{2}$



**Question 16**

The graph of the function  $f$  is shown above for  $0 \leq x \leq e$ .

For this function,  $f'(b) = 0$ ,  $f'(d) = 0$  and there is a point of inflection at  $x = a$ ,  $x = c$  and  $x = e$ .

It is true to say that  $f''(x) > 0$  for

- A.  $0 < x < a$
- B.  $a < x < c$
- C.  $c < x < e$
- D.  $a < x < b$  and  $d < x < e$
- E.  $0 < x < a$  and  $c < x < e$

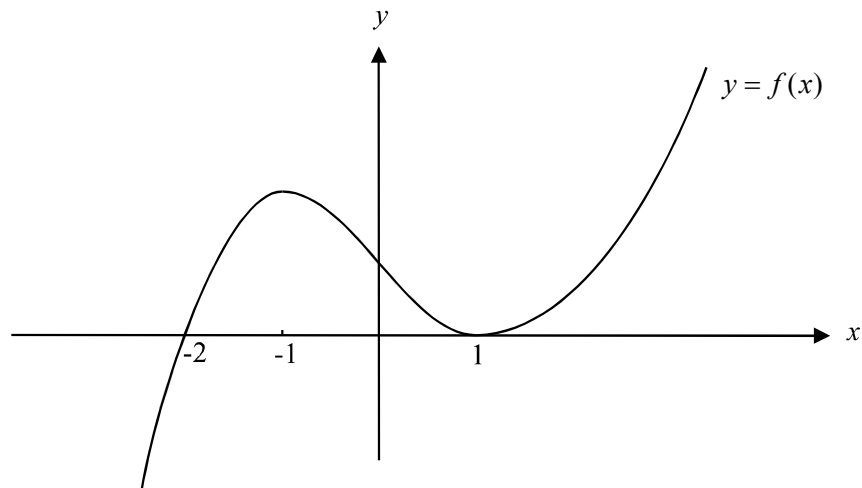
**Question 17**

An approximation to the solution of the differential equation  $(x-1)\frac{dy}{dx} = e^{-3x}$  with  $y = 1$  at

$x = 0$  is found using Euler's method with a step size of 0.2. When  $x = 0.4$ , the value obtained for  $y$  is closest to

- A.  $-0.5037$
- B.  $0.4963$
- C.  $0.6628$
- D.  $0.7093$
- E.  $1.7093$

## Question 18

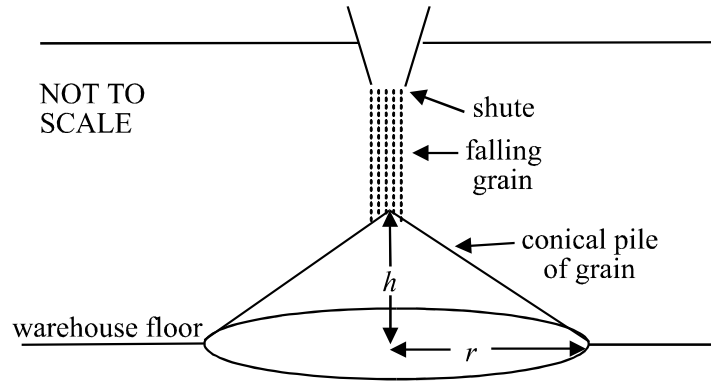


The graph of  $y = f(x)$  is shown above. If  $F(x)$  was an antiderivative of  $f(x)$ , then which one of the following set of features would the graph of  $y = F(x)$  have?

- A. a local maximum at  $x = -1$  and a local minimum at  $x = 1$ .
- B. a local maximum at  $x = -2$  and a local maximum at  $x = 1$ .
- C. a stationary point of inflection at  $x = 0$ , a local minimum at  $x = 1$  and a local maximum at  $x = -1$ .
- D. a stationary point of inflection at  $x = -2$  and a local maximum at  $x = 1$ .
- E. a stationary point of inflection at  $x = 1$  and a local minimum at  $x = -2$ .

**Question 19**

Grain is being dropped onto a warehouse floor through a chute in the roof of the warehouse.



The pile of grain is in the shape of a cone with radius,  $r$ , of the circular base twice the height,  $h$ , of the cone.

The volume,  $V$ , of grain delivered to the pile per second is  $2\text{m}^3\text{s}^{-1}$ .

The rate at which the height of the pile is increasing when the height of the pile is 2 metres is given by

- A.  $\frac{1}{8\pi} \text{ms}^{-1}$
- B.  $\frac{1}{4\pi} \text{ms}^{-1}$
- C.  $\frac{1}{2\pi} \text{ms}^{-1}$
- D.  $4\pi \text{ms}^{-1}$
- E.  $8\pi \text{ms}^{-1}$

**Question 20**

A particle moves in a straight line with velocity,  $v$ , and a displacement  $x$  from a fixed origin  $O$ . Its acceleration is given by  $\frac{1}{x+1}$ . Given that the particle started from rest at  $O$ , then the displacement of the particle when it is moving at  $\sqrt{2}\text{ms}^{-1}$  is given by

- A.  $e^{\sqrt{2}}$
- B.  $e - 1$
- C.  $e^{\sqrt{2}} - 1$
- D.  $e^2 - 1$
- E.  $\log_e(1 + \sqrt{2})$

**Question 21**

If  $\vec{OP} = -3\vec{i} + \vec{j} - 2\vec{k}$  and  $\vec{PQ} = 2\vec{i} - 3\vec{j} + 5\vec{k}$ , then  $\vec{OQ}$  equals

- A.  $-\vec{i} - 2\vec{j} + 3\vec{k}$
- B.  $\vec{i} + 2\vec{j} - 3\vec{k}$
- C.  $\vec{i} - 4\vec{j} + 7\vec{k}$
- D.  $-5\vec{i} - 4\vec{j} - 7\vec{k}$
- E.  $5\vec{i} - 4\vec{j} + 7\vec{k}$

**Question 22**

A vector, which has a magnitude of 5 and is parallel to  $2\vec{i} - 3\vec{j} - \vec{k}$  is

- A.  $10\vec{i} - 15\vec{j} - \vec{k}$
- B.  $\frac{1}{\sqrt{14}}(2\vec{i} - 3\vec{j} - \vec{k})$
- C.  $\frac{5}{\sqrt{14}}(2\vec{i} - 3\vec{j} - \vec{k})$
- D.  $\frac{5\sqrt{6}}{6}(2\vec{i} - 3\vec{j} - \vec{k})$
- E.  $\frac{\sqrt{5}\sqrt{14}}{5}(2\vec{i} - 3\vec{j} - \vec{k})$

**Question 23**

The vector resolute of  $2\vec{i} - \vec{j} + \vec{k}$  perpendicular to  $-\vec{i} + 2\vec{j} - 3\vec{k}$  is

- A.  $\frac{3}{2}\vec{i} - \frac{1}{2}\vec{k}$
- B.  $-\frac{1}{2}\vec{i} + \vec{j} - \frac{3}{2}\vec{k}$
- C.  $\frac{3}{2}\vec{i} + \frac{3}{2}\vec{j} - \frac{1}{2}\vec{k}$
- D.  $\frac{5}{2}\vec{i} - 2\vec{j} + \frac{5}{2}\vec{k}$
- E.  $\frac{7}{\sqrt{14}}(-\vec{i} + 2\vec{j} - 3\vec{k})$

**Question 24**

The position vector of a particle at time  $t$  is given by

$$\underline{r}(t) = \sin^{-1}\left(\frac{t}{3}\right)\underline{i} + \cos^{-1}\left(\frac{t}{3}\right)\underline{j} \quad 0 \leq t \leq 3.$$

The speed of the particle at time  $t = 1$  is

- A.  $\frac{1}{4}$
- B.  $\frac{1}{2}$
- C.  $\frac{\sqrt{2}}{2}$
- D.  $\frac{\sqrt{3}}{2}$
- E. 1

**Question 25**

The acceleration vector of a particle at time  $t$  is given by  $\underline{\ddot{r}}(t) = e^{-2t}\underline{i} + \cos(2t)\underline{j}$ ,  $t \geq 0$ .

Also,  $\underline{\dot{r}}(t) = -\frac{1}{2}\underline{i}$  and  $\underline{r}(t) = \frac{1}{4}\underline{i}$  when  $t = 0$ . The position vector of the particle is given by

- A.  $\underline{r} = 4e^{-2t}\underline{i} - 4\cos(2t)\underline{j}$
- B.  $\underline{r} = \frac{e^{-2t}}{-2}\underline{i} - \frac{\sin(2t)}{2}\underline{j}$
- C.  $\underline{r} = \frac{e^{-2t}}{4}\underline{i} - \cos(2t)\underline{j}$
- D.  $\underline{r} = \frac{e^{-2t}}{4}\underline{i} + \frac{1}{4}(1 - \cos(2t))\underline{j}$
- E.  $\underline{r} = \frac{e^{-2t}}{4}\underline{i} + \frac{1}{4}(1 + \cos(2t))\underline{j}$

**Question 26**

A particle is acted on by a force of magnitude  $\sqrt{2}$  newtons acting in a south-westerly direction and by a second force of 7 newtons acting due south. The magnitude of the resulting force in newtons is

- A.  $\sqrt{37}$
- B.  $2\sqrt{11}$
- C.  $\sqrt{51}$
- D.  $\sqrt{58}$
- E.  $\sqrt{65}$

**Question 27**

A particle of mass 3 kg is moving in a straight line. The velocity of the particle decreases from  $20 \text{ ms}^{-1}$  to  $15 \text{ ms}^{-1}$  over a period of 4 seconds. The change of momentum of the particle in  $\text{kg ms}^{-1}$  in the direction of the straight line is

- A.  $-15$
- B.  $\frac{-15}{4}$
- C.  $\frac{-5}{3}$
- D.  $5$
- E.  $20$

**Question 28**

A particle of mass 2 kg is being dragged across a rough horizontal surface by a force of magnitude 20 newtons acting at an angle of  $30^\circ$  to the horizontal. The acceleration of the particle is  $3 \text{ ms}^{-2}$ . The coefficient of friction between the particle and the rough surface is equal to

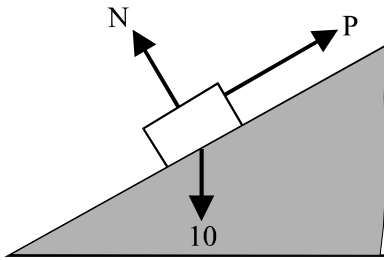
- A.  $\frac{10}{g}$
- B.  $\frac{5}{g-7}$
- C.  $\frac{7}{g-5\sqrt{3}}$
- D.  $\frac{5\sqrt{3}-3}{g}$
- E.  $\frac{5\sqrt{3}-3}{g-5}$

**Question 29**

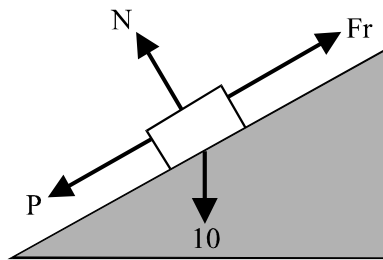
A particle of mass 10 kg is at rest on a rough inclined plane. A pulling force of  $P$  newtons is acting on the body parallel to the inclined plane. A normal force of  $N$  newtons together with a frictional force of  $Fr$  also act on the particle.

Which one of the following diagrams could show correctly the forces acting on the particle?

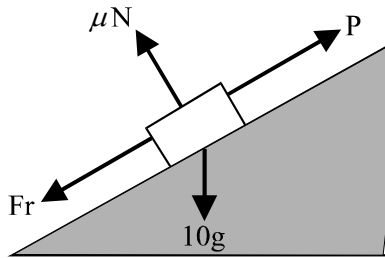
A.



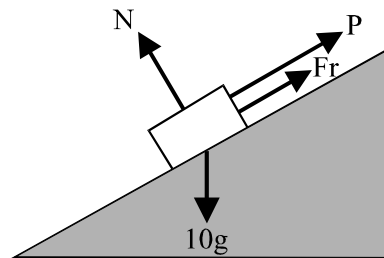
B.



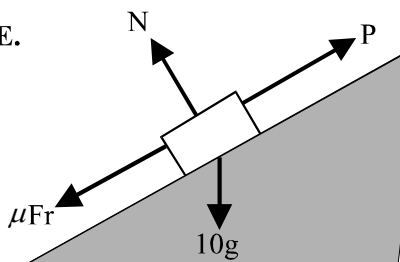
C.



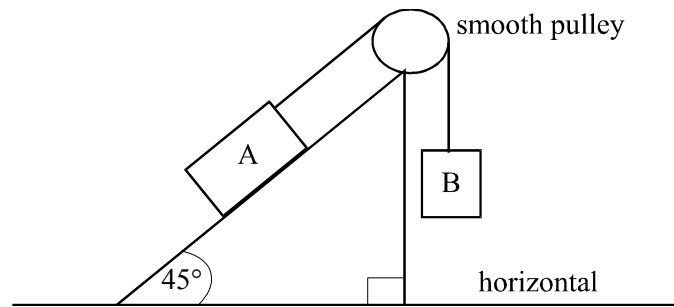
D.



E.



## Question 30



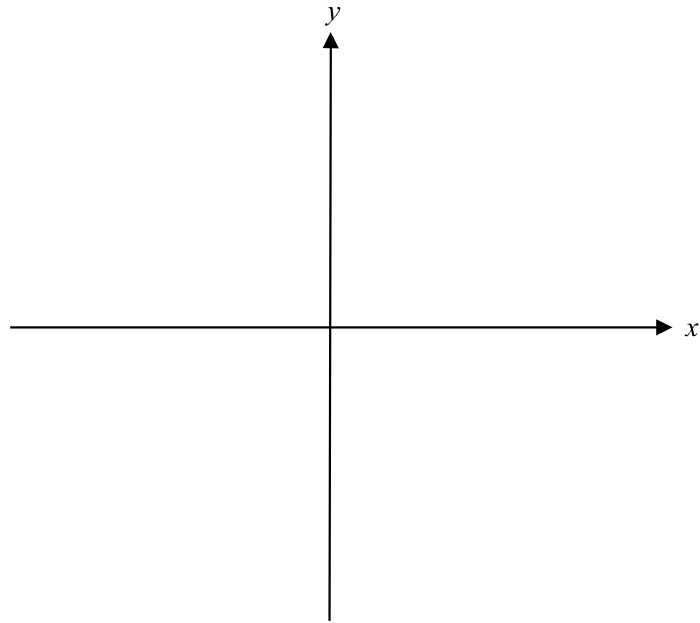
Two particles  $A$  and  $B$  with masses of  $m_A$  and  $m_B$  respectively are connected by a light inextensible string, which passes over a smooth pulley indicated in the diagram above. Particle  $A$  rests on a rough plane inclined at an angle of  $45^\circ$  to the horizontal. The system is on the point of slipping down the inclined plane. If  $\mu$  is the coefficient of friction between the plane and particle  $A$ ,  $T$  is the tension in the string and  $N$  is the normal force, then  $T$ , in newtons, is given by

- A.  $m_B$
- B.  $\mu m_A$
- C.  $\frac{m_A g}{\sqrt{2}}$
- D.  $m_A g \left( \mu + \frac{1}{\sqrt{2}} \right)$
- E.  $\frac{m_A g}{\sqrt{2}} (1 - \mu)$



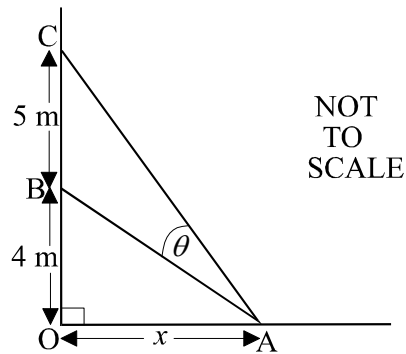
**PART II****Question 1**

Sketch the graph of  $y = 3x^2 + \frac{2}{x^2}$  on the set of axes below, labelling clearly all the features of the graph. Express answers correct to 1 decimal place where appropriate.



2 marks

## Question 2



A building is being constructed from pre-cast concrete slabs. A vertical wall panel is being supported by two metal struts which are anchored at the variable point  $A$  on the horizontal floor. The distance  $OB$  is 4 metres, the distance  $BC$  is 5 metres, the distance  $AO$  is  $x$  metres and the angle  $BAC$  is  $\theta$  radians.

Use an appropriate trigonometric identity to show that

$$\tan \theta = \frac{5x}{x^2 + 36}$$

---



---



---



---



---



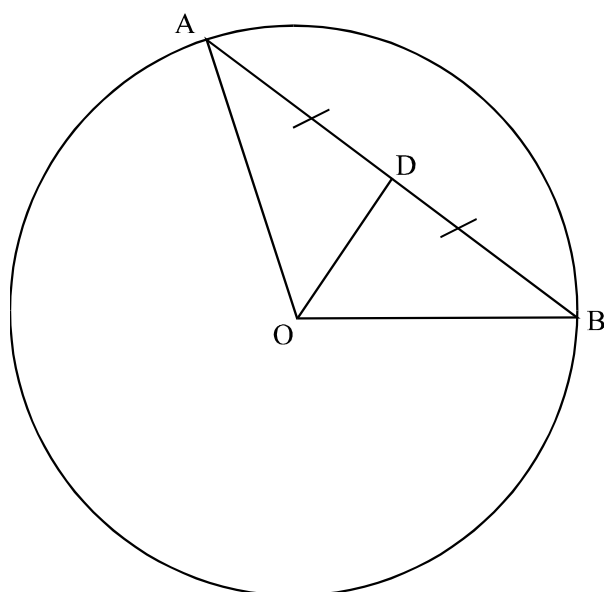
---



---

2 marks

## Question 3



The circle shown in the diagram above has its centre at  $O$  and the chord  $AB$  is bisected by  $OD$ .

Let  $\vec{OA} = \underline{u}$  and  $\vec{OB} = \underline{v}$ .

Use a vector method to prove that  $\angle BDO$  is a right angle.

---



---



---



---



---



---



---



---



---



---



---



---

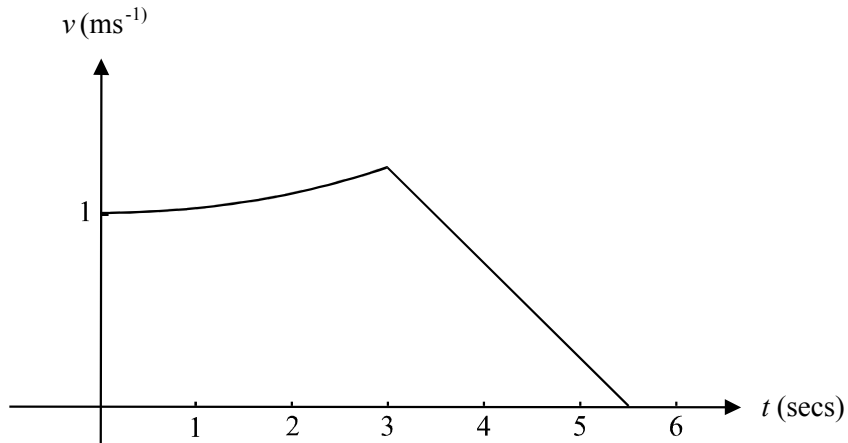
3 marks

**Question 4**

The velocity-time graph of a particle travelling in a straight line is given by

$$v(t) = \begin{cases} 5 & 0 \leq t < 3 \\ \sqrt{25 - t^2} & \\ -0.5t + 2.75 & 3 \leq t \leq 5.5 \end{cases}$$

The graph of this function is shown below.



- i. Find the acceleration of the particle at  $t = 2$ . Express your answer as an exact value.

---



---



---



---

1 mark

- ii. Find the distance travelled by the particle on its journey. Express your answer as an exact value.

---



---



---



---



---



---



---

3 marks

**Question 5**

Let  $p(z) = z^4 - 6z^3 + 16z^2 - 22z + 15$ .

- i. Find the remainder when  $p(z)$  is divided by  $z - 3i$ .

---



---



---

1 mark

- ii. Given that  $2 - i$  is a solution to the equation  $p(z) = 0$ , find all the solutions to this equation.

---



---



---



---



---



---



---



---



---



---



---



---



---



---



---



---

3 marks

**Question 6**

A tank initially contains 1000 litres of a solution made up of water and salt with a concentration of 10 grams per litre. A solution of water and salt with a concentration of 15 grams per litre is flowing into the tank at a rate of 20 litres per minute. The mixture in the tank is constantly stirred and is therefore kept uniform. The solution flows out of the tank at the rate of 20 litres per minute. Let  $Q$  be the quantity of salt present in the tank after  $t$  minutes.

- i. Show that the differential equation for  $Q$  in terms of  $t$  is given by

$$\frac{dQ}{dt} = 300 - \frac{Q}{50}.$$

---



---



---



---

1 mark

- ii. Hence find an expression for  $Q$  in terms of  $t$ .

---



---



---



---



---



---



---



---



---



---



---



---



---



---



---



---



---



---



---



---



---



---

4 marks

# SPECIALIST MATHEMATICS

## TRIAL EXAMINATION 1

### MULTIPLE- CHOICE ANSWER SHEET

STUDENT NAME:.....

### INSTRUCTIONS

Fill in the letter that corresponds to your choice. Example:  A  B  C  D  E

The answer selected is B. Only one answer should be selected.

- |  |  |  |
|--|--|--|
| 1. <input type="checkbox"/> A <input type="checkbox"/> B <input type="checkbox"/> C <input type="checkbox"/> D <input type="checkbox"/> E  | 11. <input type="checkbox"/> A <input type="checkbox"/> B <input type="checkbox"/> C <input type="checkbox"/> D <input type="checkbox"/> E | 21. <input type="checkbox"/> A <input type="checkbox"/> B <input type="checkbox"/> C <input type="checkbox"/> D <input type="checkbox"/> E |
| 2. <input type="checkbox"/> A <input type="checkbox"/> B <input type="checkbox"/> C <input type="checkbox"/> D <input type="checkbox"/> E  | 12. <input type="checkbox"/> A <input type="checkbox"/> B <input type="checkbox"/> C <input type="checkbox"/> D <input type="checkbox"/> E | 22. <input type="checkbox"/> A <input type="checkbox"/> B <input type="checkbox"/> C <input type="checkbox"/> D <input type="checkbox"/> E |
| 3. <input type="checkbox"/> A <input type="checkbox"/> B <input type="checkbox"/> C <input type="checkbox"/> D <input type="checkbox"/> E  | 13. <input type="checkbox"/> A <input type="checkbox"/> B <input type="checkbox"/> C <input type="checkbox"/> D <input type="checkbox"/> E | 23. <input type="checkbox"/> A <input type="checkbox"/> B <input type="checkbox"/> C <input type="checkbox"/> D <input type="checkbox"/> E |
| 4. <input type="checkbox"/> A <input type="checkbox"/> B <input type="checkbox"/> C <input type="checkbox"/> D <input type="checkbox"/> E  | 14. <input type="checkbox"/> A <input type="checkbox"/> B <input type="checkbox"/> C <input type="checkbox"/> D <input type="checkbox"/> E | 24. <input type="checkbox"/> A <input type="checkbox"/> B <input type="checkbox"/> C <input type="checkbox"/> D <input type="checkbox"/> E |
| 5. <input type="checkbox"/> A <input type="checkbox"/> B <input type="checkbox"/> C <input type="checkbox"/> D <input type="checkbox"/> E  | 15. <input type="checkbox"/> A <input type="checkbox"/> B <input type="checkbox"/> C <input type="checkbox"/> D <input type="checkbox"/> E | 25. <input type="checkbox"/> A <input type="checkbox"/> B <input type="checkbox"/> C <input type="checkbox"/> D <input type="checkbox"/> E |
| 6. <input type="checkbox"/> A <input type="checkbox"/> B <input type="checkbox"/> C <input type="checkbox"/> D <input type="checkbox"/> E  | 16. <input type="checkbox"/> A <input type="checkbox"/> B <input type="checkbox"/> C <input type="checkbox"/> D <input type="checkbox"/> E | 26. <input type="checkbox"/> A <input type="checkbox"/> B <input type="checkbox"/> C <input type="checkbox"/> D <input type="checkbox"/> E |
| 7. <input type="checkbox"/> A <input type="checkbox"/> B <input type="checkbox"/> C <input type="checkbox"/> D <input type="checkbox"/> E  | 17. <input type="checkbox"/> A <input type="checkbox"/> B <input type="checkbox"/> C <input type="checkbox"/> D <input type="checkbox"/> E | 27. <input type="checkbox"/> A <input type="checkbox"/> B <input type="checkbox"/> C <input type="checkbox"/> D <input type="checkbox"/> E |
| 8. <input type="checkbox"/> A <input type="checkbox"/> B <input type="checkbox"/> C <input type="checkbox"/> D <input type="checkbox"/> E  | 18. <input type="checkbox"/> A <input type="checkbox"/> B <input type="checkbox"/> C <input type="checkbox"/> D <input type="checkbox"/> E | 28. <input type="checkbox"/> A <input type="checkbox"/> B <input type="checkbox"/> C <input type="checkbox"/> D <input type="checkbox"/> E |
| 9. <input type="checkbox"/> A <input type="checkbox"/> B <input type="checkbox"/> C <input type="checkbox"/> D <input type="checkbox"/> E  | 19. <input type="checkbox"/> A <input type="checkbox"/> B <input type="checkbox"/> C <input type="checkbox"/> D <input type="checkbox"/> E | 29. <input type="checkbox"/> A <input type="checkbox"/> B <input type="checkbox"/> C <input type="checkbox"/> D <input type="checkbox"/> E |
| 10. <input type="checkbox"/> A <input type="checkbox"/> B <input type="checkbox"/> C <input type="checkbox"/> D <input type="checkbox"/> E | 20. <input type="checkbox"/> A <input type="checkbox"/> B <input type="checkbox"/> C <input type="checkbox"/> D <input type="checkbox"/> E | 30. <input type="checkbox"/> A <input type="checkbox"/> B <input type="checkbox"/> C <input type="checkbox"/> D <input type="checkbox"/> E |