



# THE SCHOOL FOR EXCELLENCE (TSFX)

## UNIT 3 PHYSICS 2010

### WRITTEN EXAMINATION 1

Reading Time: 15 minutes  
Writing Time: 1 hour 30 minutes

### QUESTION AND ANSWER BOOK

#### Structure of Book

<i>Section</i>	<i>Number of Questions</i>	<i>Number of Questions to be Answered</i>	<i>Number of Marks</i>
<b>A</b>	<b>Core Studies</b>		
	Motion	18	37
	Electronics and Photonics	16	27
<b>B</b>	<b>Detailed Studies</b>		
	1. Einstein's Special Relativity <b>OR</b>	13	26
	2. Further Electronics <b>OR</b>	13	26
	3. Structures and Materials	13	26
			Total 90

### COMPLIMENTS OF THE SCHOOL FOR EXCELLENCE

Voted Number One For Excellence and Quality in VCE Programs and Tutorials.



## THE SCHOOL FOR EXCELLENCE (TSFX)

The School For Excellence (**TSFX**) is an independent organisation that provides educational services to Year 11 and 12 students out of school hours. These services include the development and delivery of intense revision courses before examinations, intense weekly tuition classes, study skills lectures, as well as specialised courses that prepare students in advance of each school term.

The educational programs conducted by **TSFX** are widely recognised for providing the highest quality programs in Victoria today. Our programs are the result of more than 16 years of collaborative effort and expertise from dozens of teachers and schools across the state, ensuring the highest possible quality resources and teaching styles for VCE students.

### FREE VCE RESOURCES AT VCEDGE ONLINE

**VCEdge Online** is an educational resource designed to provide students the best opportunities to optimise their Year 11 or 12 scores. **VCEdge Online** members receive over \$300 worth of resources at **no charge**, including:

- Subject notes and course summaries.
- Sample A+ SACS, essays, projects and assignments.
- Trial examinations with worked solutions.
- Weekly study tips and exam advice (in the weeks leading up to the examinations)
- Two **FREE** tickets into an intense examination strategy lecture (valued at \$300!!!).
- Cheat sheets and formula cards.
- Critical VCE updates.
- Free VCE newsletters.
- Information on upcoming educational events.
- And much, much more!!!

**JOIN FREE OF CHARGE AT [WWW.TSFX.COM.AU](http://WWW.TSFX.COM.AU)**

### PRINTING SPECIFICATIONS

Please ensure that the paper size on your printer is selected as **A4** and that you select "**None**" under "Page Scaling".

## SECTION A – CORE STUDIES

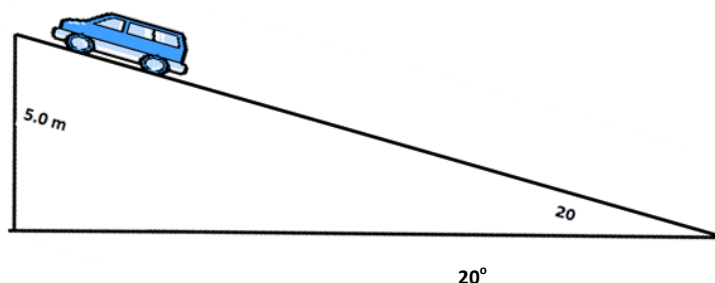
### Instructions For Section A

Answer **all** questions for **both** Areas of Study in this section of the paper.  
You should take the value of  $g$  to be  $10 \text{ ms}^{-2}$ .  
Unless stated otherwise, ignore air resistance.

### AREA OF STUDY 1: MOTION IN ONE AND TWO DIMENSIONS

*Questions 1 to 3 refer to the following information:*

A 1000 kg car is parked on a  $20^\circ$  incline.



#### QUESTION 1

What is the magnitude of the normal reaction force exerted on the car?

2 marks

#### QUESTION 2

The handbrake fails to completely hold and the car begins to roll downhill. By the time the car has reached the bottom of the hill it has gained a speed of  $6.0 \text{ ms}^{-1}$ . How much work has been done by friction on the vehicle?

2 marks

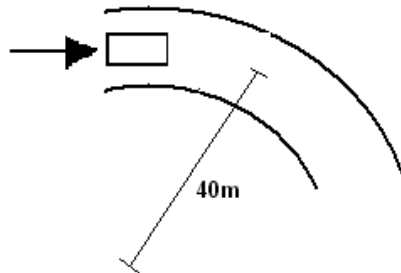
#### QUESTION 3

What is the average frictional force exerted on the car?

2 marks

**Questions 4 to 6 refer to the following information:**

A 1.2 tonne car is travelling around a bend in the road as shown below. The car is moving at a constant speed in a circular path of radius 40 m, and the road surface is horizontal.



**QUESTION 4**

What force must be exerted by the road in order for the car to safely travel around the bend at  $20 \text{ ms}^{-1}$ ?

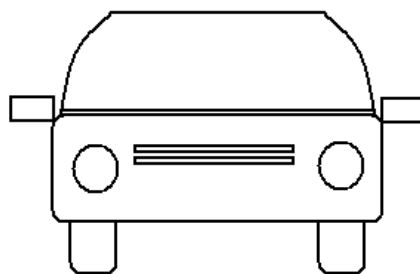
2 marks

N
---

**QUESTION 5**

The diagram below depicts the front of the vehicle as it is travelling around the bend of the road. Draw labelled arrows on the diagram to show all the forces acting on the car.

3 marks



### QUESTION 6

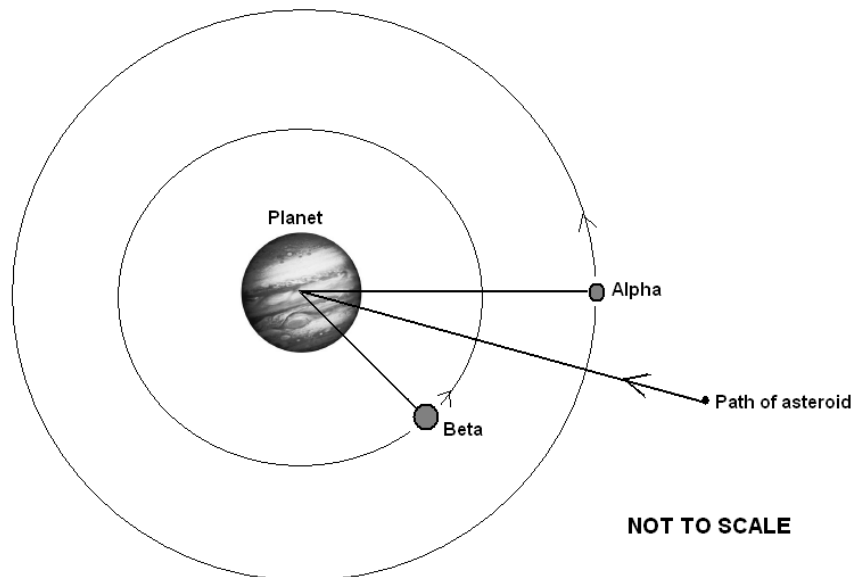
Because many cars fail to take the bend safely and skid off the road, engineers decide to bank the road for a design speed of  $15 \text{ ms}^{-1}$ . At this speed there would be no sideways frictional force necessary for the car to travel around the bend. Determine the angle that the road should be banked.

2 marks

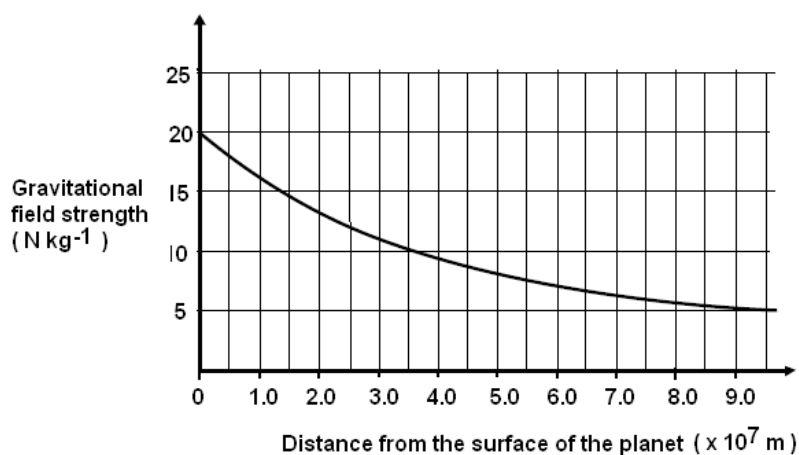
degrees

**Questions 7 to 13 refer to the following information:**

A planet discovered outside our Solar system was found to have a number of moons in circular orbit around it. Two of these moons were named Alpha and Beta. A 24 tonne asteroid was also observed on a collision course with the planet.



The following graph shows the gravitational field above the surface of the planet.



**QUESTION 7**

What is the gravitational field strength at an altitude of  $9.5 \times 10^7$  m above the planet's surface?

1 mark

N kg <sup>-1</sup>
--------------------

**QUESTION 8**

As the 24 tonne asteroid passes the orbit of Alpha it has an altitude of  $9.5 \times 10^7$  m and a velocity of  $3.6 \times 10^3$  ms<sup>-1</sup>. What is the kinetic energy of the asteroid?

2 marks

J
---

**QUESTION 9**

What energy transformation occurs as the asteroid approaches the surface of the planet?

1 mark

**QUESTION 10**

Determine the gain in kinetic energy of the asteroid as it moves from an altitude of  $9.5 \times 10^7$  m to the point where it impacts the planet's surface.

3 marks

J
---

**QUESTION 11**

What will be the speed of the asteroid as it slams into the surface of the planet?

2 marks

$\text{m s}^{-1}$
-------------------

**Below is astronomical data that may be used in Question 12:**

The orbital radius of Alpha's orbit is  $1.9 \times 10^8 \text{ m}$ .

Mass of planet =  $2.7 \times 10^{27} \text{ kg}$

**QUESTION 12**

Determine the period of Alpha's orbit.

2 marks

s
---

**QUESTION 13**

This question considers the orbital speeds of the planet's moons. Select the *best* alternative:

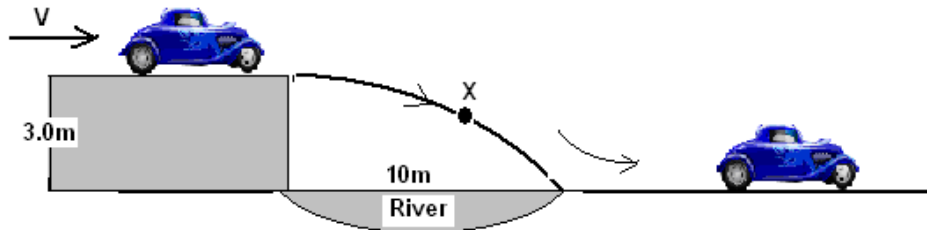
- A. The speed of Alpha is greater than the speed of Beta.
- B. The speed of Alpha is less than the speed of Beta.
- C. Alpha and Beta will have similar speeds.
- D. It is not possible to determine the relative speeds as the mass of the moons has not been provided.

2 marks

--

**Questions 14 to 18 refer to the following information:**

A car travelling at  $V \text{ ms}^{-1}$  drives off a 3.0 m high horizontal ramp in order to jump across a 10 m river. Ignore the effects of wind resistance in this problem. The mass of the car is 1200 kg, and the mass of the driver is 80 kg.



**QUESTION 14**

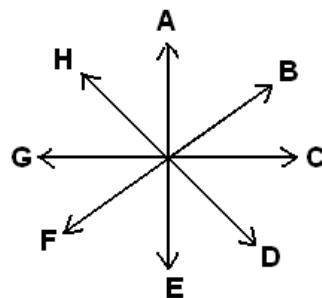
Calculate the minimum speed that the car should leave the ramp in order to land on the road across the river.

3 marks

$\text{m s}^{-1}$
-------------------

**QUESTION 15**

Write the letter for the arrow that best represents the net force acting on the car at point 'X'.



2 marks

--



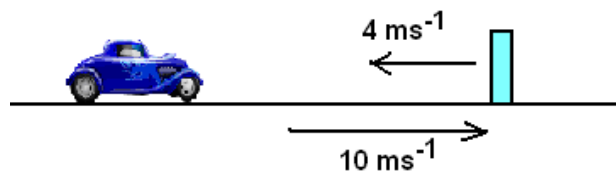
**QUESTION 16**

Assume the car leaves the ramp with a speed of  $13 \text{ ms}^{-1}$ . What is the magnitude of the velocity of the car as it impacts the road on the other side of the river?

2 marks

$\text{m s}^{-1}$
-------------------

After crossing the river, the car travelling at  $10 \text{ ms}^{-1}$  collides into a flexible safety barrier and rebounds at  $4 \text{ ms}^{-1}$ . The period of the impact of the car with the safety barrier was 0.4 seconds.



**QUESTION 17**

Determine the average force acting on the **driver** during the impact with the safety barrier.

2 marks

N
---

**QUESTION 18**

Was the collision with the safety barrier elastic or inelastic? Justify your answer.

---

---

---

---

---

2 marks

**End of Section on Motion in One and Two Dimensions**

## AREA OF STUDY 2: ELECTRONICS AND PHOTONICS

Questions 1 to 4 refer to the following information:

Matthew has only four  $10\ \Omega$  resistors available.

### QUESTION 1

Determine the maximum resistance Matthew can create using these four resistors.

1 mark

### QUESTION 2

Determine the minimum resistance Matthew can create using these four resistors.

1 mark

### QUESTION 3

Which of the following effective resistances **cannot** be created using all four of the resistors?

- A.  $6.7\ \Omega$
- B.  $10.0\ \Omega$
- C.  $13.3\ \Omega$
- D.  $25.0\ \Omega$

2 marks

Matthew now replaces **one** of the  $10\ \Omega$  resistors with a  $20\ \Omega$  resistor.

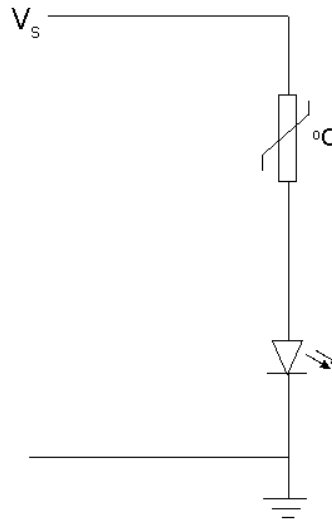
### QUESTION 4

Determine the maximum current Matthew can now draw from a  $12\ \text{V}$  battery when all four resistors are simultaneously in a circuit.

2 marks

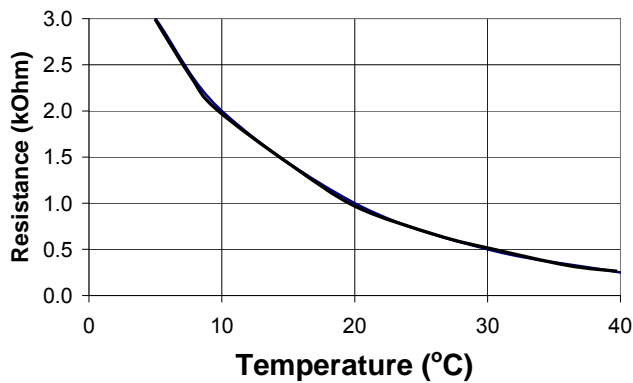
**Questions 5 to 8 refer to the following information:**

Emily is designing a circuit to function as a warning system on her campsite refrigerator. Her circuit will consist of a thermistor, an LED and a variable voltage supply  $V_s$  as shown in Figure 1.

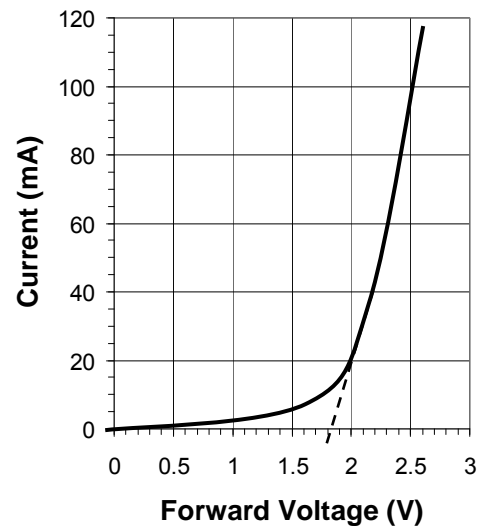


**Figure 1**

The characteristic curves for the thermistor and the LED are shown in Figures 2 and 3 respectively.



**Figure 2**



**Figure 3**

**QUESTION 5**

Determine the resistance of the thermistor (in  $k\Omega$ ) when the temperature is  $10^\circ\text{C}$ .

$k\Omega$

1 mark

**QUESTION 6**

Determine the threshold voltage for the LED.

1 mark

Emily sets the supply voltage at 25.8 V.

**QUESTION 7**

Determine the current in the LED when the temperature is 10°C.

2 marks

The current needs to be at least 10 mA to ensure the LED is visible and it should be visible when the temperature rises above 10°C.

**QUESTION 8**

Will Emily's circuit work as she intends? Provide reasons for your answer.

---

---

---

3 marks

**QUESTION 9**

Which of the following is most likely to be referred to as an "ohmic device"?

- A. A diode.
- B. A resistor.
- C. A thermistor.
- D. A light dependent resistor.

1 mark

**QUESTION 10**

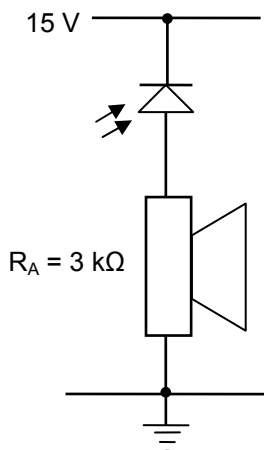
Which of the following is most likely to respond as an “ohmic device” when all variables other than voltage and current are kept constant?

- A. A diode.
- B. An incandescent light globe.
- C. A light emitting diode.
- D. A light dependent resistor.

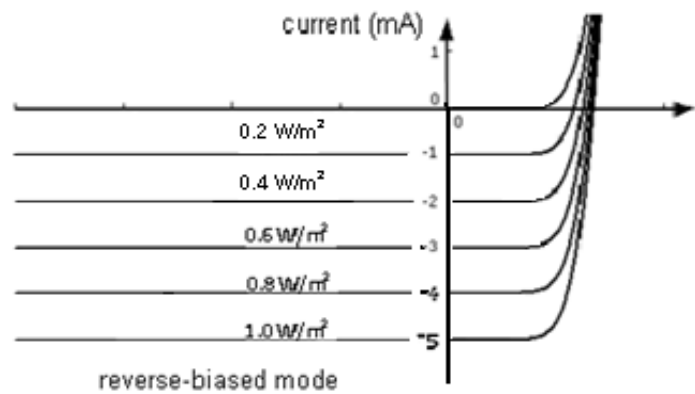
2 marks

**Questions 11 and 12 refer to the following information:**

A security system includes a 15 V battery, an alarm (resistance:  $R_A$ ) and a photodiode as shown in Figure 4. The current–voltage characteristics for the photodiode are shown in Figure 5. The intensity of the incident light (units:  $W/m^2$ ) can be varied and the resulting photodiode current is found to be proportional to the intensity of incident light. The alarm requires a potential difference of at least 6.0 V across it before it is considered adequately audible.



**Figure 4**



**Figure 5**

**QUESTION 11**

Estimate the light intensity required to make the alarm adequately audible.

2 marks

**QUESTION 12**

Over time, the voltage of the battery reduces to 11 V. At this time, what will be the minimum light intensity that the alarm can adequately respond to?

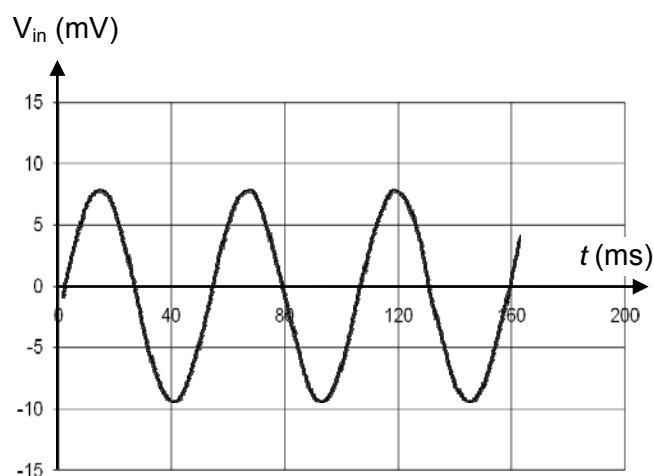
W/m<sup>2</sup>

1 mark

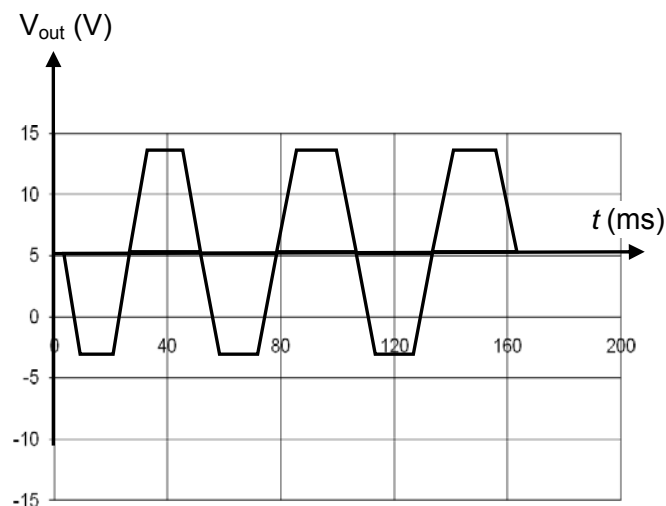
**Questions 13 and 14 refer to the following information:**

The input voltage signal shown in Figure 6 is passed through an amplifier and the resultant output signal is shown in Figure 7.

**Figure 6**



**Figure 7**



**QUESTION 13**

Estimate the frequency of the input signal as in Figure 6.

Hz

2 marks

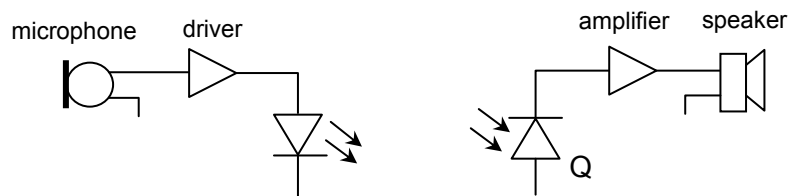
**QUESTION 14**

In describing the characteristics of this amplifier, circle one of the most appropriate of the two options for **each** of the **three** underlined characteristics.

<u>Nature of amplifier</u>	<u>Linear Voltage Gain</u>	<u>Clipped at...</u>
<i>Inverting</i>	<i>1.4</i>	$\pm 8.5 V$
or	or	or
<i>Non-inverting</i>	<i>1400</i>	$\pm 17 V$

3 marks

Figure 8 shows simplified sections of an optical-electrical system designed to transfer a telephone signal.



**Figure 8**

**QUESTION 15**

Which of the following sequences best describes the transfer of energy through this process?

- A. sound → electrical → light → electrical → sound
- B. sound → light → electrical → light → sound
- C. sound → light → electrical → sound
- D. light → electrical → sound

1 mark

**QUESTION 16**

In the system shown in Figure 8 the detecting input transducer (Q) is a photodiode. Name two other devices that could serve this purpose.



2 marks

**End of Electronics and Photonics Section**

## SECTION B – DETAILED STUDIES

### Instructions For Section B

Choose one of the following **Detailed Studies**. Answer all the questions on the **Detailed Study** you have chosen.

### DETAILED STUDY 1 – EINSTEIN'S SPECIAL RELATIVITY

#### QUESTION 1

Which of the following results from Maxwell's equations with respect to the speed of light?

- A. Nothing can travel faster than the speed of light.
- B. The speed of light only depends on the electrical and magnetic properties of the medium through which light is passing.
- C. The speed of light depends on the speed of the medium through which the light is passing.
- D. The speed of light depends on the speed of the source of the light.

2 marks

#### QUESTION 2

Which of the following best describes the classical principle of relativity?

- A. There is a reference point in the universe at zero velocity.
- B. There is no reference point in the universe at zero velocity.
- C. Nothing can travel faster than the speed of light.
- D. Physics is the same in all inertial reference frames.

2 marks

#### QUESTION 3

Which of the following describes Einstein's two postulates for special relativity?

- A. Physics is the same in all reference frames and speed of light is constant for all observers.
- B. Physics is the same in all reference frames and speed of light is constant for all inertial observers.
- C. Physics is the same in all inertial reference frames and speed of light is constant for all observers.
- D. Physics is the same in all inertial reference frames and speed of light is constant for all inertial observers.

2 marks



**QUESTION 4**

The aim of the Michelson-Morley experiment was to observe the change in interference pattern due to

- A. The change in seasons.
- B. Rotating the apparatus.
- C. The ether wind.
- D. The speed of the Earth.

2 marks

**QUESTION 5**

The length contraction of an object occurs when travelling close to the speed of light because

- A. Time slows down when travelling close to the speed of light.
- B. Length only contracts in the direction of motion.
- C. The length only appears to get smaller but really stays the same.
- D. The speed of light is constant for all observers.

2 marks

***The following information refers to Questions 6 to 9:***

Harry is stationed on a space station in deep space. Sally is on a spaceship travelling at 90% of the speed of light. Sally sends a 10 second radio message to Harry.

**QUESTION 6**

Which of the following is the proper time of the radio signal?

- A. Time measured by Sally.
- B. Time measured by Harry.
- C. 90% of the time measured by Sally.
- D. 90% of the time measured by Harry.

2 marks

**QUESTION 7**

Which of the following best estimates the time the radio message takes according to Harry?

- A. 2.3 seconds.
- B. 19.0 seconds.
- C. 22.9 seconds.
- D. 31.6 seconds.

2 marks

**QUESTION 8**

Which of the following is the proper length of Sally's spaceship?

- A. Length measured by Harry.
- B. Length measured by Sally.
- C. 90% of the length measured by Harry.
- D. 90% of the length measured by Sally.

2 marks

**QUESTION 9**

If Harry measures Sally's spaceship to be 200 m long, which of the following best estimates the length of the ship according to Sally?

- A. 63 m
- B. 87 m
- C. 145 m
- D. 458 m

2 marks

*The following information refers to Questions 10 to 12:*

1 GeV muons are being used in a high energy particle experiment. The rest mass of a single muon is 105.7 MeV ( $e = 1.6 \times 10^{-16}$ ,  $c = 3 \times 10^8$ ).

**QUESTION 10**

What is the rest mass of the muon in kilograms?

- A.  $5.6 \times 10^{-20}$  kg
- B.  $1.9 \times 10^{-28}$  kg
- C.  $1.9 \times 10^{-35}$  kg
- D.  $5.9 \times 10^{-43}$  kg

2 marks

**QUESTION 11**

What is the kinetic energy of the high energy muons?

- A. 6 MeV
- B. 105 MeV
- C. 890 MeV
- D. 1000 MeV

2 marks

**QUESTION 12**

What is the speed of the muons in multiples of  $c$ ?

- A.  $0.82 c$
- B.  $0.94 c$
- C.  $0.99 c$
- D.  $9 c$

2 marks

**QUESTION 13**

Which of the following best describes why matter does not travel at the speed of light?

- A. The speed of light is constant for all observers.
- B. Time dilation.
- C. Length contraction.
- D. Inertia becomes infinite.

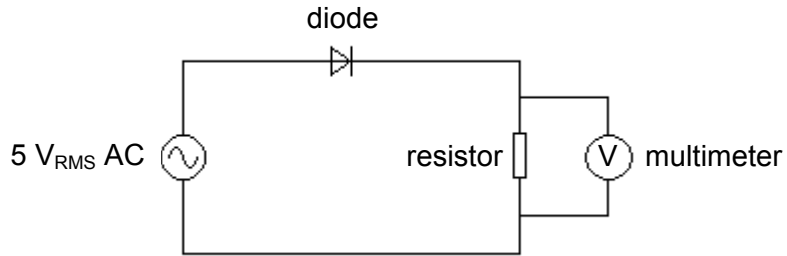
2 marks

**End of Einstein's Special Relativity Section**

## DETAILED STUDY 2 – FURTHER ELECTRONICS

Questions 1 and 2 refer to the following information:

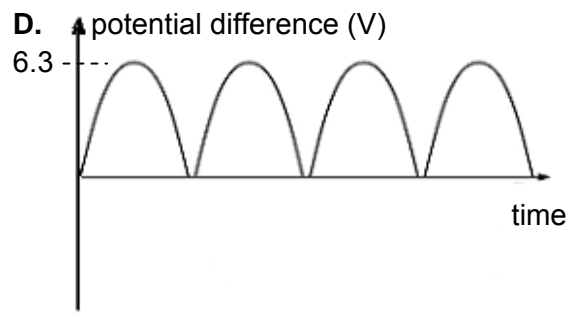
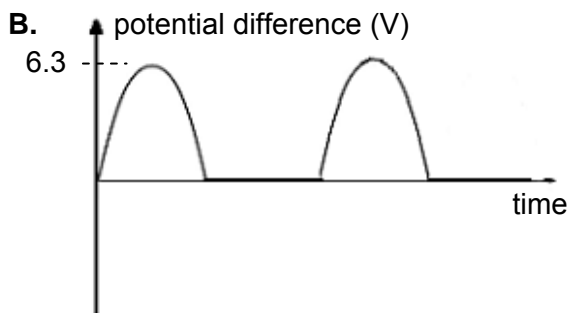
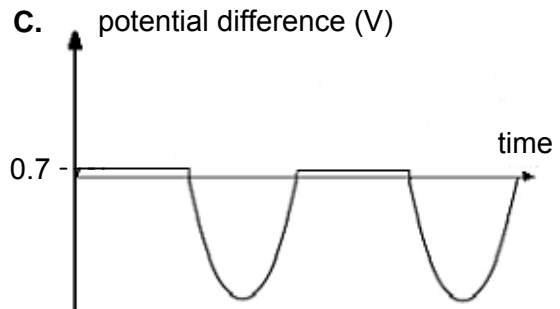
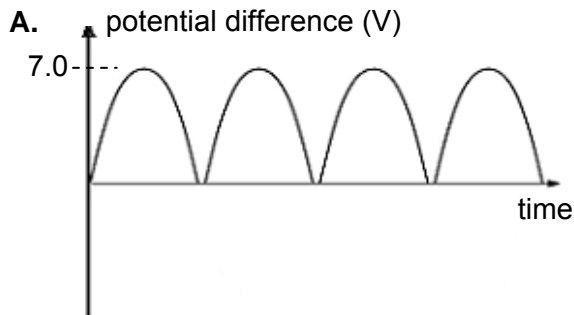
A circuit uses a  $5V_{\text{RMS}}$  AC source, a silicon diode (switch-on voltage =  $0.7\text{V}$ ) and a multimeter to measure (and graph) the potential difference across a resistor, as in Figure 1.



**Figure 1**

### QUESTION 1

Which of the following graphs (A – D) best represents the resulting variation in potential difference across the resistor?




2 marks

**QUESTION 2**

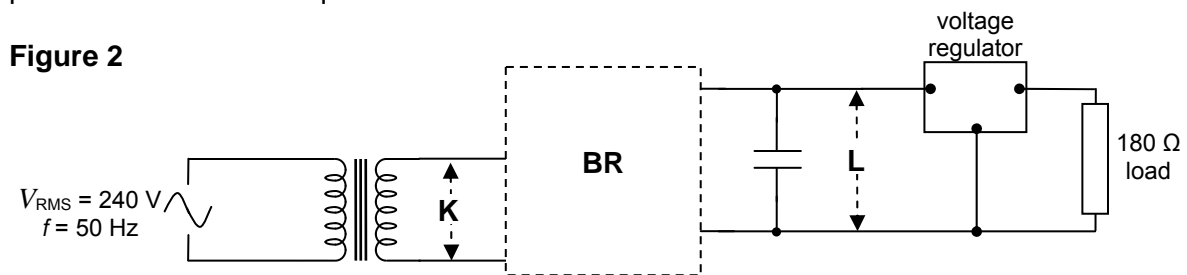
The action of the circuit in Figure 1 would be best described as:

- A. Half-wave rectifying.
- B. Half-wave regulating.
- C. Full wave rectifying.
- D. Full wave regulating.

2 marks

**Questions 3 to 10 refer to the following information:**

Figure 2 shows a correctly set up and operating rectified, smoothed and regulated 12 V DC power supply other than the bridge rectifier which can be placed in position **BR**. Testing devices such as a multimeter or a Cathode Ray Oscilloscope (CRO) can be connected in positions **K** and **L** as required.



**QUESTION 3**

Which of the following arrangement of diodes (as a bridge rectifier) correctly completes the circuit in Figure 2 to serve the purpose intended?

- A. B. C. D.

2 marks

**QUESTION 4**

How much power is dissipated in the load if its resistance is 180  $\Omega$ ?

- A. 0.8 W
- B. 8.0 W
- C. 32 W
- D. 320 W

2 marks

A multimeter (set on AC volts) connected at **K** reads  $16 V_{RMS}$ . The secondary winding of the transformer has 200 turns and the transformer can be considered to be ideal.

**QUESTION 5**

How many turns are in the primary winding of the transformer?

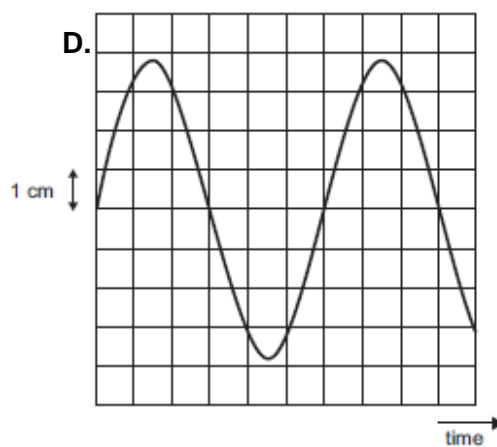
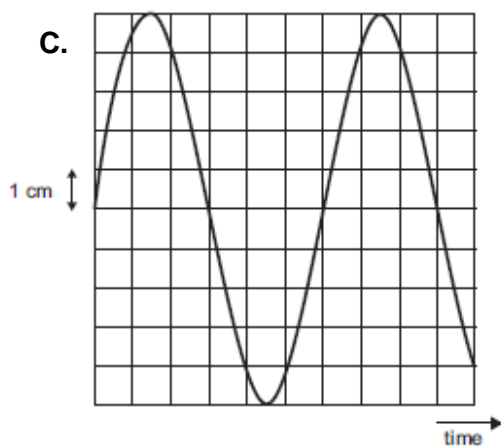
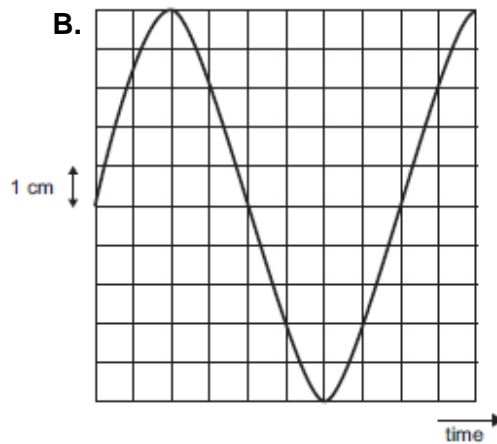
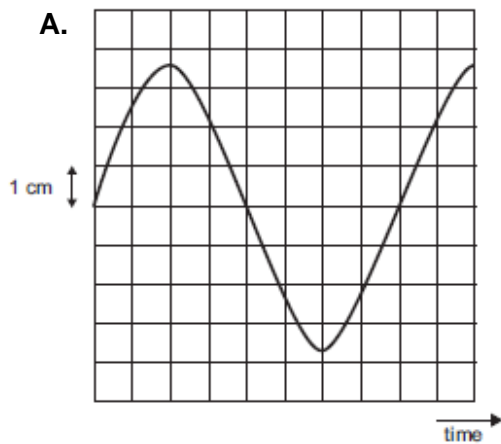
- A. 1000
- B. 2000
- C. 3000
- D. 4000

2 marks

The circuit is tested using a CRO connected in position **K**. The screen has a grid of  $1 \text{ cm}^2$  squares. The vertical scale is set to  $4.5 \text{ V/cm}$  and the horizontal scale is set to  $2.5 \text{ ms/cm}$ .

**QUESTION 6**

Which of the following sketches (**A-D**) is most likely to be the display seen on the screen of the CRO?




2 marks

An accident causes a brief power surge during which the AC power supply raises to  $390 V_{RMS}$  instead of the usual  $240 V_{RMS}$ .

**QUESTION 7**

During this time, what would be the DC output voltage supplied across the  $180 \Omega$  resistor?

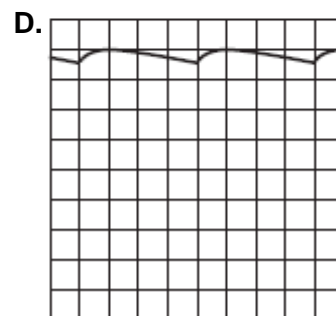
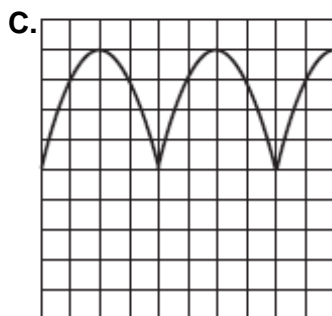

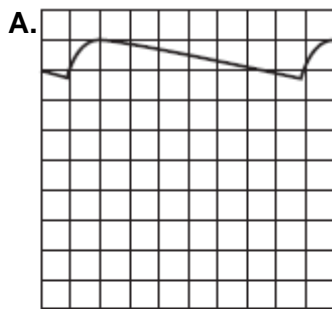
- A. 12.0 V
- B. 14.5 V
- C. 17.0 V
- D. 19.5 V

2 marks

With the AC supply returned to  $240 V_{RMS}$ , the CRO is connected at position L with the same scale settings as before.

**QUESTION 8**

Which of the following (A-D) is most likely to be the display on the screen of the CRO?




2 marks

**QUESTION 9**

Which of the following measuring devices (**A-D**) below should be placed in position **L** to study the voltage at this point in the circuit?

- A. A CRO.
- B. A DC voltmeter.
- C. An AC ammeter.
- D. A DC ammeter.

2 marks

The  $180\ \Omega$  load resistor (across the DC power supply circuit) is replaced by a  $470\ \Omega$  resistor.

**QUESTION 10**

Which of the following best describes the resulting effects on the output voltage across the load resistor and the output current in the load resistor?

	Output Voltage	Output Current
<b>A.</b>	Increases	Increases
<b>B.</b>	Increases	Remains the same
<b>C.</b>	Remains the same	Decreases
<b>D.</b>	Decreases	Decreases

2 marks

**QUESTION 11**

Along with a “smooth” voltage signal which of the following is also desired?

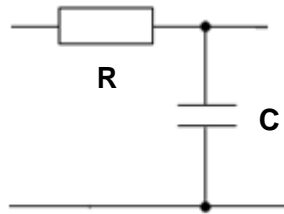
- A. Maximum resistance in the circuit.
- B. A signal voltage of minimum average amplitude.
- C. Minimum capacitance in the circuit.
- D. A ripple voltage of minimum amplitude.

2 marks



**The following information applies to Questions 12 and 13:**

A student trials various combinations of a resistor (**R**) and a capacitor (**C**) to find the longest time constant ( $\tau$ ) for a circuit they are constructing.



**Figure 3**

**QUESTION 12**

Which of the following combinations will result in the longest time constant?

	Resistance (k $\Omega$ )	Capacitance ( $\mu$ F)
<b>A.</b>	2	400
<b>B.</b>	3	300
<b>C.</b>	4	200
<b>D.</b>	5	100

2 marks

It's decided that the time constant should be 1.5 seconds but only a 250  $\mu$ F capacitor is available.

**QUESTION 13**

What should be the resistance of the subsequent resistor to be used?

- A.**  $1.67 \times 10^{-4} \Omega$
- B.**  $3.75 \times 10^{-4} \Omega$
- C.**  $1.67 \times 10^3 \Omega$
- D.**  $6.00 \times 10^3 \Omega$

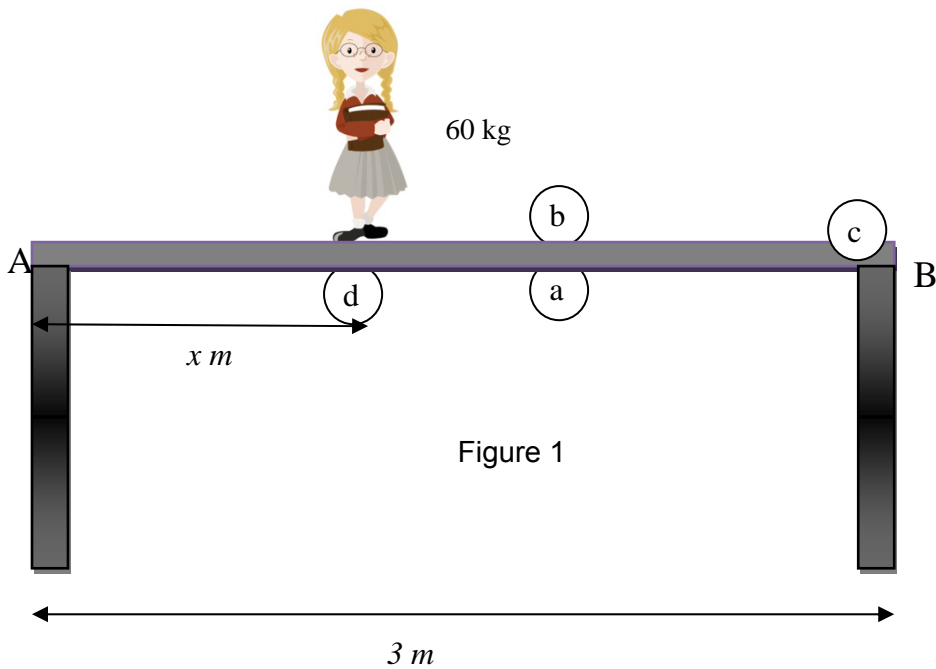
2 marks

**End of Further Electronics Section**

## DETAILED STUDY 3: MATERIALS AND STRUCTURES

Questions 1 to 4 refer to the following information:

A Year 12 Physics student is testing the forces acting on a 3 m plank of wood which is resting on two supports at either end, A and B. The student stands a distance  $x$  m from support A on the plank and their mass of 60 kg is held, as in Figure 1. We can assume the plank of wood has negligible mass.



### QUESTION 1

Which of the following best describes the forces acting on the plank?

	Tension	Compression	Weight
<b>A</b>	c	b	d
<b>B</b>	a	b	d
<b>C</b>	b	a	c
<b>D</b>	a	b	c

2 marks

**QUESTION 2**

Which of the following best estimates the distance for  $x$  such that the supporting force from A is **twice** the supporting force from B?

- A. 0.5 m
- B. 1 m
- C. 1.5 m
- D. 2 m

2 marks

**QUESTION 3**

Which of the following is the normal force acting on the plank at B?

- A. 20 N
- B. 200 N
- C. 300 N
- D. 600 N

2 marks

**QUESTION 4**

What is the maximum force that support A will experience with the student standing anywhere on the plank?

- A. 100 N
- B. 300 N
- C. 600 N
- D. 1200 N

2 marks

Questions 5 to 7 refer to the following information:

Figure 2 shows the stress-strain graph to fracture for 4 materials.

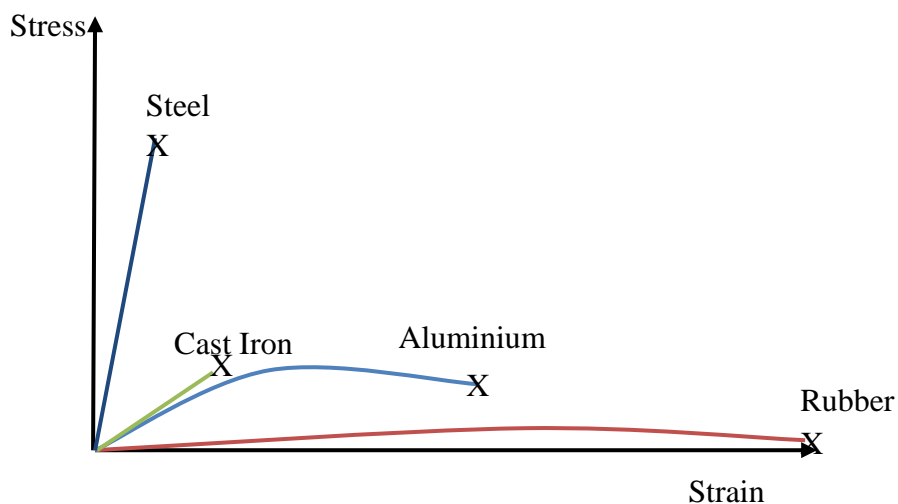


Figure 2

**QUESTION 5**

Which of the following materials has the largest strain energy per unit volume of material?

- A. Cast Iron
- B. Steel
- C. Aluminium
- D. Rubber

2 marks

**QUESTION 6**

Which of the following materials is the most ductile?

- A. Cast Iron
- B. Steel
- C. Aluminium
- D. Rubber

2 marks

**QUESTION 7**

Which of the following materials has the largest Young's Modulus?

- A. Cast Iron
- B. Steel
- C. Aluminium
- D. Rubber

2 marks

**QUESTION 8**

A steel pylon is used to support a large structure. The pylon has a surface area of  $35 \text{ mm}^2$  and a length of 3 m. The pylon supports a force of  $3 \times 10^3 \text{ N}$ . The Young's modulus for steel is 205 GPa. Which of the following best estimates the length that the pylon is compressed?

- A. 0.125 mm
- B. 1.25 mm
- C. 12.5 mm
- D. 125 mm

2 marks

Questions 9 and 10 refer to the following information:

Figure 3 is a stress-strain graph of Al.

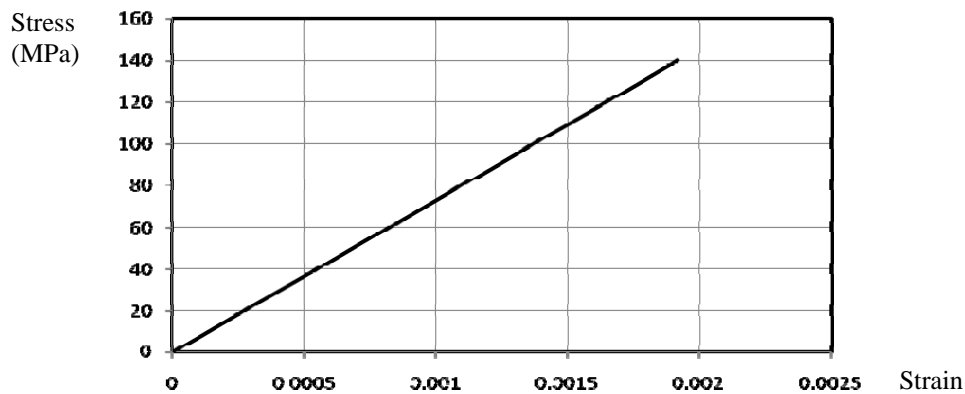


Figure 3

**QUESTION 9**

Which of the following best estimates the strain energy per unit volume of the Al under a stress of 120 MPa?

- A. 0.1 J
- B. 0.2 J
- C. 100000 J
- D. 200000 J

**QUESTION 10**

Which of the following best estimates the Young's modulus for Al?

- A. 70 Pa
- B. 70 kPa
- C. 70 MPa
- D. 70 GPa

2 marks

**QUESTION 11**

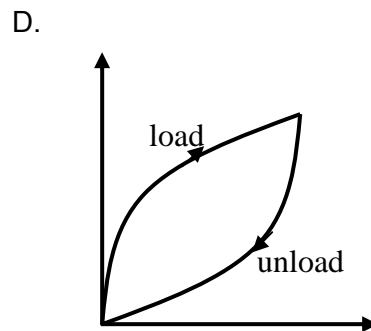
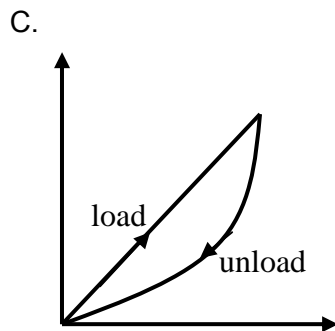
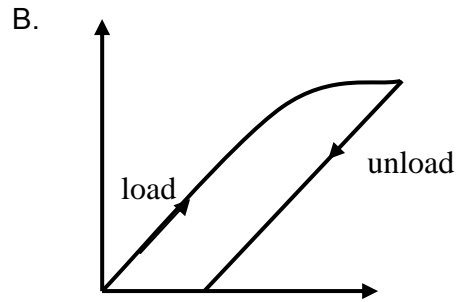
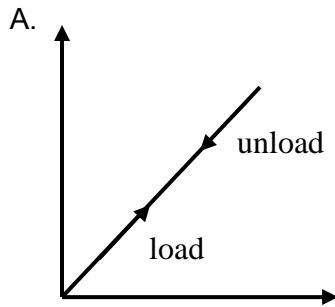
Which of the following best describes when a material is **brittle**?

- A. Fractures.
- B. Deforms plastically before fracture.
- C. Suffers elastic deformation.
- D. Little or no plastic deformation before fracture.

2 marks

**QUESTION 12**

Which of the following stress-strain graphs demonstrates the absorption of energy during loading within the elastic range?



2 marks

**QUESTION 13**

Composite materials are often used in building because

- A. There are improvements in strength and toughness.
- B. They are easier to produce.
- C. They are easier to use.
- D. They are more elastic.

2 marks

**End of Structures and Materials Section**