

The Mathematical Association of Victoria

Trial Exam 2024

# MATHEMATICAL METHODS

## WRITTEN EXAMINATION 1

STUDENT NAME \_\_\_\_\_

Reading time: 15 minutes

Writing time: 1 hour

### QUESTION AND ANSWER BOOK

#### Structure of book

<i>Number of questions</i>	<i>Number of questions to be answered</i>	<i>Number of marks</i>
9	9	40

- Students are permitted to bring into the examination room: pens, pencils, highlighters, erasers, sharpeners and rulers.
- Students are NOT permitted to bring into the examination room: any technology (calculators or software) or notes of any kind, blank sheets of paper and/or correction fluid/tape.

#### Materials supplied

- Question and answer book of 11 pages
- Formula sheet
- Working space is provided throughout the book.

#### Instructions

- Write your **name** in the space provided above on this page.
- Unless otherwise indicated, the diagrams in this book are **not** drawn to scale.
- All written responses must be in English.

**Students are NOT permitted to bring mobile phones and/or any other unauthorised electronic devices into the examination room.**

**THIS PAGE IS BLANK**

**Instructions**

Answer **all** questions in the spaces provided.

In all questions where a numerical answer is required, an exact value must be given, unless otherwise specified.

In questions where more than one mark is available, appropriate working **must** be shown.

Unless otherwise indicated, the diagrams in this book are **not** drawn to scale.

**Question 1** (3 marks)

a. Let  $y = \frac{\log_e(x)}{x^2}$ , where  $x > 0$ .

Find and simplify  $\frac{dy}{dx}$ .

1 mark

---

---

---

---

b. If  $g(x) = x \tan^2(x)$ , find  $g'\left(\frac{\pi}{4}\right)$ .

2 marks

---

---

---

---

---

---

---

---

---

---

**TURN OVER**

**Question 2** (3 marks)

Solve  $\log_e(3x^2 - 1) - \log_e(1 - 3x) = \log_e(2)$  for  $x$ .

---

---

---

---

---

---

---

---

---

---

**Question 3** (3 marks)

Consider the following simultaneous equations

$$-2x + ky = m$$

$$(1 + k^2)x + y = 2 \quad \text{where } k \text{ and } m \text{ are real constants.}$$

Determine the values of  $k$  and  $m$  for which there are no solutions.

---

---

---

---

---

---

---

---

---

---

**Question 4** (3 marks)Solve  $2\sin^2(x) + \sin(x) = 1$  for  $x \in [-\pi, \pi]$ .

---



---



---



---



---



---



---



---



---



---

**Question 5** (3 marks)Let  $f: R \setminus \{2\} \rightarrow R$ ,  $f(x) = \frac{1}{(2-x)^2}$  and  $g: [-2, k) \rightarrow R$ ,  $g(x) = 2x + 1$ , where  $k$  is a real constant.

- a. If  $k = 1$ , explain why  $f \circ g$  does not exist? 1 mark

---



---



---



---

- b. State the maximum possible value of  $k$  such that  $f \circ g$  exists. 1 mark

---



---

- c. Define  $f \circ g$  for the value of  $k$  in **part b**. 1 mark

---



---

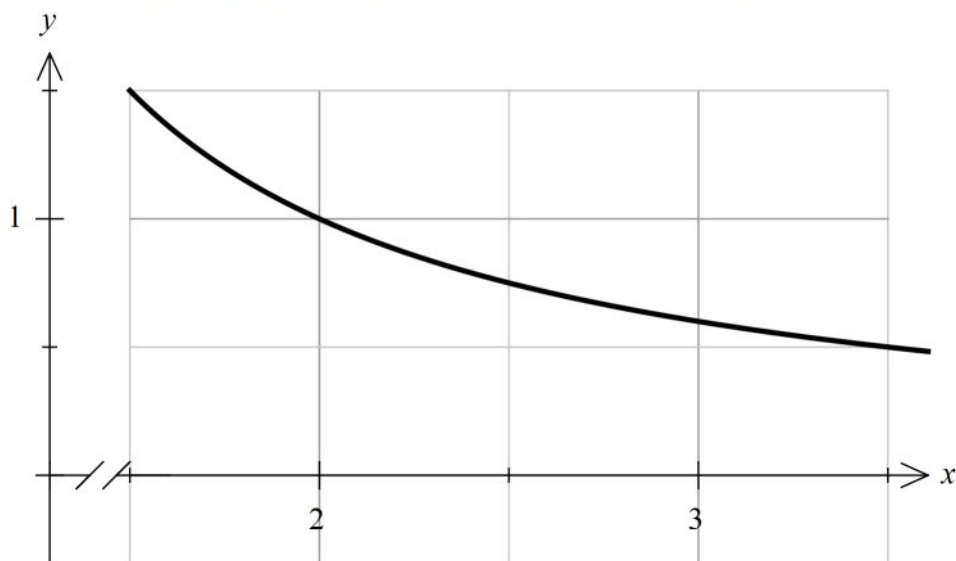


---

**TURN OVER**

**Question 6** (5 marks)

Part of the graph of  $y = \frac{3}{2x-1}$  is shown below.



- a. Evaluate  $\int_2^3 \frac{3}{2x-1} dx$ , giving your answer in the form  $a \log_e(b)$  where  $a, b \in Q$ . 2 marks

---



---



---



---



---

- b. Using two trapeziums of equal width, find the approximate area between the curve, the  $x$ -axis and the lines  $x=2$  and  $x=3$ . 2 marks

---



---



---



---



---

- c. Will the area in **part b.** be an over or under estimate of the actual area? Explain. 1 mark

---



---

**Question 7** (4 marks)

Consider the  $x$ -intercept of the function  $f(x) = e^{2x+1} - 2$ .

- a.** Find  $x_1$  using Newtons method with an initial estimate of  $x_0 = 0$ . 1 mark

---



---



---



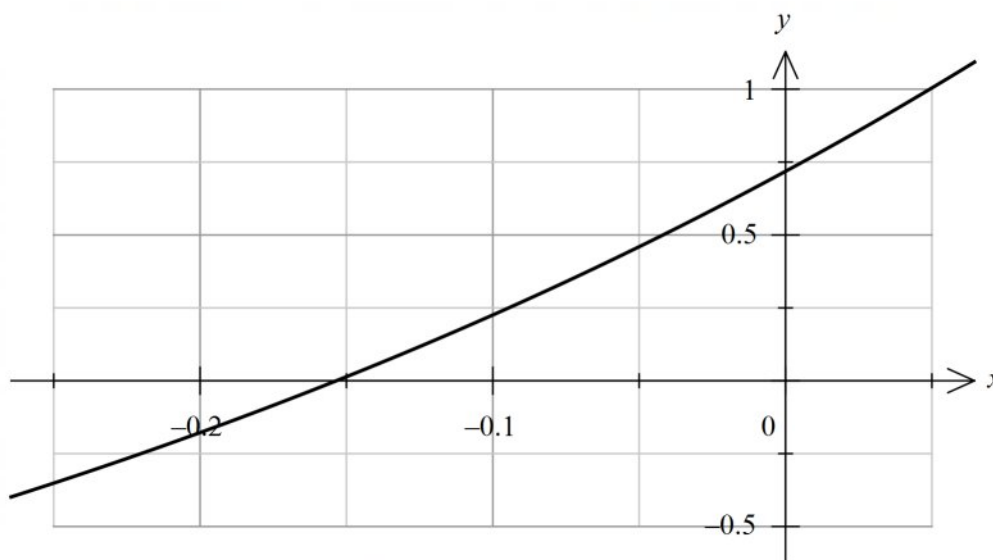
---



---

Part of the graph of  $f$  is shown below.

- b.** Sketch the tangent line to the curve at  $x = 0$  and label  $x_1$ . 1 mark



- c.** What is the distance between  $x_1$  and the exact value of the  $x$ -intercept?  
Express your answer in the form  $a + \log_e(b)$  where  $a, b \in R$ . 2 marks

---



---



---



---



---

**TURN OVER**

**Question 8** (8 marks)

Consider the function  $f$  with rule  $f(x) = 1 + \sqrt{2x - 3}$  over its maximal domain.

- a. Give the coordinates of the point where  $f'(x) = 1$ . 1 mark

---



---



---



---

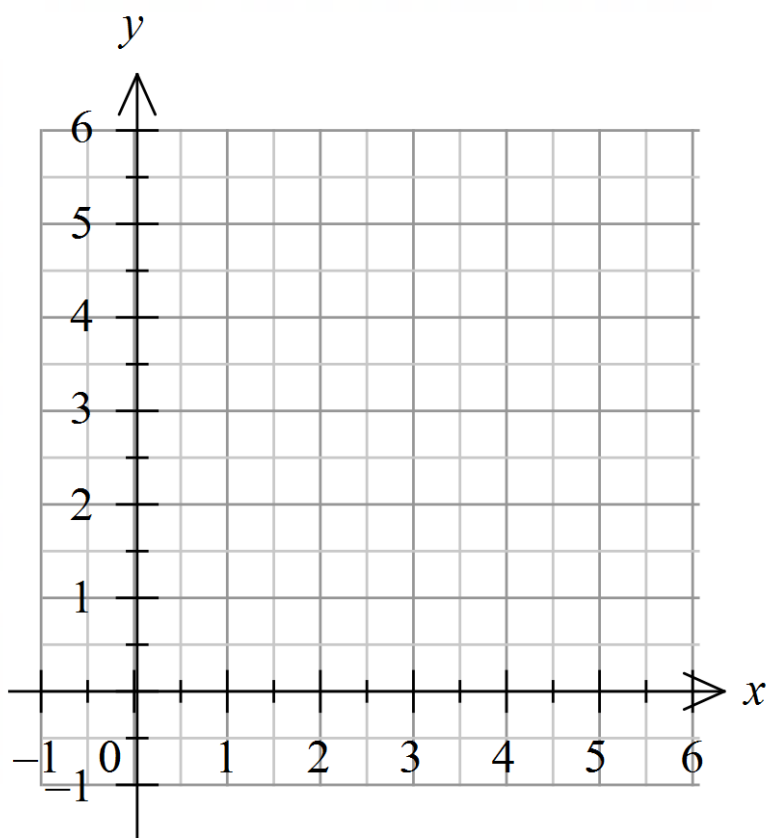


---



---

- b. Sketch the graphs of  $y = f(x)$  and  $y = f^{-1}(x)$  on the set of axes below. Label the endpoints and point of intersection with their coordinates. 3 marks



**Question 8** - continued



Now consider the family of curves, over their maximal domains, with rule  $g(x) = 1 + \sqrt{2x - a}$ , where  $a$  is a real constant.

c. Find the values of  $a$  for which the graphs of  $g$  and  $g^{-1}$  have two points of intersection. 1 mark

---

---

---

---

---

---

---

---

---

---

d. Find the area bound by the graphs of  $g$  and  $g^{-1}$  when  $a = 2$ . 3 marks

---

---

---

---

---

---

---

---

---

---

---

---

---

---

---

---

---

---

---

---

---

---

---

**TURN OVER**

**Question 9** (8 marks)

The probability Lisa hits a bullseye in a game of darts at the end of a workday is 0.02. The probability she hits a bullseye on a non workday is 0.3. Lisa is a school teacher and works everyday from Monday to Friday but not on the weekends. Each throw is independent of each other.

- a. What is the probability Lisa hits three bullseyes in a row on a Wednesday night? 1 mark

---



---

- b. What is the probability she hits exactly three bullseyes out of four throws on a Saturday? 2 marks

---



---



---



---

- c. Lisa has five throws on a Friday night. Given that she throws three bullseyes on her first three throws, what is the probability she throws exactly four bullseyes? 1 mark

---



---

Let  $n_t$  represent the number of throws on a particular Thursday evening and  $n_s$  represent the number of throws on a Saturday evening.

- d. If the mean number of bullseyes Lisa scored on the Thursday evening was the same as the mean number she scored on a Saturday evening, find  $n_t$  in terms of  $n_s$ , giving a general solution. Assume she had at least one throw on each evening. 1 mark

---



---



---

**Question 9** - continued

The time Lisa spends practising her dart throwing each day is a random variable,  $T$  hours, with probability density function,  $d$  given by

$$d(t) = \begin{cases} t-1 & 1 \leq t \leq 2 \\ a(t-3)^2 + b & 2 < t \leq 3 \\ 0 & \text{elsewhere} \end{cases} \text{ where } a \text{ and } b \text{ are real constants.}$$

e. Find  $a$  and  $b$  if the graph of  $d$  is continuous for  $-\infty < t \leq 3$ .

3 marks

---

---

---

---

---

---

---

---

---

---

---

---

---

---

---

---

---

---

---

---

---

---

---

---

**END OF QUESTION AND ANSWER BOOK**