

## VCE Mathematical Methods Units 1&2

### Written Examination 2

### Suggested Solutions

#### SECTION A – MULTIPLE-CHOICE QUESTIONS

1	A	B	C	D	E
2	A	B	C	D	E
3	A	B	C	D	E
4	A	B	C	D	E
5	A	B	C	D	E
6	A	B	C	D	E
7	A	B	C	D	E
8	A	B	C	D	E
9	A	B	C	D	E
10	A	B	C	D	E

11	A	B	C	D	E
12	A	B	C	D	E
13	A	B	C	D	E
14	A	B	C	D	E
15	A	B	C	D	E
16	A	B	C	D	E
17	A	B	C	D	E
18	A	B	C	D	E
19	A	B	C	D	E
20	A	B	C	D	E

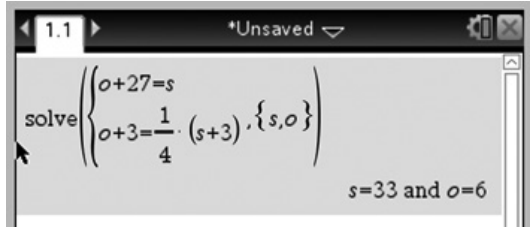
**Question 1 D**

Let  $S$  = Sam's age and  $O$  = Oma's age.

equation 1:  $O + 27 = S$

equation 2:  $O + 3 = \frac{1}{4}(S + 3)$

Solving the simultaneous equations using a graphics calculator gives:



Oma is 6 years old and Sam is 33 years old.

**Question 2 A**

equation 1:  $y = 4x - 3$

Rearranging equation 2 gives:

$$y - ax + 2x + b - 1 = 0$$

$$y = ax - 2x - b + 1$$

$$y = (a - 2)x - b + 1$$

For an infinite number of solutions to exist, the lines must lie on top of each other. Therefore, as the equations use the form  $y = mx + c$ , the gradient and  $c$ -value must be the same.

$$a - 2 = 4 \text{ and } -b + 1 = -3$$

$$a = 6 \text{ and } b = 4$$

**Question 3 B**

**B** is correct. The general form of a rectangular hyperbola is  $y = \frac{p}{x - m} + n$ , where  $\frac{1}{p}$  is a dilation from the  $x$ -axis,  $m$  is a translation in the positive direction of the  $x$ -axis and  $n$  is a translation in the positive direction of the  $y$ -axis. The asymptotes are located at  $x = m$  and  $y = n$ .

From the graph, the asymptotes are located at  $x = b$  and  $y = -c$ . Therefore, the equation is  $y = \frac{p}{x - b} - c$ .

**A** and **D** are incorrect. These equations represent graphs that have horizontal asymptotes at  $y = c$ .

**C** is incorrect. This equation represents a graph with a vertical asymptote at  $x = -b$ .

**E** is incorrect. The equation represents a graph with a horizontal asymptote at  $y = -a$ .

**Question 4 D**

**D** is correct. There is a reflection in the  $x$ -axis, a translation of 2 units in the negative direction of the  $x$ -axis, and a translation of 3 units in the positive direction of the  $y$ -axis.

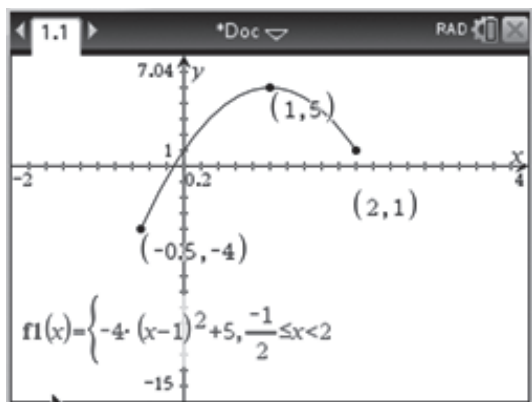
**A** and **B** are incorrect. There are no dilations from  $f(x)$  to  $h(x)$ .

**C** is incorrect.  $h(x)$  is reflected in the  $x$ -axis, not the  $y$ -axis.

**E** is incorrect.  $h(x)$  is translated 2 units in the negative, not positive,  $x$ -axis direction.

**Question 5 D****Method 1:**

Entering  $y = -4(x - 1)^2 + 5$  with the domain restriction into a graphics calculator gives:



From the graph, the starting point is at  $\left(-\frac{1}{2}, -4\right)$  and this point is included (solid circle). The end point is at  $(2, 1)$  and this point is not included (open circle) as the domain is  $\left[-\frac{1}{2}, 2\right)$ .

*Note: The calculator will show both end points as solid circles.*

**Method 2:**

**D** is correct.  $y = -4(x - 1)^2 + 5$  has a turning point at  $(1, 5)$  and an endpoint of  $(2, 1)$ . This should be an open circle, as the domain of the graph does not include this point.

**A** and **B** are incorrect. These graphs have solid circles at the endpoint  $(2, 1)$ .

**C** and **E** are incorrect. These graphs have the turning point at  $(-1, 5)$ , which is not possible as the turning point would be further left than the known starting point at  $\left(-\frac{1}{2}, -4\right)$ .

**Question 6 C**

Using the identity  $\sin^2(x) + \cos^2(x) = 1$ :

$$(0.02)^2 + \cos^2(a) = 1$$

$$\cos^2(a) = 1 - (0.02)^2$$

$$\cos(a) = \pm\sqrt{1 - (0.02)^2}$$

As  $\sin(a)$  is positive in quadrants 1 and 2,  $\cos(a)$  can be either positive (quadrant 1) or negative (quadrant 2).

**Question 7 B**

Let  $y = f(x)$ .

Swapping the  $x$  and  $y$  components gives:

$$x = 2 \times 3^{-y}$$

Rearranging the equation in terms of  $y$  gives:

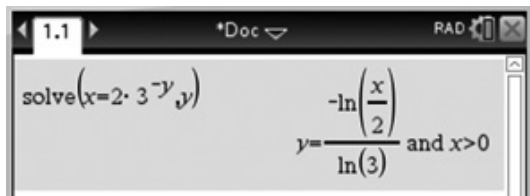
$$x = 2 \times 3^{-y}$$

$$\frac{x}{2} = 3^{-y}$$

$$\log_3\left(\frac{x}{2}\right) = -y$$

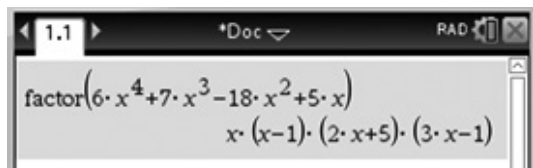
$$y = -\log_3\left(\frac{x}{2}\right)$$

*Note: Solving for  $y$  using a graphics calculator will not provide a response that matches any of the options. Hence, the question should be solved manually.*



**Question 8 E****Method 1:**

Factorising  $P(x)$  using a graphics calculator gives:



Hence, the rational solutions are  $x = 0, 1, -\frac{5}{2}, \frac{1}{3}$ . Therefore,  $x = \frac{5}{2}$  is not a rational solution of  $P(x)$ .

**Method 2:**

To find the rational solutions of  $P(x)$ , find the factors of  $P(x)$ .

Since  $P(x) = x(6x^3 + 7x^2 - 18x + 5)$ , one solution is  $x = 0$ .

To find the other solutions, find the factors of  $Q(x) = 6x^3 + 7x^2 - 18x + 5$ .

Substituting  $x = 1$  gives:

$$\begin{aligned} Q(1) &= 6(1)^3 + 7(1)^2 - 18(1) + 5 \\ &= 6 + 7 - 18 + 5 \\ &= 0 \end{aligned}$$

Hence,  $x = 1$  is a solution.

Substituting  $x = \frac{5}{2}$  gives:

$$\begin{aligned} Q\left(\frac{5}{2}\right) &= 6\left(\frac{5}{2}\right)^3 + 7\left(\frac{5}{2}\right)^2 - 18\left(\frac{5}{2}\right) + 5 \\ &\neq 0 \end{aligned}$$

Hence,  $x = \frac{5}{2}$  is not a factor of  $Q(x)$  or  $P(x)$ . Therefore,  $x = \frac{5}{2}$  is not a rational solution of  $P(x)$ .

**Question 9 E****Method 1:**

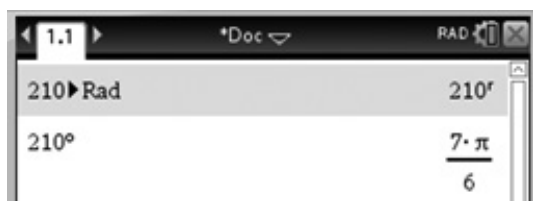
$$360x = 2\pi \times 210$$

$$x = \frac{2\pi \times 210}{360}$$

$$x = \frac{7\pi}{6}$$

**Method 2:**

Using a graphics calculator:



**Question 10 C**

Given  $\int_6^{12} f(x) \cdot dx = 3$ ,  $\int_3^6 f(2x) \cdot dx$  has been dilated by a factor of  $\frac{1}{2}$  from the y-axis. Hence,

$$\int_3^6 f(2x) \cdot dx = \frac{3}{2}.$$

**Question 11 A**

$\Pr(A \cup B)$  = union of events  $A$  and  $B$   
 $= \{1, 2, 3, 4, 5, 6, 7, 8, 9, 10\}$

**Question 12 D**

${}^7C_5$  is not equivalent to  $\frac{7!}{5!}$ . All the other options give the correct number of combinations.

**Question 13 E****Method 1:**

The total number of combinations of 8 people from 13 people is  ${}^{13}C_8 = \frac{13!}{8! \times 5!} = 1287$ .

From 5 men, 3 are chosen:  ${}^5C_3 = \frac{5!}{3! \times 2!} = 10$

From 8 women, 5 are chosen:  ${}^8C_5 = \frac{8!}{5! \times 3!} = 56$

Therefore,  $\Pr(3 \text{ men and } 5 \text{ women chosen}) = \frac{10 \times 56}{1287} = \frac{560}{1287}$ .

**Method 2:**

Using the graphics calculator:

The total number of combinations of 8 people from the 13 people is  ${}^{13}C_8$ .

From 5 men, 3 are chosen:  ${}^5C_3$

From 8 women, 5 are chosen:  ${}^8C_5$



$\frac{nCr(5,3) \cdot nCr(8,5)}{nCr(13,8)}$	$\frac{560}{1287}$
---	--------------------

Therefore,  $\Pr(3 \text{ men and } 5 \text{ women chosen}) = \frac{560}{1287}$ .

**Question 14 D****Method 1:**

$$\frac{a^{\frac{3}{4}} \times a^{-\frac{1}{5}}}{a^{-\frac{1}{4}} \times a^{\frac{2}{5}}} = a^{\frac{3}{4} - \frac{1}{5} + \frac{1}{4} - \frac{2}{5}}$$

$$= a^{1 - \frac{3}{5}}$$

$$= a^{\frac{2}{5}}$$

**Method 2:**

Entering the expression into a graphics calculator:

**Question 15 C**

The period of the graph  $y = a \tan(bx)$  is given by  $P = \frac{\pi}{n}$  where  $n = b$ .

Hence the period is  $\frac{\pi}{b}$ .

**Question 16 B****Method 1:**

$$\frac{\log_a(32)}{\log_a(4)} = \frac{\log_a(2)^5}{\log_a(2)^2}$$

$$= \frac{5 \log_a(2)}{2 \log_a(2)}$$

$$= \frac{5}{2}$$

**Method 2:**

Entering the expression into a graphics calculator:



**Question 17 A****Method 1:**

For the average rate of change, find the gradient between the points where  $x = 0$  and  $x = \frac{1}{2}$ .

$$\begin{aligned} f(0) &= 3 \times 0^3 - 4 \times 0^2 - 0 + 2 \\ &= 2 \end{aligned}$$

Hence, the coordinates are  $(0, 2)$ .

$$\begin{aligned} f\left(\frac{1}{2}\right) &= 3 \times \left(\frac{1}{2}\right)^3 - 4 \times \left(\frac{1}{2}\right)^2 - \frac{1}{2} + 2 \\ &= \frac{3}{8} - 1 + \frac{3}{2} \\ &= \frac{7}{8} \end{aligned}$$

Hence, the coordinates are  $\left(\frac{1}{2}, \frac{7}{8}\right)$ .

The average rate of change is:

$$\begin{aligned} \frac{f\left(\frac{1}{2}\right) - f(0)}{\frac{1}{2} - 0} &= \frac{\frac{7}{8} - 2}{\frac{1}{2} - 0} \\ &= \frac{-\frac{9}{8}}{\frac{1}{2}} \\ &= -\frac{9}{4} \end{aligned}$$

The instantaneous rate of change is given by finding the gradient function of the curve, then finding the gradient when  $x = \frac{1}{2}$ .

$$f(x) = 3x^3 - 4x^2 - x + 2$$

$$f'(x) = 9x^2 - 8x - 1$$

$$\begin{aligned} f'\left(\frac{1}{2}\right) &= 9\left(\frac{1}{2}\right)^2 - 8\left(\frac{1}{2}\right) - 1 \\ &= \frac{9}{4} - 4 - 1 \\ &= -\frac{11}{4} \end{aligned}$$



**Method 2:**

Using a graphics calculator:

Define $f(x) = 3 \cdot x^3 - 4 \cdot x^2 - x + 2$ Done	
$f(0)$	2
$f\left(\frac{1}{2}\right)$	$\frac{7}{8}$

Find the gradient for the two points:

$$\begin{aligned} \frac{f\left(\frac{1}{2}\right) - f(0)}{\frac{1}{2} - 0} &= \frac{\frac{7}{8} - 2}{\frac{1}{2} - 0} \\ &= \frac{-\frac{9}{8}}{\frac{1}{2}} \\ &= -\frac{9}{4} \end{aligned}$$

The instantaneous rate of change is given by finding  $f'\left(\frac{1}{2}\right)$  using a graphics calculator:

Define $f(x) = 3 \cdot x^3 - 4 \cdot x^2 - x + 2$ Done	
$\frac{d}{dx}(f(x)) _{x=\frac{1}{2}}$	$-\frac{11}{4}$

**Question 18 B**

Let the original amount of uranium ( $U_0$ ) be 100%.

Therefore, when half of the material has decayed,  $U = 50\%$ .

$$t = 4.5 \text{ billion years} = 4.5 \times 10^9$$

Thus, the equation is  $50\% = 100\% \times 2^{-k \times 4.5 \times 10^9}$  years.

**Method 1:**

$$0.5 = 1 \times 2^{-k \times 4.5 \times 10^9}$$

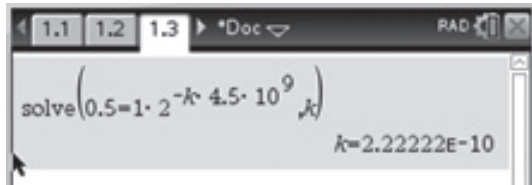
$$\log_2(0.5) = -k \times 4.5 \times 10^9$$

$$k = -\frac{\log_2(0.5)}{4.5 \times 10^9}$$

$$= 2.22 \times 10^{-10}$$

**Method 2:**

For the equation  $0.5 = 1 \times 2^{-k \times 4.5 \times 10^9}$ , solve for  $k$  using the graphics calculator:



Hence,  $k = 2.22 \times 10^{-10}$ .

**Question 19 D**

**Method 1:**

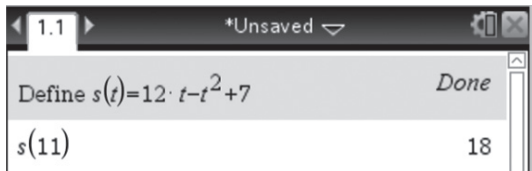
For  $s(t) = 12t - t^2 + 7$ , find  $s(11)$ .

$$s(11) = 12 \times 11 - 11^2 + 7$$

$$= 18$$

**Method 2:**

Using a graphics calculator, define the function and then find  $s(11)$ .

**Question 20 C**

$\{x: h'(x) < 0\}$  is the set where the gradient is negative. From the graph, this occurs for  $x \in (-\infty, -4)$ .

**SECTION B****Question 1** (15 marks)

- a. For the midpoint of two points:

$$\begin{aligned} \left( \frac{x_1 + x_2}{2}, \frac{y_1 + y_2}{2} \right) &= \left( \frac{3 - 2}{2}, \frac{5 - 5}{2} \right) \\ &= \left( -\frac{1}{4}, \frac{5}{4} \right) \end{aligned}$$

A1

Using a graphics calculator:




- b. The distance between two points is given by the equation:

$$\begin{aligned} d &= \sqrt{(x_2 - x_1)^2 + (y_2 - y_1)^2} \\ &= \sqrt{\left(-2 - \frac{3}{2}\right)^2 + \left(-\frac{5}{2} - 5\right)^2} \\ &= \sqrt{\left(-\frac{7}{2}\right)^2 + \left(-\frac{15}{2}\right)^2} \\ &= \sqrt{\frac{274}{4}} \\ &= \frac{\sqrt{274}}{2} \end{aligned}$$

M1

A1

Using a graphics calculator:

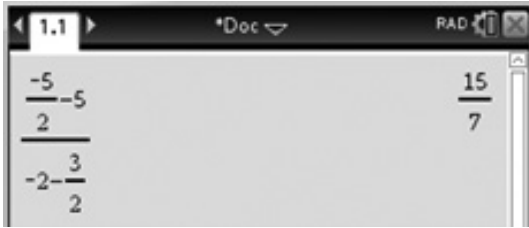


- c. The gradient of the line segment that passes through these two points is given by:

$$\begin{aligned} m &= \frac{y_2 - y_1}{x_2 - x_1} \\ &= \frac{-5 - 5}{-2 - \frac{3}{2}} \\ &= \frac{15}{7} \end{aligned}$$

M1

Using a graphics calculator:



Using the equation  $y - y_1 = m(x - x_1)$ , substitute one point into the equation.

$$y - y_1 = m(x - x_1)$$

$$y - 5 = \frac{15}{7} \left( x - \frac{3}{2} \right)$$

M1

$$y = \frac{15}{7}x - \frac{45}{14} + 5$$

$$y = \frac{15}{7}x + \frac{25}{14}$$

M1

$$= f(x)$$

- d. The gradient of  $f(x)$  is  $\frac{15}{7}$ .

$$m = \tan(\theta)$$

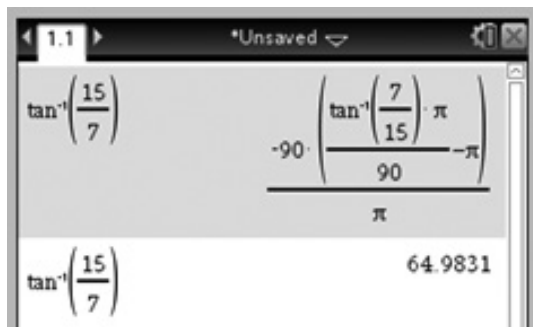
$$\frac{15}{7} = \tan(\theta)$$

$$\theta = \tan^{-1}\left(\frac{15}{7}\right)$$

$$= 65^\circ$$

A1

Using a graphics calculator:



- e. A translation of  $\frac{25}{14}$  in the negative direction of the  $y$ -axis moves the graph of  $f(x)$  down, so the image is  $f(x) = \frac{15}{7}x$ . A dilation of factor  $\frac{1}{7}$  from the  $x$ -axis takes the graph to the image  $g(x) = 15x$ .

A1

- f. i. Substituting  $f(x)$  and  $g(x)$  into  $h(x)$  gives:

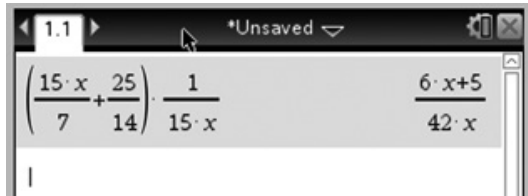
$$h(x) = f(x) \times \frac{1}{g(x)} \quad \text{M1}$$

$$= \left( \frac{15}{7}x + \frac{25}{14} \right) \times \frac{1}{(15x)}$$

$$= \frac{5}{42x} + \frac{1}{7}$$

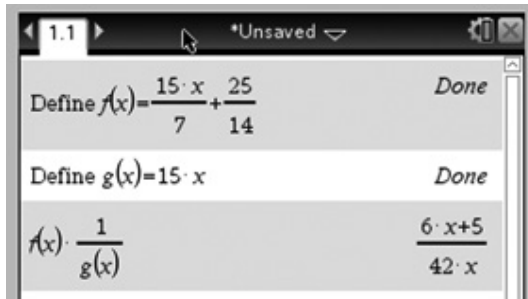
M1

Using a graphics calculator:



*Note: Accept answer in either form.*

Alternatively, use the graphics calculator to define  $f(x)$  and  $g(x)$ .



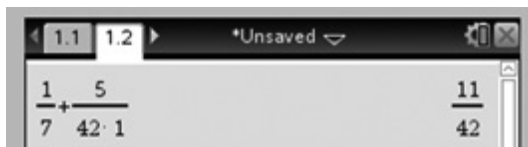
ii. 
$$h(1) = \frac{1}{7} + \frac{5}{42 \times 1}$$

$$= \frac{11}{42}$$

$$= 0.262$$

A1

Using a graphics calculator:



iii.  $h(x) = 0$

$$\frac{1}{7} + \frac{5}{42x} = 0$$

$$42x = -35$$

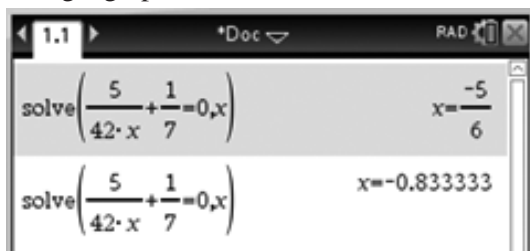
$$x = -\frac{35}{42}$$

$$= -\frac{5}{6}$$

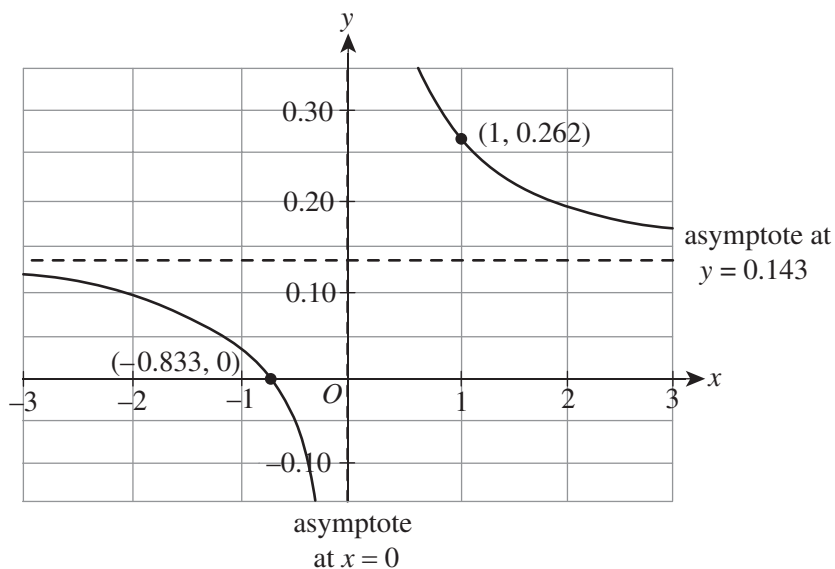
$$= -0.833$$

A1

Using a graphics calculator, solve for  $x$ .



iv.



*asymptotes labelled A1*

*points from Question 1f.ii. and iii. labelled A1*

*Note: Consequential marks can be awarded for this component only.  
correct shape of the graph and position of the two points being relatively accurate A1*

*Note: Deduct a maximum of 1 mark if decimals are not given  
to three decimal places.*

**Question 2** (14 marks)

a. i.

	<b><i>C</i></b>	<b><i>C'</i></b>	
<b><i>L</i></b>	<b>0.05</b>	<b>0.43</b>	<b>0.48</b>
<b><i>L'</i></b>	<b>0.30</b>	<b>0.22</b>	<b>0.52</b>
	<b>0.35</b>	<b>0.65</b>	<b>1</b>

A1

A1

A1

ii.  $\Pr(C \cap L) = 0.05$  (or 5%)

A1

*Note: Consequential on answer to Question 2a.i.*

iii. 
$$\Pr(C | L') = \frac{\Pr(C \cap L')}{\Pr(L')}$$

$$= \frac{0.30}{0.52}$$

$$= \frac{15}{26}$$

M1

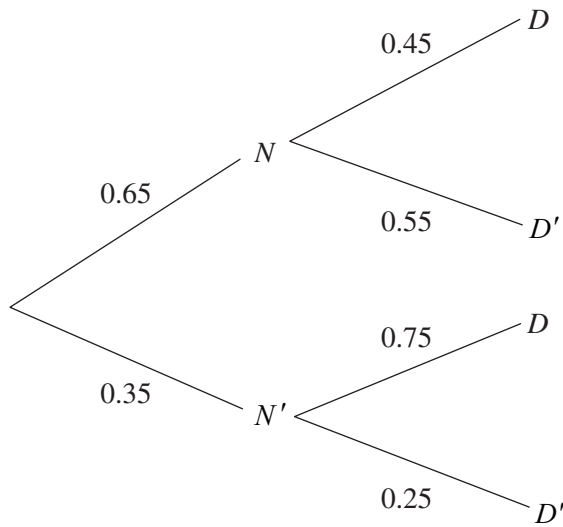
A1

*Note: Accept 0.58 or 58%. Consequential on answer to Question 2a.i.*

iv.  $22\% \text{ of } 267 = \frac{22}{100} \times 267$   
 $= 58.74$   
 $= 58 \text{ students}$

A1

b. i.



*correct first stem of the tree diagram* A1

*correct top half of the second stem of the tree diagram* A1

*correct lower half of the second stem of the tree diagram* A1

ii.  $\Pr(D) = \Pr(N \cap D) + \Pr(N' \cap D)$   
 $= 0.65 \times 0.45 + 0.35 \times 0.75$   
 $= 0.2925 + 0.2625$   
 $= 0.555$   
 $= 0.56$

M1

A1

*Note: Consequential on answer to Question 2b.i.*



$$\begin{aligned}
 \text{iii. } \Pr(N' | D) &= \frac{\Pr(N' \cap D)}{\Pr(D)} && \text{M1} \\
 &= \frac{0.35 \times 0.75}{0.65 \times 0.45 + 0.35 \times 0.75} \\
 &= \frac{0.2625}{0.555} \\
 &= 0.47 && \text{A1}
 \end{aligned}$$

Note: Consequential on answer to **Questions 2b.i. and 2b.ii.**

### Question 3 (17 marks)

#### a. Method 1:

Defining  $f(x)$  on a graphics calculator and finding  $f\left(\frac{1}{3}\right)$  and  $f(3)$ :

Define $f(x) = 6 \cdot x^3 - 19 \cdot x^2 + 10 \cdot x$	Done
$f\left(\frac{1}{3}\right)$	$\frac{13}{9}$
$f(3)$	21

Hence:

$$f\left(\frac{1}{3}\right) = \frac{13}{9} \quad \text{A1}$$

$$f(3) = 21 \quad \text{A1}$$

#### Method 2:

$$\begin{aligned}
 f\left(\frac{1}{3}\right) &= 6\left(\frac{1}{3}\right)^3 - 19\left(\frac{1}{3}\right)^2 + 10\left(\frac{1}{3}\right) \\
 &= \frac{6}{27} - \frac{19}{9} + \frac{10}{3} \\
 &= \frac{13}{9} && \text{A1}
 \end{aligned}$$

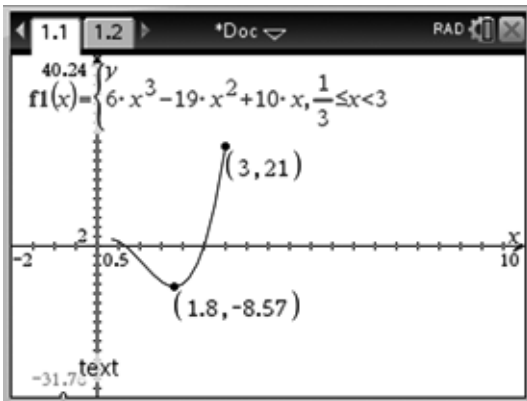
$$\begin{aligned}
 f(3) &= 6(3)^3 - 19(3)^2 + 10(3) \\
 &= 6 \times 27 - 19 \times 9 + 10 \times 3 \\
 &= 21 && \text{A1}
 \end{aligned}$$

#### b. The factors of $f(x)$ can be found using a graphics calculator.

factor( $6 \cdot x^3 - 19 \cdot x^2 + 10 \cdot x$ )
$x \cdot (2 \cdot x - 5) \cdot (3 \cdot x - 2)$

Hence, the factors are  $x$ ,  $2x - 5$  and  $3x - 2$ . A1

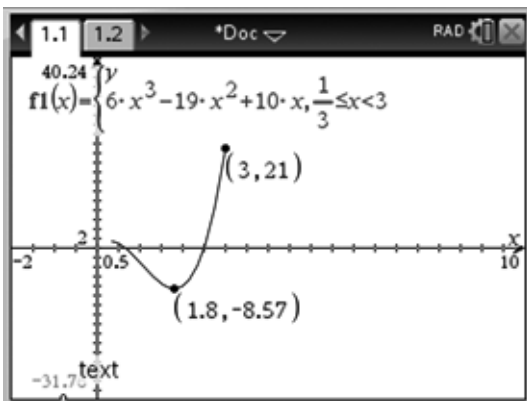
- c. The minimum value of  $f(x)$  can be found by sketching the graph on a graphics calculator, including the restricted domain and using the minimum functionality to find the minimum point.



Hence, the minimum value is  $-8.57$ .

A1

- d. The range of  $f(x)$  can be found by sketching the graph on a graphics calculator, including the restricted domain and using the maximum functionality to find the maximum point.

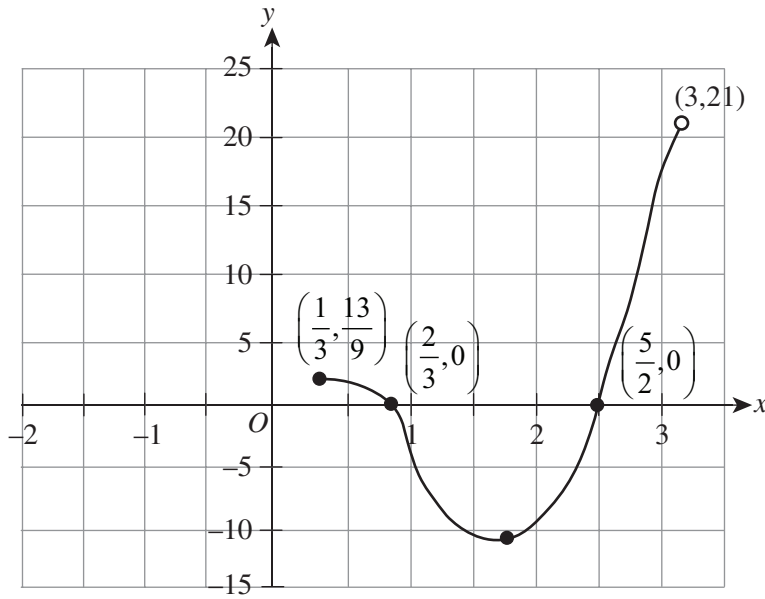


From the graph, the maximum point occurs at the coordinate  $(3, 21)$ . Using the answer from part c., the range is  $y \in [-8.57, 21)$ .

A1

*Note: Consequential on answer to Question 3c.*

e.



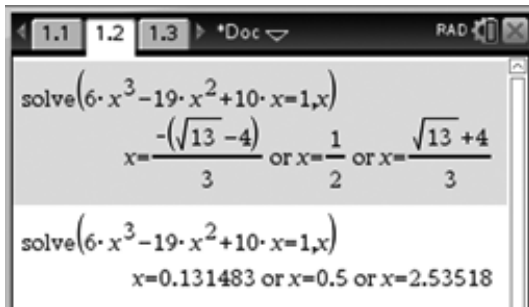
correct endpoints (labels and shading of points) A1

correct x-intercepts A1

correct shape of the graph A1

Note: The point at  $(1.8, -8.57)$  does not need to be labelled.

f. Solve  $f(x) = 1$  using a graphics calculator:



Hence,  $x = 0.13148, 0.5$  or  $2.53518$

A1

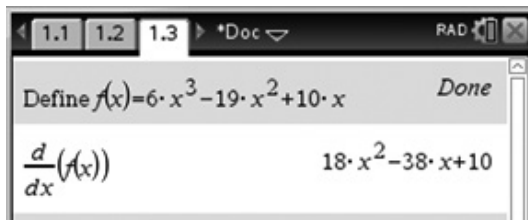
However,  $x = 0.13148$  is outside of the domain; therefore, it cannot be a solution.

M1

By examining the graph and using the solution  $x = 0.5$  or  $x = 2.535$ ,  $f(x) > 1$  for  $x \in [0.33, 0.50] \cup [2.54, 3.00)$ .

A1

g. i.



Hence,  $f'(x) = 18x^2 - 38x + 10$ .

A1

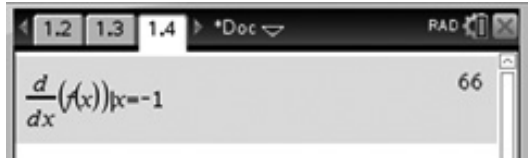
**ii. Method 1:**

$$\begin{aligned} f'(-1) &= 18(-1)^2 - 38(-1) + 10 \\ &= 18 + 38 + 10 \\ &= 66 \end{aligned}$$

A1

**Method 2:**

Using a graphics calculator gives:



$$f'(-1) = 66$$

A1

**iii.**  $f'(x) = 18x^2 - 38x + 10$   
 $f''(x) = 36x - 38$

A1

*Note: Consequential on answer to Question 3g.ii.***h.** Using a graphics calculator:

Hence,  $\int_{2.6}^{2.8} f(x) \cdot dx = 1.34.$

A1

**i.** Examining the components of the hybrid function  $h(x)$ :

The cubic function sketched in part e. has an endpoint at  $(3, 21)$  that is non-inclusive. For  $x \geq 3$ , the graph is half a parabola. It starts at and includes the turning point of  $(3, 21)$ . Hence, the hybrid function is continuous at  $x = 3$ .

A1

For  $-3 < x < \frac{1}{3}$ , the graph is a straight line that starts at  $(-3, -4)$  and goes through the point  $(0, -1)$  to the point  $(\frac{1}{3}, -\frac{2}{3})$  (non-inclusive). The cubic function sketched in part e. starts at the point  $(\frac{1}{3}, \frac{13}{9})$ . Hence, the hybrid function has only one discontinuity at  $x = \frac{1}{3}$ .

A1

**Question 4** (14 marks)

- a. i. Since the lowest position above the ground is at 0.5 m (50 cm) and the highest position is at 1.0 m (100 cm), the midpoint of the sine curve is at 75 cm. Hence,  $d = 75$ . A1

The amplitude will be 25 cm, since the maximum and minimum are 25 cm above and below the midpoint of the sine curve. Hence,  $a = 25$ . A1

The period is given as 8.4 seconds.

$$P = \frac{2\pi}{n}$$

$$8.4 = \frac{2\pi}{n}$$

$$n = \frac{2\pi}{8.4}$$

$$= \frac{5\pi}{21}$$

Hence,  $b = 5$  A1

and  $c = 21$ . A1

- ii. The domain is  $t \geq 0$ . A1

iii.  $h(t) = 25 \sin\left(\frac{5\pi t}{21}\right) + 75$  A1

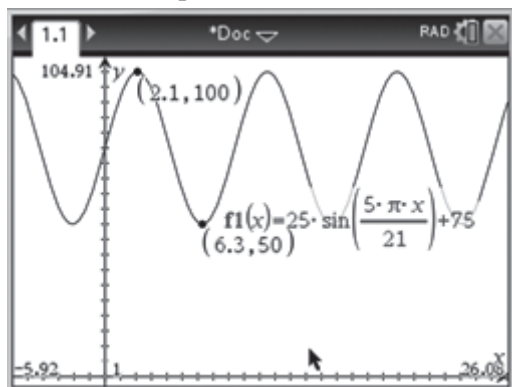
*Note: Consequential on answer to Question 4a.i.*

- b. When the handle is in the central position, the equation is  $h(t) = 75$ . A1

*Note: Accept  $y = 0.75$ .*

*Consequential on answer to Question 4a.i.*

- c. Using the maximum and minimum functionality of a graphics calculator, the first maximum and minimum points can be found.



The first maximum point is at (2.1, 100). A1

The first minimum point is at (6.3, 50). A1

*Note: Consequential on answer to Question 4a.i.*

- d.  $h(85) = 25 \sin\left(\frac{5\pi \times 85}{21}\right) + 75$   
 $= 92 \text{ cm}$  A1

*Note: Consequential marks can be awarded based on Question 4a.i.*

*Note: The calculator must be in radian mode, not degrees.*

*If the answer of 97 cm is obtained, no marks are awarded.*

e. 29.4 seconds is  $\frac{29.4}{8.4} = 3\frac{1}{2}$  complete cycles

M1

$$\begin{aligned} 3\frac{1}{2} \times 1\frac{3}{4} &= \frac{7}{2} \times \frac{7}{4} \\ &= \frac{49}{8} \\ &= 6\frac{1}{8} \\ &\approx 6 \text{ L} \end{aligned}$$

A1

- f. i. Since the ground level has decreased by 15 cm, this means that the function  $g(t)$  has moved up by 15 cm.

Hence, the equation of the transformed function is  $g(t) = 25 \sin\left(\frac{5\pi t}{21}\right) + 90$ .

A1

*Note: Consequential on answer to Question 4a.i.*

ii.  $40 + 15 = 55$  cm

A1