

**‘2017 Examination Package’ -  
Trial Examination 6 of 9**

STUDENT NUMBER

Figures

|  |  |  |  |  |  |  |  |
|--|--|--|--|--|--|--|--|
|  |  |  |  |  |  |  |  |
|  |  |  |  |  |  |  |  |

Words

Letter

|  |
|--|
|  |
|--|

# CHEMISTRY

## Units 3 & 4 - Written examination

(TSSM’s 2013 trial exam updated for the current study design)

Reading time: 15 minutes

Writing time: 2 hours and 30 minutes

### QUESTION AND ANSWER BOOK

#### Structure of book

| <i>Section</i> | <i>Number of questions</i> | <i>Number of questions to be answered</i> | <i>Number of marks</i> |
|----------------|----------------------------|---|------------------------|
| A              | 30                         | 30  | 30                     |
| B              | 11                         | 11  | 106                    |
|                |                            |   | Total 136              |

- Students are permitted to bring into the examination room: pens, pencils, highlighters, erasers, sharpeners and rulers
- Students are NOT permitted to bring into the examination room: blank sheets of paper and/or white out liquid/tape.
- No calculator is permitted in this examination.

#### Materials supplied

- Question and answer book of 27 pages.

#### Instructions

- Print your name in the space provided on the top of this page.
- All written responses must be in English.

**Students are NOT permitted to bring mobile phones and/or any other unauthorised electronic communication devices into the examination room.**

## SECTION A – Multiple-choice questions

## Instructions for Section A

Answer **all** questions.

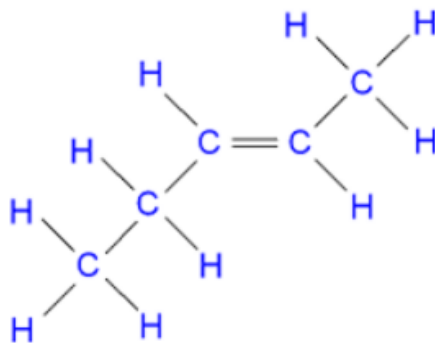
Choose the response that is **correct** or **best answers** the question.

A correct answer scores 1, an incorrect answer scores 0.

No mark will be given if more than one answer is completed for any question.

Marks will **not** be deducted for incorrect answers.

## Question 1

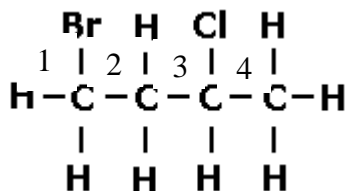


The correct name for the molecule shown above is:

- A. Cis-pent-2-ene
- B. Cis-prop-2-ene
- C. Trans-prop-2-ene
- D. Trans-pent-2-ene

## Question 2

Which of the numbered carbons in the following molecule is a chiral centre?



- A. 1
- B. 2
- C. 3
- D. 4

SECTION A - continued

**Question 3**

The by-product of a car that runs solely on a fuel cell using pure hydrogen are:

- A. Oxygen
- B. Carbon dioxide
- C. Methane
- D. Heat and water vapour

**Question 4**

Which of the following statements about rechargeable batteries is incorrect?

- A. Rechargeable batteries are also called secondary cells
- B. During recharge the polarities of the electrodes are the same as when the battery is discharging
- C. Rechargeable batteries can be used indefinitely
- D. During discharge cations in the electrolyte move toward the anode

**Question 5**

The correct order for the basic processes in a mass spectrometer is:

- A. Fragmentation, detection, ionization deflection
- B. Ionization, fragmentation, deflection, detection
- C. Detection, deflection, ionization, fragmentation
- D. Deflection, ionization, fragmentation, detection

**Question 6**

How many low resolution peaks does the acid  $(\text{CH}_3)_3\text{CCH}_2\text{COOH}$  have in  $^1\text{H}$  NMR and  $^{13}\text{C}$  NMR spectra?

|    | $^1\text{H}$ NMR | $^{13}\text{C}$ NMR |
|----|------------------|---------------------|
| A. | 5                | 6                   |
| B. | 3                | 4                   |
| C. | 5                | 4                   |
| D. | 3                | 6                   |

**SECTION A – continued**  
**TURN OVER**

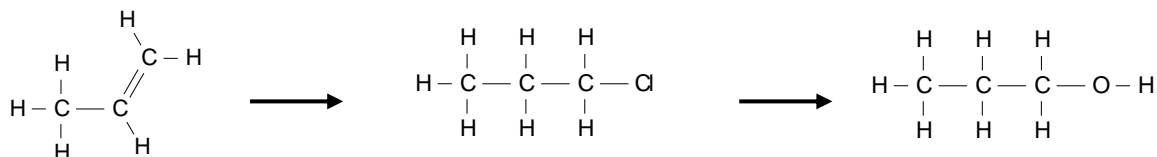
**Question 7**

When propene reacts with hydrochloric acid, there are two possible products. The products are

- A. 1-chloropropane and 1,2-dichloropropane
- B. polypropene and hydrogen gas
- C. 1-chloropropane and 2-chloropropane
- D. 1-chloropropene and 2-chloropropene

**Question 8**

The chemical pathway shown is for the manufacture of 1-propanol.

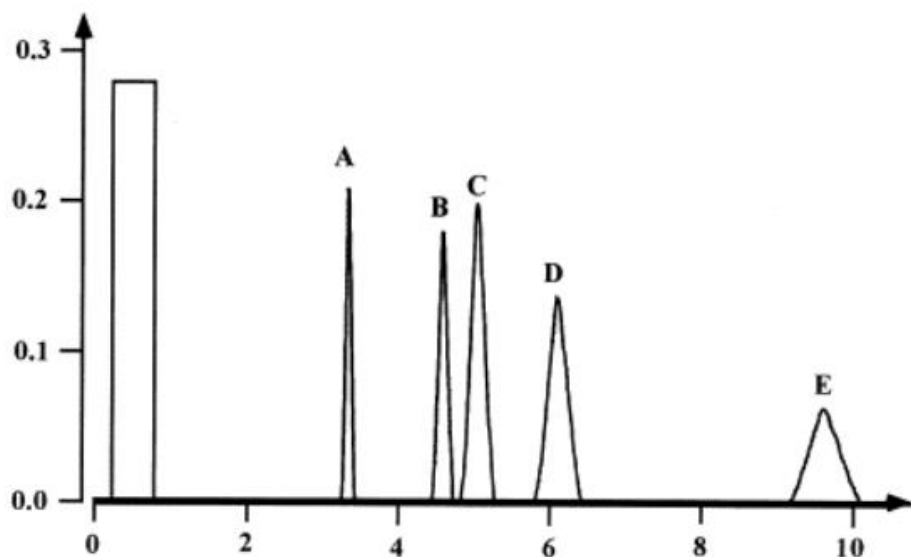


In this pathway,

- A. a substitution reaction is followed by an addition reaction
- B. an addition reaction is followed by a substitution reaction
- C. two addition reactions are performed and only one product is formed
- D. two substitution reactions are performed and three products will be formed

**SECTION A** – continued

## Question 9



The printout from a sample passing through a HPLC is shown above. (The rectangular peak is not part of the sample). The following possible conclusions refer to the chromatogram

- I there are at least 5 different substances in the sample
- II there are only 5 different substances in the sample
- III the concentration of substance E is lower than that of substance D
- IV substance E is heavier than substance D

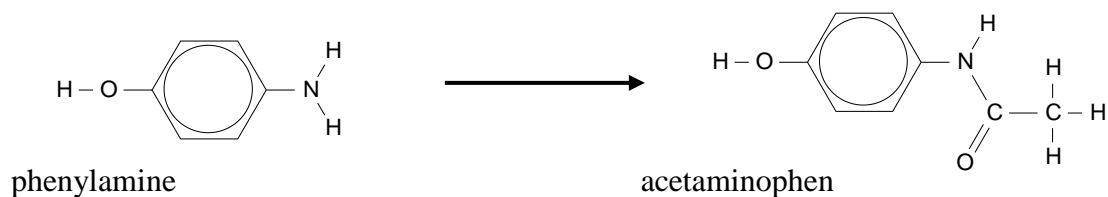
Which conclusions are valid?

- A. I only
- B. I and III only
- C. I, III and IV only
- D. I and IV only

**SECTION A – continued**  
**TURN OVER**

**Question 10**

The molecule shown is acetaminophen, used for pain relief.



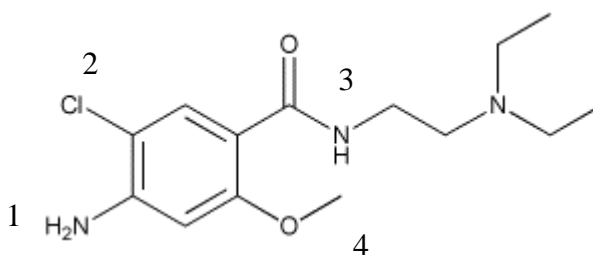
One of the reactants used to make acetaminophen is phenylamine.

Acetaminophen could be formed from the

- A. condensation reaction between phenylamine and ethanoic acid
- B. esterification reaction between phenylamine and ethanoic acid
- C. polymerisation reaction between phenylamine and ethanol
- D. substitution reaction between phenylamine and ethanol

**Question 11**

The molecule drawn below is known as metoclopramide. It is used to treat nausea and vomiting and is often used in conjunction with paracetamol.



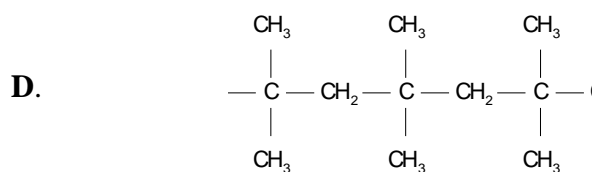
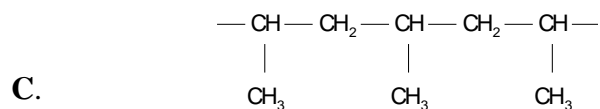
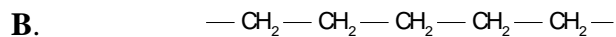
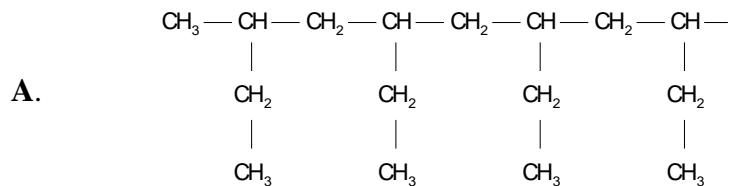
The four functional groups numbered on this molecule are, in order,

- A. amine, chloro, amide and carboxyl
- B. amine, chloro, amine and ester
- C. amide, chloro, amine and ether
- D. amine, chloro, amide and ether

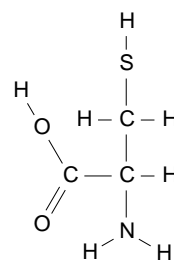
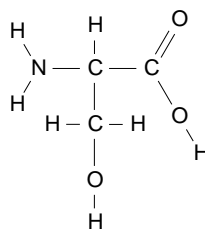
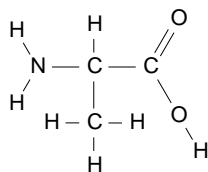
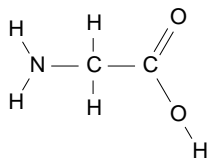
**SECTION A** – continued

**Question 12**

A segment of the polymer that can be formed from 1-butene is

**Question 13**

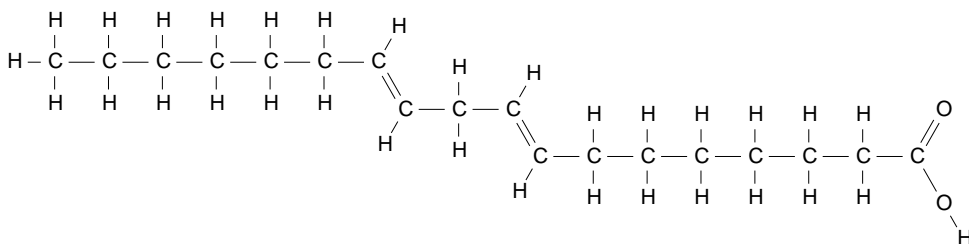
Four different amino acids are shown here



The most soluble amino acid in water is likely to be

- A. glycine
- B. alanine
- C. serine
- D. cysteine

**SECTION A – continued**  
**TURN OVER**

**Question 14**

The molecule shown here could be

- A. linoleic acid
- B. linolenic acid
- C. oleic acid
- D. stearic acid

**Question 15**

Which of the following statements about enzymes is correct?

- A. Enzymes can distinguish between optical isomers of a substrate
- B. All enantiomers of a substrate will be biologically active
- C. Intermolecular forces such as hydrogen bonds and dispersion forces are involved in binding the substrate to the enzyme active site.
- D. The shape of the active site can change by the binding of a substrate

**Question 16**

If during a reaction in an inflexible container, the pressure is found to decrease and the number of particles remains constant. Which of the following options is correct?

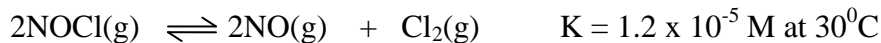
- A. The reaction is exothermic
- B. The reaction is endothermic
- C. The enthalpy of the products is less than the reactants
- D. The product particles have more kinetic energy than the reactants

**SECTION A** – continued



Use the following information to answer Questions 17 and 18

The decomposition of NOCl gas is a reversible, endothermic reaction.



**Question 17**

A high yield in this reaction is best favoured by

- A. low temperature and the addition of a catalyst
- B. high temperature and low pressure
- C. the addition of argon gas and the use of high pressure
- D. low temperature and high pressure

**Question 18**

NOCl is added to an empty reactor. At equilibrium, the mixture of these gases sits at  $30^\circ\text{C}$ . In this mixture, the


- A.  $[\text{NO}] = \frac{1}{2} [\text{Cl}_2]$
- B.  $[\text{NOCl}] < [\text{NO}]$
- C.  $[\text{NOCl}] > [\text{NO}]$
- D.  $[\text{NOCl}] = [\text{NO}]$

**Question 19**

Methanol can be produced from carbon monoxide and hydrogen gases. The equation is



What is the value of the equilibrium constant, at  $250^\circ\text{C}$ , for the reaction?

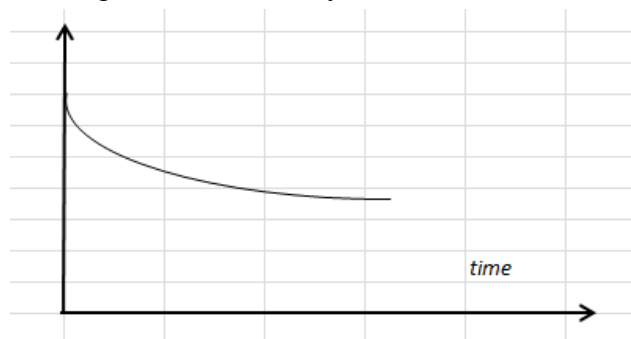


- A. -4.80
- B. 0.174
- C. 0.417
- D. 1.550

**SECTION A – continued**  
**TURN OVER**

**Question 20**

The following graph is drawn from data collected from the reaction of marble chips,  $\text{CaCO}_3$  reacting in a flask with hydrochloric acid.



The graph could be the

- A. mass of the gas evolved from the flask
- B. pH of the flask contents
- C. volume of the gas evolved from the flask
- D. mass of the flask over a period of time

**Question 21**

The following reaction has reached equilibrium:

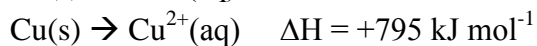


Which one of the following would cause precipitation of more copper?

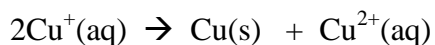
- A. Increasing the temperature of the reaction
- B. Taking out some of the solid copper
- C. Addition of more  $\text{Sn}^{2+}(\text{aq})$  ions
- D. Increasing the concentration of  $\text{Sn}^{4+}(\text{aq})$  ions

**Question 22**

Enthalpy changes for two reactions of copper are shown below;



Use these values to calculate the enthalpy change for the reaction



- A. + 193  $\text{kJ mol}^{-1}$
- B. - 193  $\text{kJ mol}^{-1}$
- C. - 409  $\text{kJ mol}^{-1}$
- D. + 409  $\text{kJ mol}^{-1}$

**SECTION A** - continued

**Question 23**

1.0 g of a hydrocarbon fuel produces 49.6 kJ of energy when combusted. The fuel is likely to be

- A. propane
- B. butane
- C. hexane
- D. octane

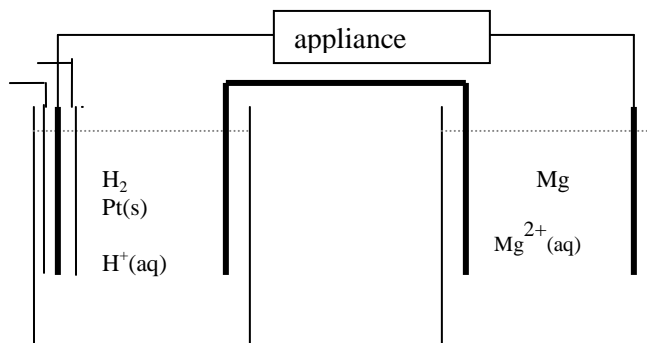
**Question 24**

The term 'carbon neutral' refers to fuel sources

- A. that do not use carbon dioxide
- B. that do not produce carbon dioxide
- C. that use a similar volume of carbon dioxide to the amount they produce
- D. that produce less carbon dioxide than the amount they produce

**Question 25**

A galvanic cell is constructed from a hydrogen half cell connected to a magnesium half cell.



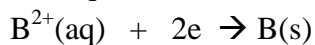
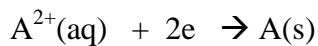
In this cell

|           | oxidant          | reductant        | anode | cathode |
|-----------|------------------|------------------|-------|---------|
| <b>A.</b> | $\text{Mg}^{2+}$ | $\text{H}^+$     | Pt    | Mg      |
| <b>B.</b> | Mg               | $\text{H}_2$     | Mg    | Pt      |
| <b>C.</b> | $\text{H}_2$     | $\text{Mg}^{2+}$ | Pt    | Mg      |
| <b>D.</b> | $\text{H}^+$     | Mg               | Mg    | Pt      |

**SECTION A – continued**  
**TURN OVER**

**Question 26**

The electrochemical series is used to help predict the outcome in redox reactions. When two particular half cells are connected, their half equations are found on this series.



If  $A^{2+}$  has the higher  $E^0$  value, it will be the

- A. oxidant and the positive electrode
- B. oxidant and the negative electrode
- C. reductant and the negative electrode
- D. reductant and the positive electrode

*Use the following information to answer Questions 27 and 28*

The term 'lithium cell' refers to a wide range of modern cells that use lithium as lithium metal or lithium ions. A typical example is the cell formed between lithium and aluminium alloy and manganese dioxide,  $MnO_2$ ,

The half equations for this cell are;

**Question 27**

The overall equation for this cell can be expressed as

- A.  $Li + MnO_2 \rightarrow Li^+ + MnO_2$
- B.  $2Li + MnO_2 \rightarrow LiMnO_2 + Li^+$
- C.  $Li + MnO_2 \rightarrow LiMnO_2$
- D.  $Li^+ + MnO_2 \rightarrow Li + MnO_2$

**Question 28**

In this cell, the

- A. oxidation number of manganese changes from  $+4$  to  $+3$  at the cathode
- B. lithium ions are converted to lithium metal at the cathode
- C. lithium ions are converted to lithium metal at the anode
- D. lithium is oxidised at one electrode and reduced at the other

**SECTION A** - continued

**Question 29**

When a 4 M aqueous solution of NaCl is subjected to electrolysis the products will be

- A. sodium metal and chlorine gas
- B. hydrogen gas, chlorine gas and sodium hydroxide solution
- C. hydrogen gas and oxygen gas
- D. hydrogen gas, oxygen gas and sodium chloride solution

**Question 30**

A current of 4 amps is passed through a molten metal solution for 400 minutes. The mass of metal obtained is 9.0 g. The metal is most likely to be

- A. lithium
- B. sodium
- C. aluminium
- D. lead

**END OF SECTION A  
TURN OVER**

**SECTION B**

**Instructions for Section B**

Questions must be answered in the spaces provided in this book.

To obtain full marks for your responses you should

- Give simplified answers with an appropriate number of significant figures to all numerical questions; unsimplified answers will not be given full marks.
- Show all workings in your answers to numerical questions. No credit will be given for an incorrect answer unless it is accompanied by details of the working.

Make sure chemical equations are balanced and that the formulas for individual substances include an indication of state; for example,  $\text{H}_2(\text{g})$ ;  $\text{NaCl}(\text{s})$

**Question 1** (7 marks)

- a. Alanine has two enantiomers.
- i. Draw the structures of the two enantiomers of alanine in the space provided below.

2 marks

- ii. Alanine is a chiral molecule. Explain what is meant by the term chiral molecule and how can you tell if a molecule will be chiral?

---

---

---

---

2 marks

- b. An enantiomer will rotate plane polarised light, why then does a mixture of alanine enantiomers have no effect on plane polarised light?

---

---

1 mark

**SECTION B – Question 1** - continued

c. Are all amino acids chiral? Explain?

---



---

2 marks

**Question 2** (12 marks)

A 2.000 g sample of an ester molecule is found to contain 1.091 g of carbon and 0.727 g of oxygen.

a. Determine the empirical formula of the molecule.

3 marks

---

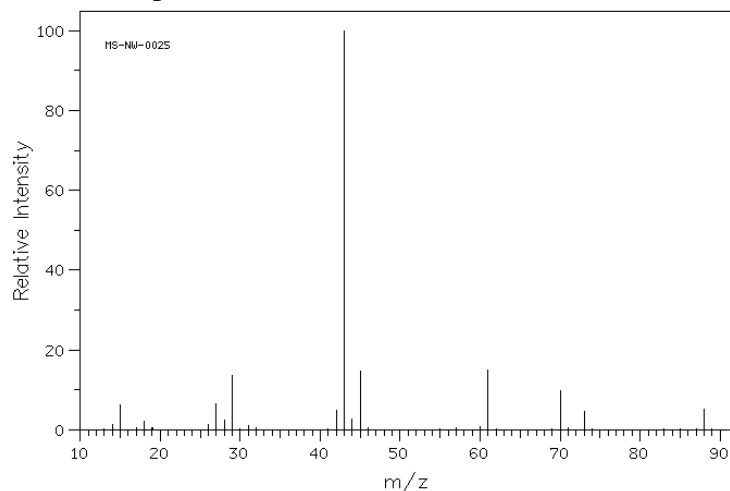


---



---

The mass spectrum of the molecule is shown below

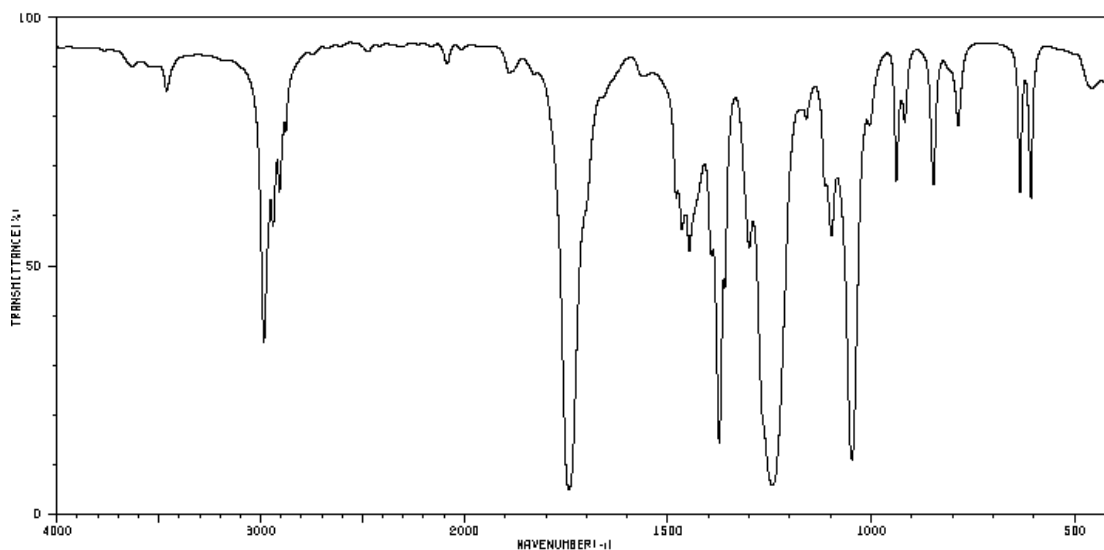


- b. i. What is the mass of the parent molecular ion? \_\_\_\_\_ 1 mark
- ii. What is the molecular formula of the molecule? \_\_\_\_\_ 1 mark
- iii. What possible fragment could cause the peaks - at 15 \_\_\_\_\_ 1 + 1 = 2 marks  
- at 29? \_\_\_\_\_

The infrared spectrum of the molecule is shown over the page.

**SECTION B – Question 2 – continued**

**TURN OVER**



c. i. Explain how the infrared spectrum shows that this is not an alcohol molecule? 1 mark

---



---

ii. The C = O bond causes one of the absorption peaks. Identify this peak. 1 mark

---

d. There are three possible structural isomers that have this molecular formula. Draw and name the three isomers. 3 marks

Isomer 1: \_\_\_\_\_ Isomer 2: \_\_\_\_\_ Isomer 3: \_\_\_\_\_

**SECTION B** - continued



**Question 3** (6 marks)

Diabetics often rely on carrying around snake lollies in case of moments of hypoglycemia, where their blood sugar is too low. A 7.21 g snake lolly is burned in a bomb calorimeter. The temperature started at 17.4 °C and leveled off at 23.5 °C. The manufacturer of the bomb calorimeter determined the heat capacity of the calorimeter to be 9.32 kJ/°C.

- a. Calculate the energy released from the combustion of the jelly baby.

---

---

---

2 marks

- b. If we assume that the jelly baby contains only glucose, calculate the amount of glucose (in mol) present in the jelly baby.

---

---

---

---

2 marks

- c. Calculate % m/m of glucose in the jelly baby.

---

---

---

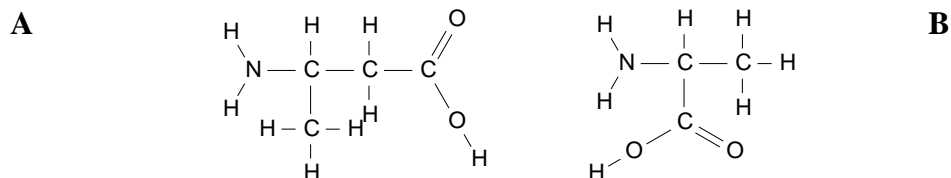
2 marks

**SECTION B – continued**  
**TURN OVER**

**Question 4** (11 marks)

Proteins are very long molecules formed when many amino acid molecules react together.

a. Two molecules, A and B, are drawn below.



- i. One of these molecules is an  $\alpha$ -amino acid and the other is not. Identify the molecule that is **not** an  $\alpha$ -amino acid and explain why it is not an  $\alpha$ -amino acid. 2 marks

---



---

- ii. If a molecule of A and a molecule of B react to form an amide linkage, how many different products are possible? 1 mark

---

- iii. Tripeptides are formed when three different amino acids react together. How many different products can form when the following combinations of amino acids react to form tripeptides? 2 marks

| amino acids                | number of possible tripeptides |
|----------------------------|--------------------------------|
| serine   serine   serine   |                                |
| serine   glycine   serine  |                                |
| serine   glycine   alanine |                                |

- b. A lipid molecule is formed from the reaction between linoleic acid and glycerol.
- i. What is the molecular formula of this lipid molecule? 2 marks

---

- ii. Write a balanced equation for the combustion of linoleic acid. 2 marks

---

**SECTION B – Question 4** - continued

- iii. Linoleic acid is an oil, but it is not a biodiesel molecule. Explain how biodiesel is made from linoleic acid. 1 mark

---



---

- c. The combustion of biodiesel produces carbon dioxide. Explain why biodiesel is considerable preferable for the environment than diesel. 1 mark

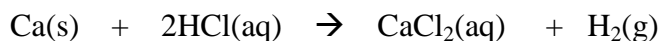
---



---

**Question 5** (10 marks)

Hydrogen gas can be formed from the reaction between calcium and hydrochloric acid. The equation for this reaction is



A series of experiments is conducted between calcium and hydrochloric acid. Each experiment is conducted in a flask and a gas syringe is attached to collect the gas evolved.

| Experiment | mass Ca g | HCl             | temperature, °C |
|------------|-----------|-----------------|-----------------|
| 1          | 0.4       | 250 mL of 0.1 M | 20              |
| 2          | 0.4       | 250 mL of 0.2 M | 20              |
| 3          | 0.4       | 250 mL of 0.1 M | 40              |
| 4          | 0.8       | 250 mL of 0.1 M | 20              |

- a. In comparing experiment 1 and experiment 2,  
i. how will the final volume of gas evolved compare?

---



---

- ii. How will the initial rate of gas production compare?

---

2 + 1 = 3 marks

**SECTION B – Question 5** - continued

**TURN OVER**

- b. In comparing experiment 1 and experiment 4,  
 i. how will the final volume of gas evolved compare?

---

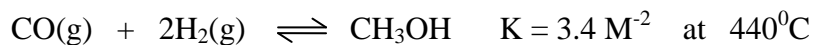
- ii. How will the initial rate of gas production compare?

---

1 + 1 = 2 marks

**Question 6** (11 marks)

Methanol can be manufactured from carbon monoxide and hydrogen gases. The reaction is a reversible one.



Methanol is added to a 1 litre reactor at  $440^\circ\text{C}$ . The system is allowed to reach equilibrium where the concentration of methanol is found to be 0.32 M.

- a. Determine the carbon monoxide concentration. 3 marks

---



---



---

- b. An equilibrium mixture of the three gases is at  $440^\circ\text{C}$ . The volume of the reactor is halved. Explain the impact of this change on each of the following;

i. the value of the equilibrium constant: \_\_\_\_\_ 1 mark

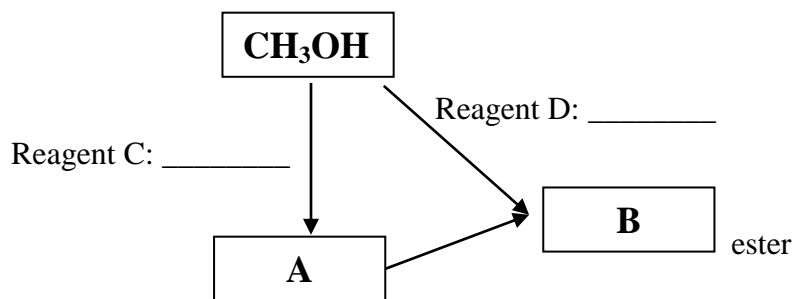
ii. the position of equilibrium: \_\_\_\_\_ 1 mark

iii. the amount of carbon monoxide: \_\_\_\_\_ 1 mark

iv. the concentration of the carbon monoxide: \_\_\_\_\_ 1 mark

- c. Some of the methanol is to be used to manufacture an ester.

**SECTION B – Question 6 - continued**



Assuming methanol is the only available reactant for this ester,

- i. Draw the structure of molecule A. 1 mark
  
- ii. What is the formula of the reagent, C, required to convert methanol to molecule A? \_\_\_\_\_ 1 mark
  
- iii. Draw the structure of the ester, molecule B. 1 mark
  
- iv. Name the catalyst used for the esterification. \_\_\_\_\_ 1 mark

**SECTION B - continued**  
**TURN OVER**

**Question 7** (13 marks)

A burner containing ethanol is placed under a beaker containing 450 mL of water. The burner is lit and the following data is recorded;

Initial temperature water:  $21.0^{\circ}\text{C}$

Initial mass of ethanol: 46.82 g

Final mass of ethanol: 46.18 g



- a.** Calculate the energy released by the ethanol. 3 marks

---

---

- b.** Determine the expected final temperature of the water if the transfer of energy to the water is 100% efficient. 2 marks

---

---

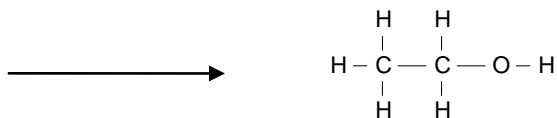
**SECTION B – Question 7 - continued**

c. Ethanol can be formed from non renewable sources or from renewable sources.

**Non renewable**

i. Name a non renewable source of ethanol \_\_\_\_\_ 1 mark

ii. Use the template provided below to show the final step in the production of ethanol from this source. 1 mark



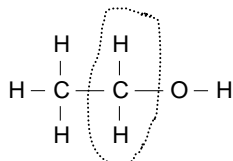
**Renewable**

iii. Name a renewable source of ethanol \_\_\_\_\_ 1 mark

iv. Write a balanced equation for the formation of ethanol from this source 1 mark

\_\_\_\_\_

d. A sample of ethanol is subjected to NMR spectroscopy.



i. How many different hydrogen environments does ethanol have? \_\_\_\_\_ 1 mark

ii. The  $-\text{CH}_2-$  group circled above will be subject to splitting. Explain what the splitting arrangement will be? 2 marks

\_\_\_\_\_

\_\_\_\_\_

iii. What shift would you expect on this circled group? 1 mark

\_\_\_\_\_

**SECTION B - continued**  
**TURN OVER**

**Question 8** (8 marks)

The aluminium/air cell is unusual in that the aluminium electrode can be replaced. In this way it referred to as 'mechanically rechargeable'. This cell produces a relatively high voltage of 2.75 volts. The electrolyte used in an alkaline one containing  $\text{OH}^-$  ions.

The overall equation for this cell is;



- a. Give two reasons why this cell might be popular. 2 marks

---

---

- b. The overall equation for this reaction is provided. One of the half equations is in the Data Book.

Given this information, write a balanced half equation for the reaction

- i. occurring at the anode \_\_\_\_\_ 1 mark

- ii. occurring at the cathode \_\_\_\_\_ 1 mark

- c. Which electrode will be the positive electrode? \_\_\_\_\_ 1 mark

- d. This cell is described as 'mechanically rechargeable'. Explain how this cell is different from a typical secondary cell. 1 mark

---

---

- e. When this cell is sold it has a piece of tape on the back that covers a small hole. To make the cell operational this tape has to be removed. Explain the role of the tape. 2 marks

---

---

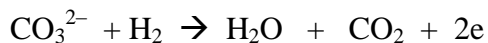
**SECTION B** - continued



**Question 9** (5 marks)

One popular type of fuel cell is the MCFC, the molten carbonate fuel cell. It is so named because it operates at temperatures over 650<sup>0</sup>C where the lithium potassium carbonate salt is molten. The molten carbonate ions allow the movement of charge. The attraction of these cells is that they can use indirect sources of hydrogen gas like natural gas or biogas. This eliminates the need to prepare pure hydrogen as a reactant.

The half equations for this cell are;



Polarity: \_\_\_\_\_



Polarity: \_\_\_\_\_

a. i. Use the lines provided to state the polarity of both half equations

ii. Do the carbonate ions flow towards the anode or cathode? \_\_\_\_\_

b. Write an overall equation for this cell.

\_\_\_\_\_

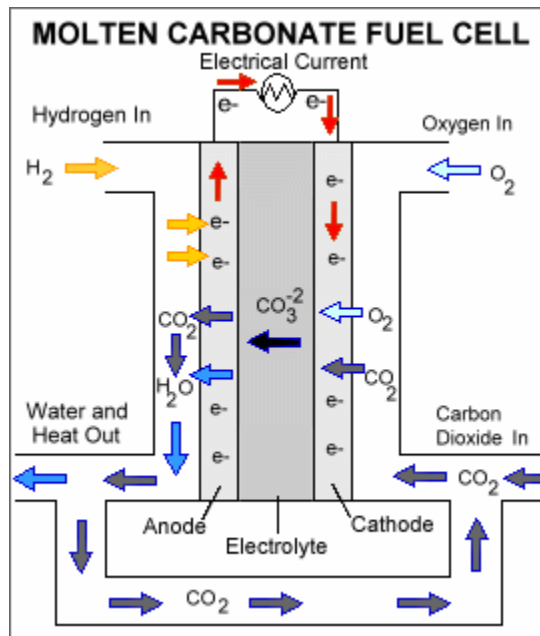
c. Does this cell contribute to the levels of carbon dioxide in the atmosphere? Explain your answer.

\_\_\_\_\_

\_\_\_\_\_

d. Is this cell rechargeable? Explain your answer.

\_\_\_\_\_



1 + 1 = 2 marks

1 mark

**SECTION B - continued  
TURN OVER**

**Question 10** (8 marks)

Copper can form two different compounds when it reacts with chlorine, CuCl or CuCl<sub>2</sub>.

A student performs an electrolysis experiment to verify which compound she has a sample of. She adds the solid to a crucible, places the crucible on a Bunsen and conducts an electrolysis of the molten solution using inert electrodes.

The mass of the cathode is recorded and the volume of gas produced at the anode is also recorded.

Initial mass of cathode: 54.606 g

Final mass of cathode: 54.898 g

Volume of gas collected: 0.0920 L at 450<sup>0</sup>C and 150 kPa

- a. i. Calculate the number of mole of copper produced at the cathode. 2 marks

---



---

- ii. Calculate the number of mole of chlorine gas generated at the anode. 2 marks

---



---



---

- iii. What conclusion can you draw about the chemical formula of the copper compound used? 1 mark

---

- b. Write balanced half equations for the reactions occurring at each electrode.

anode: \_\_\_\_\_ cathode: \_\_\_\_\_  
1 + 1 = 2 marks

- c. Benedict's reagent is used to detect the presence of reducing sugars. Benedict's solution is blue in colour due to the presence of CuSO<sub>4</sub>. When Benedict's reagent is heated in the presence of a reducing sugar like glucose, the copper compound turns orange red.

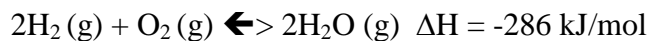
Given that this is a test for a reducing sugar, what do you think is causing this colour change in the Benedict's reagent? 1 mark

---

**SECTION B** - continued

**Question 11** (15 marks)

Complete the following table by writing forward, reverse or no change for equilibrium shift, and decreases, increases or remains the same for the concentrations of reactants and products and for the value of K.



| Action                | Equilibrium shift | [H <sub>2</sub> ] | [O <sub>2</sub> ] | [H <sub>2</sub> O] | K |
|-----------------------|-------------------|-------------------|-------------------|--------------------|---|
| Add H <sub>2</sub>    |                   |                   |                   |                    |   |
| Add H <sub>2</sub> O  |                   |                   |                   |                    |   |
| Remove O <sub>2</sub> |                   |                   |                   |                    |   |
| Increase temperature  |                   |                   |                   |                    |   |
| Increase pressure     |                   |                   |                   |                    |   |
| Add catalyst          |                   |                   |                   |                    |   |

30 x ½ = 15 marks

**END OF QUESTION AND ANSWER BOOK**