

## 2013 Trial Examination

STUDENT NUMBER

Figures


Words

Letter

--

# CHEMISTRY

## Units 3 & 4 - Written examination

Reading time: 15 minutes

Writing time: 2 hours and 30 minutes

### QUESTION AND ANSWER BOOK

#### Structure of book

<i>Section</i>	<i>Number of questions</i>	<i>Number of questions to be answered</i>	<i>Number of marks</i>	<i>Suggested times (minutes)</i>
A	30	30	30	45
B	11	11	102	105
			Total 132	150

- Students are permitted to bring into the examination room: pens, pencils, highlighters, erasers, sharpeners and rulers
- Students are NOT permitted to bring into the examination room: blank sheets of paper and/or white out liquid/tape.
- No calculator is permitted in this examination.

#### Materials supplied

- Question and answer book of 28 pages.

#### Instructions

- Print your name in the space provided on the top of this page.
- All written responses must be in English.

**Students are NOT permitted to bring mobile phones and/or any other unauthorised electronic communication devices into the examination room.**

**SECTION A – Multiple-choice questions**

**Instructions for Section A**

Answer **all** questions.

Choose the response that is **correct** or **best answers** the question.

A correct answer scores 1, an incorrect answer scores 0.

No mark will be given if more than one answer is completed for any question.

Marks will **not** be deducted for incorrect answers.

**Question 1**

The number of atoms of oxygen in 400 g of calcium carbonate,  $\text{CaCO}_3$  is

- A. 4
- B. 12
- C.  $4 \times 6.02 \times 10^{23}$
- D.  $4 \times 3 \times 6.02 \times 10^{23}$

**Question 2**

20 g of metal X reacts exactly with 16 g of sulfur to form a compound XS. Metal X is most likely to be

- A. sodium
- B. calcium
- C. barium
- D. zinc

**Question 3**

A solution containing 0.250 mole of silver nitrate is added to a beaker containing 0.620 mole of magnesium chloride. The number of mole of precipitate formed will be

- A. 0.125
- B. 0.250
- C. 0.310
- D. 0.620

**Question 4**

The chemical formula of methanol is  $\text{CH}_3\text{OH}$ . When 8.0 L of methanol is burnt in air, and the pressure and temperature are held constant, the volumes of carbon dioxide and steam produced will be, respectively,

- A. 4 L and 4 L
- B. 4 L and 8 L
- C. 8 L and 8 L
- D. 8 L and 16 L

**SECTION A - continued**

**Question 5**

A solution has a pH of 13. From this information, it is possible that

	$[\text{H}_3\text{O}^+]$	$[\text{OH}^-]$	solution
<b>A.</b>	$10^{-1}$	$10^{-13}$	0.1 M HCl
<b>B.</b>	$10^{-1}$	$10^{-13}$	0.05 M $\text{H}_2\text{SO}_4$
<b>C.</b>	$10^{-13}$	$10^{-1}$	0.05 M NaOH
<b>D.</b>	$10^{-13}$	$10^{-1}$	0.05 M $\text{Mg}(\text{OH})_2$

**Question 6**

Methyl red is an acid/base indicator but it is also a weak acid.

A student has a 20.0 mL sample of NaOH solution of unknown concentration in a flask. She adds a few drops of methyl red solution of 0.0100 M concentration. The contents of the flask are yellow in colour. She continues to add methyl red until, after the addition of 15.0 mL, the flask and its contents turn red in colour.

The concentration of the NaOH

- A. cannot be determined without the addition of another indicator
- B. cannot be determined because methyl red is a weak acid
- C. is 0.0075 M
- D. is 0.0133 M

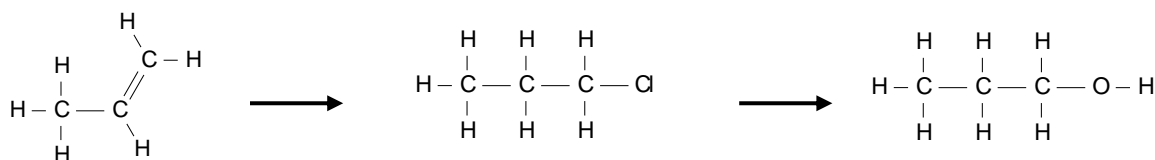
**Question 7**

When propene reacts with hydrochloric acid, there are two possible products. The products are

- A. 1-chloropropane and 1,2-dichloropropane
- B. polypropene and hydrogen gas
- C. 1-chloropropane and 2-chloropropane
- D. 1-chloropropene and 2-chloropropene

**Question 8**

The chemical pathway shown is for the manufacture of 1-propanol.

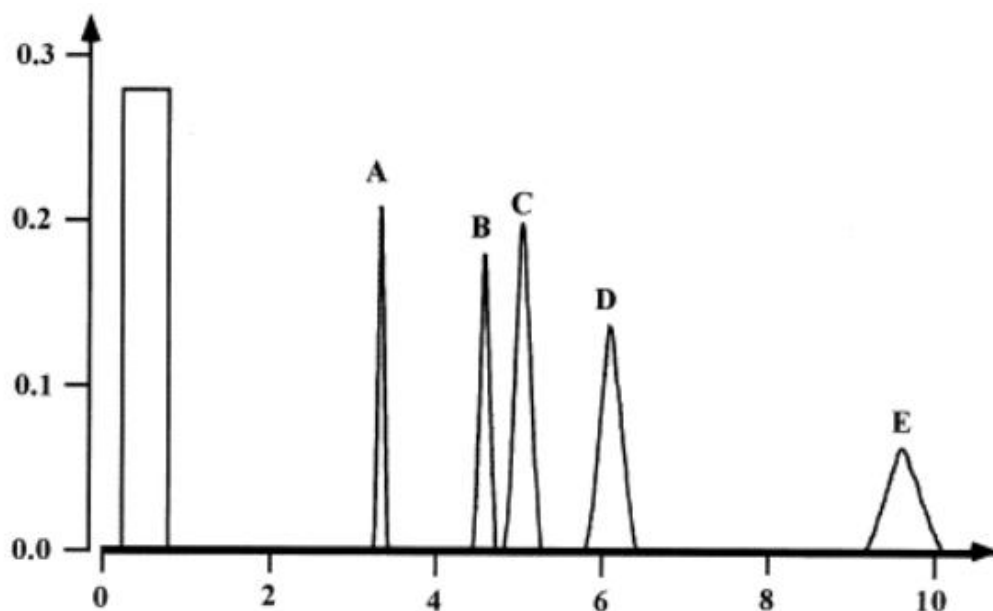


In this pathway,

- A. a substitution reaction is followed by an addition reaction
- B. an addition reaction is followed by a substitution reaction
- C. two addition reactions are performed and only one product is formed
- D. two substitution reactions are performed and three products will be formed

**SECTION A – continued  
TURN OVER**

## Question 9



The printout from a sample passing through a gas chromatogram is shown above. (The rectangular peak is not part of the sample). The following possible conclusions refer to the chromatogram

- I there are at least 5 different substances in the sample
- II there are only 5 different substances in the sample
- III the concentration of substance E is lower than that of substance D
- IV substance E is heavier than substance D

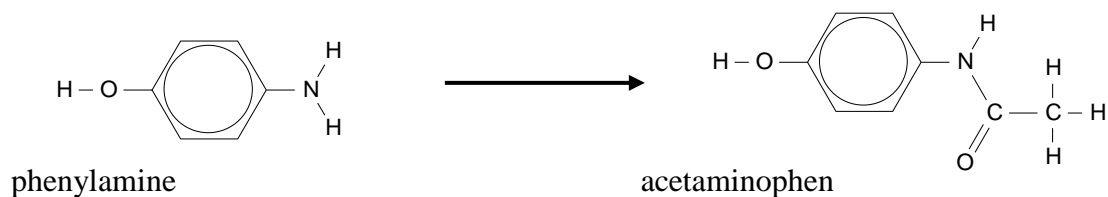
Which conclusions are valid?

- A. I only
- B. I and III only
- C. I, III and IV only
- D. I and IV only

SECTION A – continued

**Question 10**

The molecule shown is acetaminophen, used for pain relief.



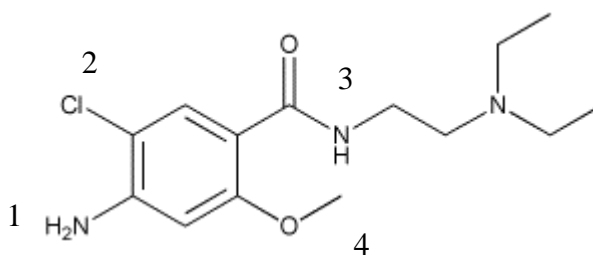
One of the reactants used to make acetaminophen is phenylamine.

Acetaminophen could be formed from the

- A. condensation reaction between phenylamine and ethanoic acid
- B. esterification reaction between phenylamine and ethanoic acid
- C. polymerisation reaction between phenylamine and ethanol
- D. substitution reaction between phenylamine and ethanol

**Question 11**

The molecule drawn below is known as metoclopramide. It is used to treat nausea and vomiting and is often used in conjunction with paracetamol.



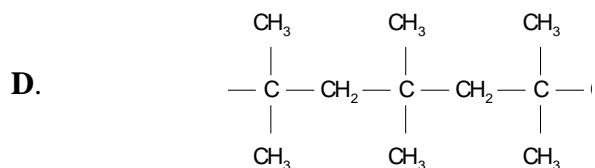
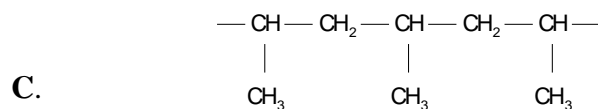
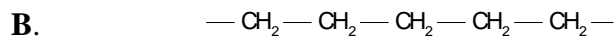
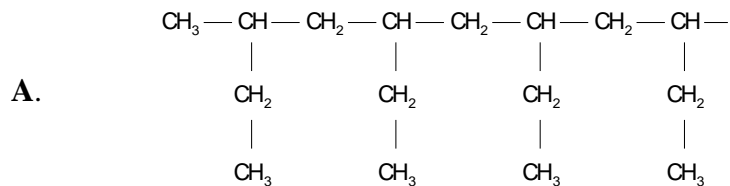
The four functional groups numbered on this molecule are, in order,

- A. amine, chloro, amide and carboxyl
- B. amine, chloro, amine and ester
- C. amide, chloro, amine and ether
- D. amine, chloro, amide and ether

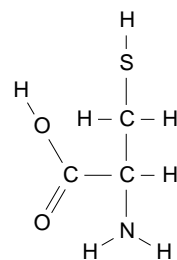
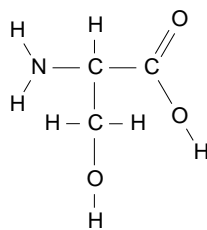
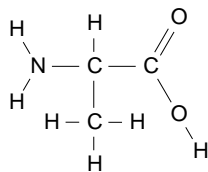
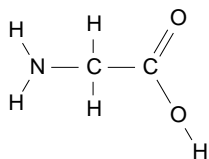
**SECTION A – continued**  
**TURN OVER**

**Question 12**

A segment of the polymer that can be formed from 1-butene is

**Question 13**

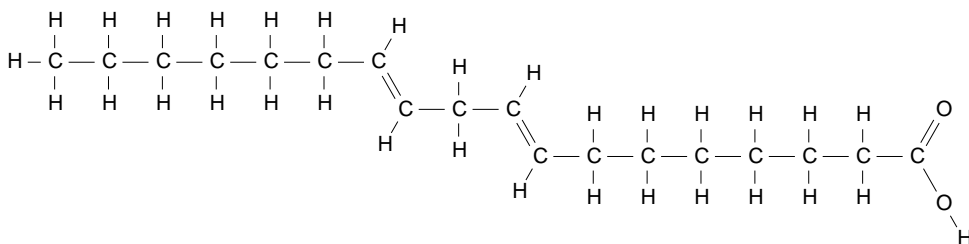
Four different amino acids are shown here



The most soluble amino acid in water is likely to be

- A. glycine
- B. alanine
- C. serine
- D. cysteine

**SECTION A** – continued

**Question 14**

The molecule shown here could be

- A. linoleic acid
- B. linolenic acid
- C. oleic acid
- D. stearic acid

**Question 15**

In a double-stranded DNA sample, cytosine constitutes 22% of the total number of bases. The percentage of adenine content in the double strand will

- A. 22%
- B. 28%
- C. 44%
- D. 56%

**Question 16**

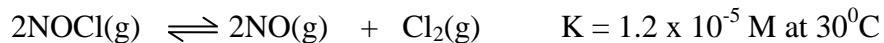
Citric acid has a molecular formula  $C_6H_8O_7$ . It has three listed  $K_a$  values. It has three values because

- A. it is a triprotic acid
- B. the  $K_a$  value varies significantly with temperature
- C. citric acid can decompose readily to form smaller acids
- D. the value varies depending on the isomer of citric acid used

**SECTION A – continued**  
**TURN OVER**

Use the following information to answer Questions 17 and 18

The decomposition of NOCl gas is a reversible, endothermic reaction.

**Question 17**

A high yield in this reaction is best favoured by

- A. low temperature and the addition of a catalyst
- B. high temperature and low pressure
- C. the addition of argon gas and the use of high pressure
- D. low temperature and high pressure

**Question 18**

NOCl is added to an empty reactor. At equilibrium, the mixture of these gases sits at  $30^\circ\text{C}$ . In this mixture, the

- A.  $[\text{NO}] = \frac{1}{2} [\text{Cl}_2]$
- B.  $[\text{NOCl}] < [\text{NO}]$
- C.  $[\text{NOCl}] > [\text{NO}]$
- D.  $[\text{NOCl}] = [\text{NO}]$

**Question 19**

Methanol can be produced from carbon monoxide and hydrogen gases. The equation is



What is the value of the equilibrium constant, at  $250^\circ\text{C}$ , for the reaction?



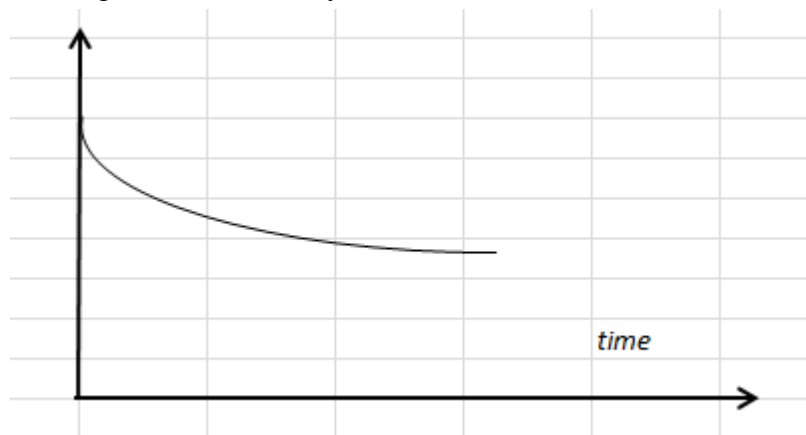
- A. -4.80
- B. 0.174
- C. 0.417
- D. 1.550

**SECTION A** – continued



**Question 20**

The following graph is drawn from data collected from the reaction of marble chips,  $\text{CaCO}_3$  reacting in a flask with hydrochloric acid.



The graph could be the

- A. mass of the gas evolved from the flask
- B. pH of the flask contents
- C. volume of the gas evolved from the flask
- D. mass of the flask over a period of time

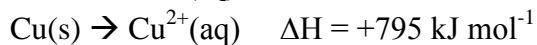
**Question 21**

An acid/base indicator that would be red in 0.005 M LiOH solution would be

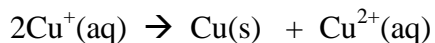
- A. phenolphthalein
- B. methyl red
- C. methyl orange
- D. thymol blue

**Question 22**

Enthalpy changes for two reactions of copper are shown below;



Use these values to calculate the enthalpy change for the reaction



- A. + 193 kJ mol<sup>-1</sup>
- B. - 193 kJ mol<sup>-1</sup>
- C. - 409 kJ mol<sup>-1</sup>
- D. + 409 kJ mol<sup>-1</sup>

**SECTION A - continued**  
**TURN OVER**

**Question 23**

1.0 g of a hydrocarbon fuel produces 49.6 kJ of energy when combusted. The fuel is likely to be

- A. propane
- B. butane
- C. hexane
- D. octane

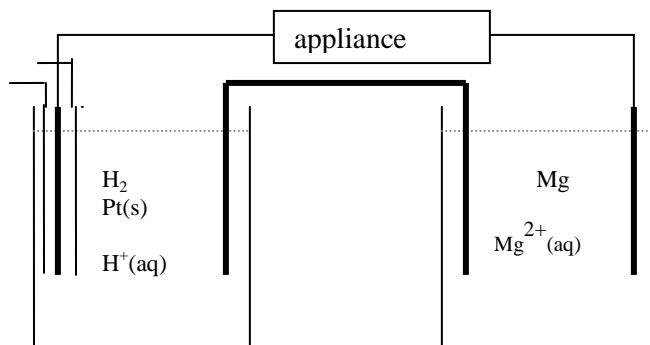
**Question 24**

The term 'carbon neutral' refers to fuel sources

- A. that do not use carbon dioxide
- B. that do not produce carbon dioxide
- C. that use a similar volume of carbon dioxide to the amount they produce
- D. that produce less carbon dioxide than the amount they produce

**Question 25**

A galvanic cell is constructed from a hydrogen half cell connected to a magnesium half cell.



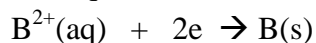
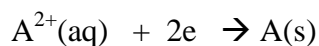
In this cell

	oxidant	reductant	anode	cathode
<b>A.</b>	$\text{Mg}^{2+}$	$\text{H}^+$	Pt	Mg
<b>B.</b>	Mg	$\text{H}_2$	Mg	Pt
<b>C.</b>	$\text{H}_2$	$\text{Mg}^{2+}$	Pt	Mg
<b>D.</b>	$\text{H}^+$	Mg	Mg	Pt

**SECTION A** - continued

**Question 26**

The electrochemical series is used to help predict the outcome in redox reactions. When two particular half cells are connected, their half equations are found on this series.



If  $A^{2+}$  has the higher  $E^0$  value, it will be the

- A. oxidant and the positive electrode
- B. oxidant and the negative electrode
- C. reductant and the negative electrode
- D. reductant and the positive electrode

*Use the following information to answer Questions 27 and 28*

The term 'lithium cell' refers to a wide range of modern cells that use lithium as lithium metal or lithium ions. A typical example is the cell formed between lithium and aluminium alloy and manganese dioxide,  $MnO_2$ ,

The half equations for this cell are;

**Question 27**

The overall equation for this cell can be expressed as

- A.  $Li + MnO_2 \rightarrow Li^+ + MnO_2$
- B.  $2Li + MnO_2 \rightarrow LiMnO_2 + Li^+$
- C.  $Li + MnO_2 \rightarrow LiMnO_2$
- D.  $Li^+ + MnO_2 \rightarrow Li + MnO_2$

**Question 28**

In this cell, the

- A. oxidation number of manganese changes from  $+4$  to  $+3$  at the cathode
- B. lithium ions are converted to lithium metal at the cathode
- C. lithium ions are converted to lithium metal at the anode
- D. lithium is oxidised at one electrode and reduced at the other

**SECTION A - continued**  
**TURN OVER**

**Question 29**

When a 4 M aqueous solution of NaCl is subjected to electrolysis the products will be

- A. sodium metal and chlorine gas
- B. hydrogen gas, chlorine gas and sodium hydroxide solution
- C. hydrogen gas and oxygen gas
- D. hydrogen gas, oxygen gas and sodium chloride solution

**Question 30**

A current of 4 amps is passed through a molten metal solution for 400 minutes. The mass of metal obtained is 9.0 g. The metal is most likely to be

- A. lithium
- B. sodium
- C. aluminium
- D. lead

**END OF SECTION A**

**SECTION B****Instructions for Section B**

Questions must be answered in the spaces provided in this book.

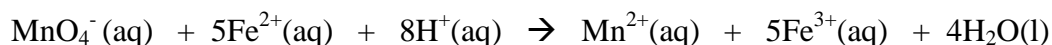
To obtain full marks for your responses you should

- Give simplified answers with an appropriate number of significant figures to all numerical questions; unsimplified answers will not be given full marks.
- Show all workings in your answers to numerical questions. No credit will be given for an incorrect answer unless it is accompanied by details of the working.

Make sure chemical equations are balanced and that the formulas for individual substances include an indication of state; for example,  $\text{H}_2(\text{g})$ ;  $\text{NaCl}(\text{s})$

**Question 1** (9 marks)

Potassium permanganate,  $\text{KMnO}_4$ , solutions are pink in colour. The  $\text{MnO}_4^-$  ions can be used to convert  $\text{Fe}^{2+}$  ions to  $\text{Fe}^{3+}$ . The equation for this reaction is



- a. i. Write a balanced half equation for the reduction of  $\text{MnO}_4^-$  ions. 1 mark

---

- ii. Calculate the oxidation number of manganese in  $\text{MnO}_4^-$  \_\_\_\_\_ 1 mark

- iii. Write a balanced half equation for the oxidation of  $\text{Fe}^{2+}$  ions. 1 mark

---

A standard solution of  $\text{KMnO}_4$  can be used to determine the concentration of a  $\text{Fe}^{2+}$  solution. To do this, a 30.0 mL sample of 0.100 M  $\text{KMnO}_4$  is placed in a flask and successive additions of  $\text{Fe}^{2+}$  solution are made. With each addition of  $\text{Fe}^{2+}$ , the intensity of the pink colour drops. The progress of the reaction can be monitored using a UV-visible spectrophotometer. The spectrophotometer readings are given in the following table;

volume $\text{Fe}^{2+}$ added, mL	Absorbance
0	0.60
5	0.49
10	0.38
15	0.27
20	0.16

**SECTION B - continued**  
**TURN OVER**

b. i. Use the axes provided to graph the values in the table.

1 mark



ii. Explain clearly why the intensity readings are dropping as the reaction proceeds. 1 mark

---

---

iii. From your graph, what is the volume of  $\text{Fe}^{2+}$  solution that would be required to react exactly with the permanganate solution? 1 mark

---

iv. Determine the concentration of the  $\text{Fe}^{2+}$  solution. 3 marks

---

---

---

**SECTION B** - continued

**Question 2** (12 marks)

A 2.000 g sample of an ester molecule is found to contain 1.091 g of carbon and 0.727 g of oxygen.

a. Determine the empirical formula of the molecule.

3 marks

---

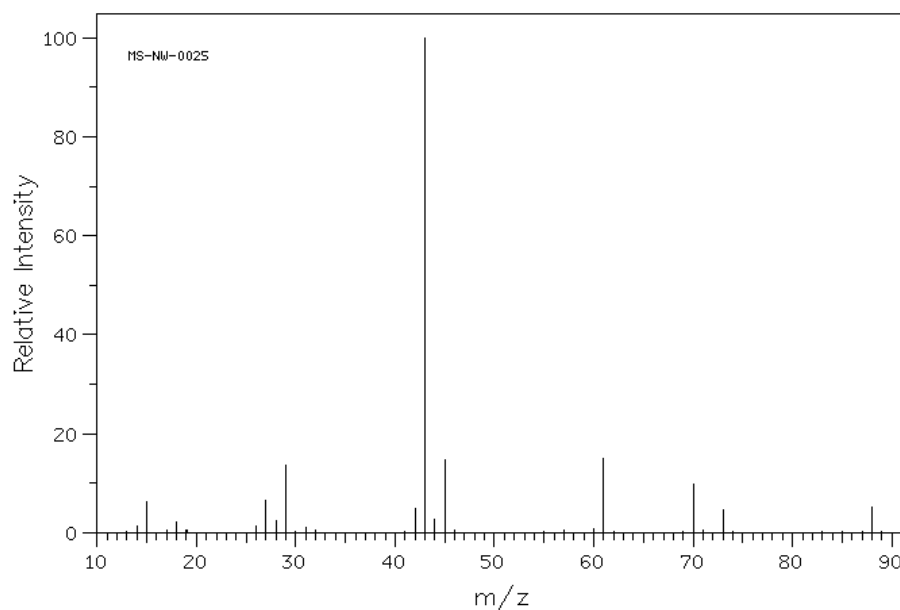


---



---

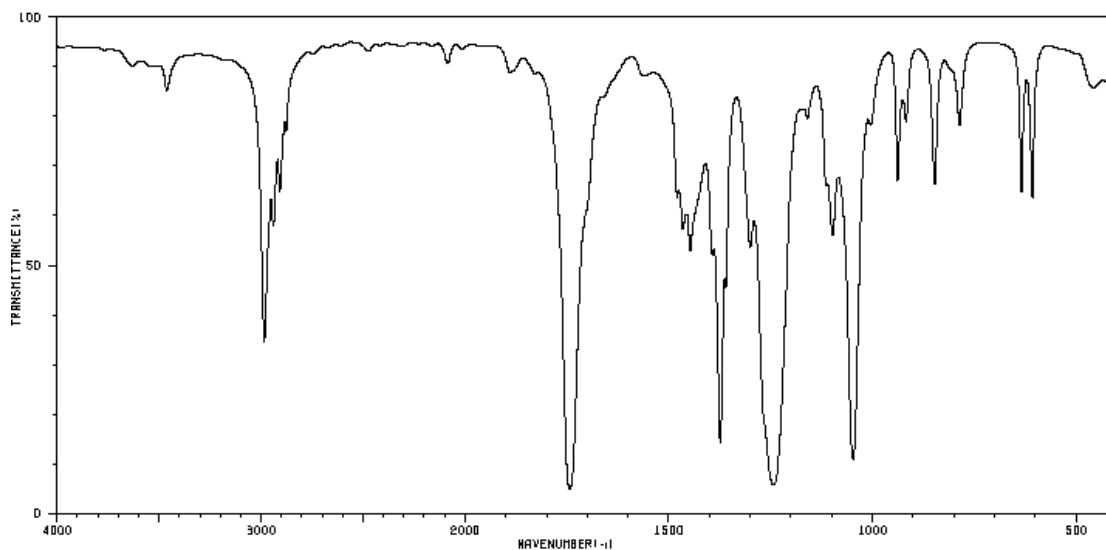
The mass spectrum of the molecule is shown below



- b. i. What is the mass of the parent molecular ion? \_\_\_\_\_ 1 mark
- ii. What is the molecular formula of the molecule? \_\_\_\_\_ 1 mark
- iii. What possible fragment could cause the peaks - at 15 \_\_\_\_\_ 1 + 1 = 2 marks  
- at 29? \_\_\_\_\_

The infrared spectrum of the molecule is shown over the page.

**SECTION B** - continued  
**TURN OVER**



c. i. Explain how the infrared spectrum shows that this is not an alcohol molecule? 1 mark

---



---

ii. The C = O bond causes one of the absorption peaks. Identify this peak. 1 mark

---

d. There are three possible structural isomers that have this molecular formula. Draw and name the three isomers. 3 marks

Isomer 1: \_\_\_\_\_ Isomer 2: \_\_\_\_\_ Isomer 3: \_\_\_\_\_

**SECTION B** - continued



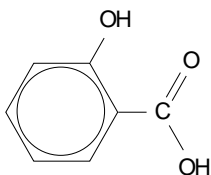
**Question 3** (7 marks)

Aspirin is usually made from salicylic acid. Salicylic acid has similar pain relief properties to aspirin but it is not used commercially because of its negative side effects.

Salicylic acid is a weak acid with a  $K_a$  value of  $1.07 \times 10^{-3}$ .

- a. i. Show the reaction of salicylic acid with water.

1 mark

**salicylic acid**

- ii. The sodium salt of salicylic acid is more soluble than salicylic acid.

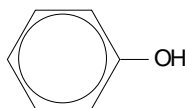
Show the reaction between salicylic acid and sodium hydroxide.

1 mark

A further modification of salicylic acid that has been trialed has been the formation of phenol salicylate. This is formed from the ester reaction between salicylic acid and phenol.

- b. Draw the structure of phenol salicylate.

1 mark

**phenol**

- c. i. Calculate the pH of a 0.10 M solution of salicylic acid.

3 marks

---



---



---

- ii. Calculate the percentage dissociation of the salicylic acid.

1 mark

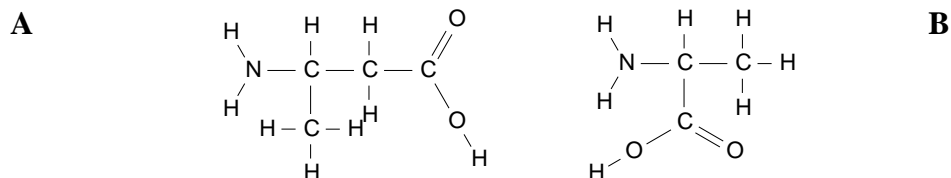
---

**SECTION B - continued  
TURN OVER**

**Question 4** (11 marks)

Proteins are very long molecules formed when many amino acid molecules react together.

a. Two molecules, A and B, are drawn below.



- i. One of these molecules is an  $\alpha$ -amino acid and the other is not. Identify the molecule that is **not** an  $\alpha$ -amino acid and explain why it is not an  $\alpha$ -amino acid. 2 marks

---



---

- ii. If a molecule of A and a molecule of B react to form an amide linkage, how many different products are possible? 1 mark

---

- iii. Tripeptides are formed when three different amino acids react together. How many different products can form when the following combinations of amino acids react to form tripeptides? 2 marks

amino acids	number of possible tripeptides
serine   serine   serine	
serine   glycine   serine	
serine   glycine   alanine	

- b. A lipid molecule is formed from the reaction between linoleic acid and glycerol.
- i. What is the molecular formula of this lipid molecule? 2 marks

---

- ii. Write a balanced equation for the combustion of linoleic acid. 2 marks

---

**SECTION B** - continued

- iii. Linoleic acid is an oil, but it is not a biodiesel molecule. Explain how biodiesel is made from linoleic acid. 1 mark

---



---

- c. The combustion of biodiesel produces carbon dioxide. Explain why biodiesel is considerable preferable for the environment than diesel. 1 mark

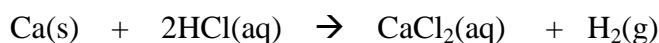
---



---

**Question 5** (10 marks)

Hydrogen gas can be formed from the reaction between calcium and hydrochloric acid. The equation for this reaction is



A series of experiments is conducted between calcium and hydrochloric acid. Each experiment is conducted in a flask and a gas syringe is attached to collect the gas evolved.

Experiment	mass CaCO <sub>3</sub> , g	HCl	temperature, °C
1	0.4	250 mL of 0.1 M	20
2	0.4	250 mL of 0.2 M	20
3	0.4	250 mL of 0.1 M	40
4	0.8	250 mL of 0.1 M	20

- a. In comparing experiment 1 and experiment 2,  
i. how will the final volume of gas evolved compare? 2 marks

---



---

- ii. How will the initial rate of gas production compare? 1 mark

---

**SECTION B** - continued  
**TURN OVER**

- b.** In comparing experiment 1 and experiment 4,  
**i.** how will the final volume of gas evolved compare? 1 mark

---

- ii.** How will the initial rate of gas production compare? 1 mark

---

- c.** In comparing experiment 1 and experiment 3,  
**i.** how will the final volume of gas evolved compare? 1 mark

---

- ii.** How will the initial rate of gas production compare? 1 mark

---

- d. i.** Explain, in terms of collision theory, why the rate of a reaction usually increases as the temperature increases. 2 marks

---

---

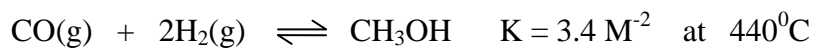
- ii.** Amylase is an enzyme that helps breakdown starch. When the temperature of a starch solution is increased over  $60^{\circ}\text{C}$ , the rate of the reaction slows. Explain why this happens. 1 mark

---

**SECTION B** - continued

**Question 6** (11 marks)

Methanol can be manufactured from carbon monoxide and hydrogen gases. The reaction is a reversible one.



Methanol is added to a 1 litre reactor at  $440^\circ\text{C}$ . The system is allowed to reach equilibrium where the concentration of methanol is found to be 0.32 M.

- a. Determine the carbon monoxide concentration. 3 marks

---



---



---

- b. An equilibrium mixture of the three gases is at  $440^\circ\text{C}$ . The volume of the reactor is halved. Explain the impact of this change on each of the following;

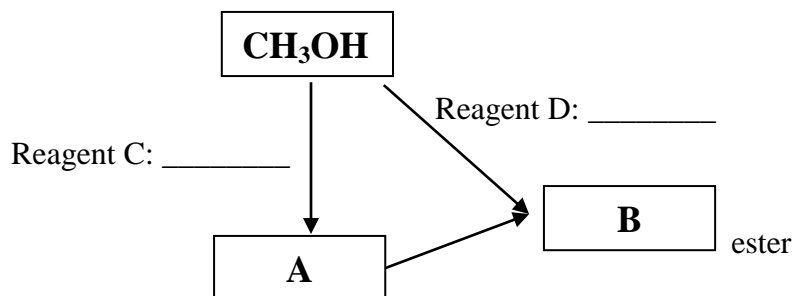
i. the value of the equilibrium constant: \_\_\_\_\_ 1 mark

ii. the position of equilibrium: \_\_\_\_\_ 1 mark

iii. the amount of carbon monoxide: \_\_\_\_\_ 1 mark

iv. the concentration of the carbon monoxide: \_\_\_\_\_ 1 mark

- c. Some of the methanol is to be used to manufacture an ester.



**SECTION B** - continued  
**TURN OVER**

Assuming methanol is the only available reactant for this ester,

i. Draw the structure of molecule A. 1 mark

ii. What is the formula of the reagent, C, required to convert methanol to molecule A? \_\_\_\_\_  
1 mark

iii. Draw the structure of the ester, molecule B. 1 mark

iv. Name the catalyst used for the esterification. \_\_\_\_\_ 1 mark

**Question 7** (13 marks)

A burner containing ethanol is placed under a beaker containing 450 mL of water. The burner is lit and the following data is recorded;

Initial temperature water:  $21.0^{\circ}\text{C}$

Initial mass of ethanol: 46.82 g

Final mass of ethanol: 46.18 g

a. Calculate the energy released by the ethanol. 3 marks

---



---



b. Determine the expected final temperature of the water if the transfer of energy to the water is 100% efficient. 2 marks

---



---

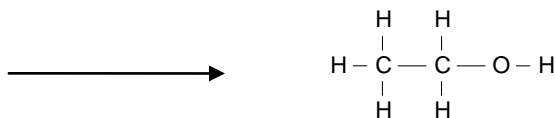
**SECTION B** - continued

c. Ethanol can be formed from non renewable sources or from renewable sources.

**Non renewable**

i. Name a non renewable source of ethanol \_\_\_\_\_ 1 mark

ii. Use the template provided below to show the final step in the production of ethanol from this source. 1 mark



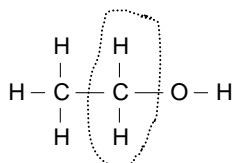
**Renewable**

iii. Name a renewable source of ethanol \_\_\_\_\_ 1 mark

iv. Write a balanced equation for the formation of ethanol from this source 1 mark

\_\_\_\_\_

d. A sample of ethanol is subjected to NMR spectroscopy.



i. How many different hydrogen environments does ethanol have? \_\_\_\_\_ 1 mark

ii. The  $-\text{CH}_2-$  group circled above will be subject to splitting. Explain what the splitting arrangement will be? 2 marks

\_\_\_\_\_

\_\_\_\_\_

iii. What shift would you expect on this circled group? 1 mark

\_\_\_\_\_

**SECTION B - continued**  
**TURN OVER**

**Question 8** (8 marks)

The aluminium/air cell is unusual in that the aluminium electrode can be replaced. In this way it referred to as 'mechanically rechargeable'. This cell produces a relatively high voltage of 2.75 volts. The electrolyte used in an alkaline one containing  $\text{OH}^-$  ions.

The overall equation for this cell is;



- a.** Give two reasons why this cell might be popular. 2 marks

---



---

- b.** The overall equation for this reaction is provided. One of the half equations is in the Data Book.

Given this information, write a balanced half equation for the reaction

- i.** occurring at the anode \_\_\_\_\_  
1 mark

- ii.** occurring at the cathode \_\_\_\_\_  
1 mark

- c.** Which electrode will be the positive electrode? \_\_\_\_\_  
1 mark

- d.** This cell is described as 'mechanically rechargeable'. Explain how this cell is different from a typical secondary cell. 1 mark

---



---

- e.** When this cell is sold it has a piece of tape on the back that covers a small hole. To make the cell operational this tape has to be removed. Explain the role of the tape. 2 marks

---



---

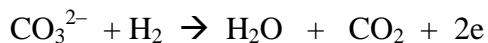
**SECTION B** - continued



**Question 9** (5 marks)

One popular type of fuel cell is the MCFC, the molten carbonate fuel cell. It is so named because it operates at temperatures over 650<sup>0</sup>C where the lithium potassium carbonate salt is molten. The molten carbonate ions allow the movement of charge. The attraction of these cells is that they can use indirect sources of hydrogen gas like natural gas or biogas. This eliminates the need to prepare pure hydrogen as a reactant.

The half equations for this cell are;



Polarity: \_\_\_\_\_



Polarity: \_\_\_\_\_

a. i. Use the lines provided to state the polarity of both half equations

ii. Do the carbonate ions flow towards the anode or cathode? \_\_\_\_\_

b. Write an overall equation for this cell.

\_\_\_\_\_

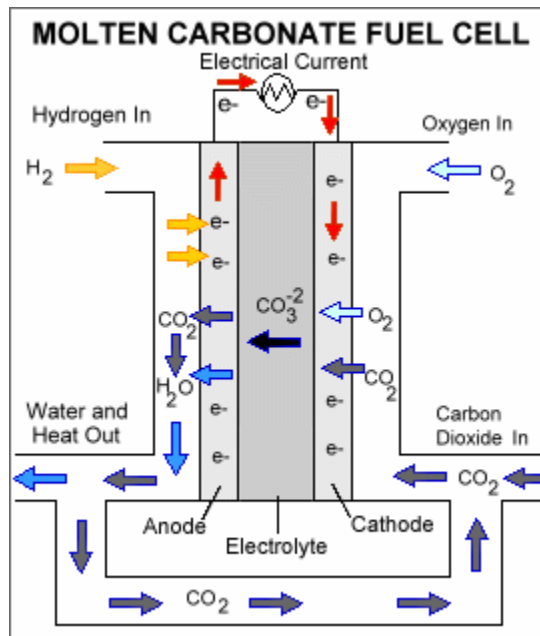
c. Does this cell contribute to the levels of carbon dioxide in the atmosphere? Explain your answer.

\_\_\_\_\_

\_\_\_\_\_

d. Is this cell rechargeable? Explain your answer.

\_\_\_\_\_



1 + 1 = 2 marks

1 mark

**SECTION B - continued  
TURN OVER**

**Question 10** (8 marks)

Copper can form two different compounds when it reacts with chlorine, CuCl or CuCl<sub>2</sub>.

A student performs an electrolysis experiment to verify which compound she has a sample of. She adds the solid to a crucible, places the crucible on a Bunsen and conducts an electrolysis of the molten solution using inert electrodes.

The mass of the cathode is recorded and the volume of gas produced at the anode is also recorded.

Initial mass of cathode: 54.606 g

Final mass of cathode: 54.898 g

Volume of gas collected: 0.0920 L at 450<sup>0</sup>C and 150 kPa

- a. i. Calculate the number of mole of copper produced at the cathode. 2 marks

---



---

- ii. Calculate the number of mole of chlorine gas generated at the anode. 2 marks

---



---



---

- iii. What conclusion can you draw about the chemical formula of the copper compound used? 1 mark

---

- b. Write balanced half equations for the reactions occurring at each electrode.

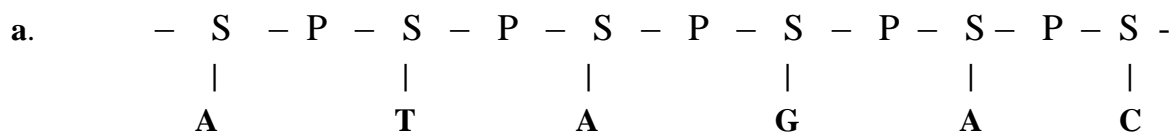
anode: \_\_\_\_\_ cathode: \_\_\_\_\_  
1 + 1 = 2 marks

- c. Benedict's reagent is used to detect the presence of reducing sugars. Benedict's solution is blue in colour due to the presence of CuSO<sub>4</sub>. When Benedict's reagent is heated in the presence of a reducing sugar like glucose, the copper compound turns orange red.

Given that this is a test for a reducing sugar, what do you think is causing this colour change in the Benedict's reagent? 1 mark

---

**SECTION B** - continued

**Question 11** (8 marks)

- i. One side of a DNA strand is shown above. Use the space provided to draw in the matching strand. 2 marks
- ii. Show the hydrogen bonds between the two strands. 1 mark
- iii. A different strand, with the same number of sugar molecules, has stronger bonds holding the two strands together. Give a possible reason for this difference. 1 mark

---



---

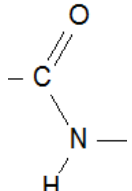
- iv. The empirical formula of this strand is determined. List the elements present. 1 mark

---



---

- b. Name the type of biomolecule that might contain the following linkages

- i.  Name of linkage: \_\_\_\_\_ 1 mark

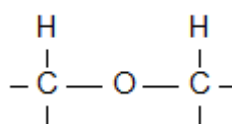
Linkage present in: \_\_\_\_\_

- ii.  Name of linkage: \_\_\_\_\_ 1 mark

Linkage present in: \_\_\_\_\_

**SECTION B** - continued  
**TURN OVER**

iii.



Name of linkage: \_\_\_\_\_

1 mark

Linkage present in: \_\_\_\_\_

**END OF QUESTION AND ANSWER BOOK**