



THE SCHOOL FOR EXCELLENCE (TSFX)

UNIT 3 CHEMISTRY 2008

WRITTEN EXAMINATION 1

Reading Time: 15 minutes
Writing Time: 1 hour 30 minutes

QUESTION AND ANSWER BOOK

Structure of Booklet

<i>Section</i>		<i>Number of Questions</i>	<i>Number of Questions to be Answered</i>	<i>Number of Marks</i>	<i>Suggested Times (min)</i>
A	Multiple choice questions	20	20	20	20
B	Short answer questions	7	7	68	68
				Total 88	Total 88

COMPLIMENTS OF THE SCHOOL FOR EXCELLENCE

Voted Number One For Excellence and Quality in VCE Programs and Tutorials.

THE SCHOOL FOR EXCELLENCE (TSFX)

The School For Excellence (**TSFX**) is a private education institution that provides educational services to Year 11 and 12 students out of school hours. These services include the development and delivery of intense revision courses before examinations, intense weekly tuition classes, study skills lectures, as well as specialised courses that prepare students in advance of each school term.

The educational programs conducted by **TSFX** are widely recognised for providing the highest quality programs in Victoria today. Our programs are the result of more than 16 years of collaborative effort and expertise from dozens of teachers and schools across the state, ensuring the highest possible quality resources and teaching styles for VCE students.

FREE VCE RESOURCES AT VCEDGE ONLINE

VCEdge Online is an educational resource designed to provide students the best opportunities to optimise their Year 11 or 12 scores. **VCEdge Online** members receive over \$300 worth of resources at **no charge**, including:

- Subject notes and course summaries.
- Sample A+ SACS and SATS.
- Trial examinations with worked solutions.
- Weekly study tips and exam advice (in the weeks leading up to the examinations)
- Two **FREE** tickets into an intense examination strategy lecture (valued at \$300!!!).
- Cheat sheets and formula cards.
- Critical VCE updates.
- Free VCE newsletters.
- Information on upcoming educational events.
- And much, much more!!!

JOIN FREE OF CHARGE AT WWW.TSFX.COM.AU

SECTION A - MULTIPLE CHOICE QUESTIONS

Instructions For Section A

Section A consists of 20 multiple-choice questions. Answer all 20 questions. Choose the response that is **correct** or **best answers the question**. A correct answer scores 1, an incorrect answer scores 0. No marks will be given if more than one answer is shown for any question.

QUESTION 1

The number of molecules present in 224 L of methane at $0^{\circ}C$ and 101.3 kPa is:

- A 3.0×10^{24}
- B 6.0×10^{24}
- C 3.0×10^{23}
- D 6.0×10^{23}

QUESTION 2

The simplest formula for a compound which contains 51.8% carbon, 9.8% hydrogen and 38.4% chlorine is:

- A $CHCl$
- B C_4H_9Cl
- C C_4H_8Cl
- D CH_2Cl

QUESTION 3

300 ml of a 0.35 M $Ca(OH)_2$ solution was reacted with 300 ml of 0.40 M HCl . The pH of the resultant solution is closest to:

- A 0.82
- B 1.12
- C 12.88
- D 13.18

QUESTION 4

A student wishes to determine the percentage by mass of barium in a sample. Which solution could be used to produce a precipitate containing barium?

- A NaI
- B $NaCl$
- C $NaNO_3$
- D Na_2SO_4

QUESTION 5

Which of the following reactions is **NOT** a redox process?

- A $2K_{(s)} + Br_{2(l)} \rightarrow 2KBr_{(s)}$
- B $Ca(OH)_{2(s)} + CO_{2(g)} \rightarrow CaCO_{3(s)} + H_2O_{(l)}$
- C $NH_4NO_{3(s)} \rightarrow N_2O_{(g)} + 2H_2O_{(g)}$
- D $CH_{4(g)} + Cl_{2(g)} \rightarrow CH_3Cl_{(g)} + HCl_{(g)}$

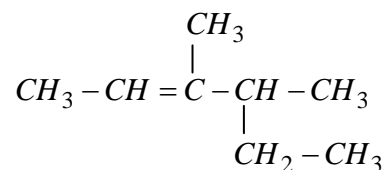
QUESTION 6

Which of the following statements is incorrect?

- A The oxidation number of sulfur in $S_4O_6^{2-}$ is 2.5
- B The oxidation number of oxygen in HOF is -2
- C The oxidation number of nitrogen in NH_4NO_2 is ± 3
- D The oxidation number of carbon in $C_6H_{12}O_6$ is 0

QUESTION 7

The systematic name for the molecule below is:



- A 2-ethyl-3-methyl-3-pentene
- B octene
- C 3,4-dimethyl-2-hexene
- D 3-methyl-4-ethyl-2-pentene

QUESTION 8

An organic species is water soluble and displays a boiling point of 78.3° . This compound may be used as a fuel and may be prepared in aqueous solutions from the fermentation of sugars. The organic species is most likely

- A Methanol
- B Ethanol
- C Methanoic acid
- D Ethanoic acid

QUESTION 9

The species with the lowest solubility in water is

- A Decanoic acid
- B Ethanoic acid
- C Pentanoic acid
- D Propanoic acid

QUESTION 10

At pH 6, the amino acids glycine, glutamic acid, asparagine and histidine exist in their fully charged (zwitterion) form. Which amino acid would migrate the furthest towards the positive terminal in gel electrophoresis?

- A Asparagine
- B Glutamic acid
- C Glycine
- D Histidine

QUESTION 11

The α -amino acid alanine has the molecular formula $C_3H_7O_2N$. If three alanine molecules react together to form a tripeptide, the relative molecular mass of this tripeptide would be:

- A 89
- B 231
- C 267
- D 283

QUESTION 12

A food chemist is developing a new chocolate paste that will be used as a spread on cakes and bread. A large percentage of the composition of the spread is in the form of a lipid. Which of the following fatty acids would you choose to produce a paste that spreads very easily?

- A Lauric acid
- B Linoleic acid
- C Oleic acid
- D Palmitic acid

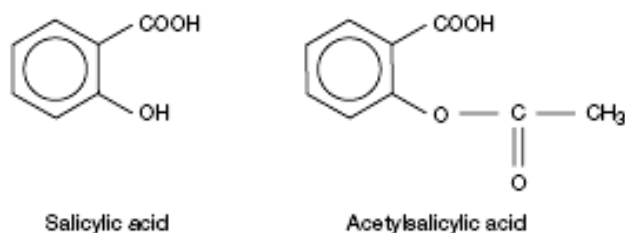
QUESTION 13

Which of the following statements regarding monosaccharides is incorrect?

- A The functional group in monosaccharides is the hydroxy group
- B Monosaccharides behave as weak reductants
- C Monosaccharides cannot be hydrolysed to produce smaller units
- D Monosaccharides can be oxidised to produce smaller units

The following information relates to Questions 14 and 15:

The structure of salicylic acid and acetyl salicylic acid are given below.



QUESTION 14

Which of the following reactants is required to convert salicylic acid into acetylsalicylic acid?

- A Water
- B Methanol
- C Ethanol
- D Ethanoic acid

QUESTION 15

Which technique could **not** be used to distinguish salicylic acid and acetylsalicylic acid?

- A Infra-red spectroscopy
- B Mass spectrometry
- C Atomic absorption spectroscopy
- D Carbon NMR spectroscopy

QUESTION 16

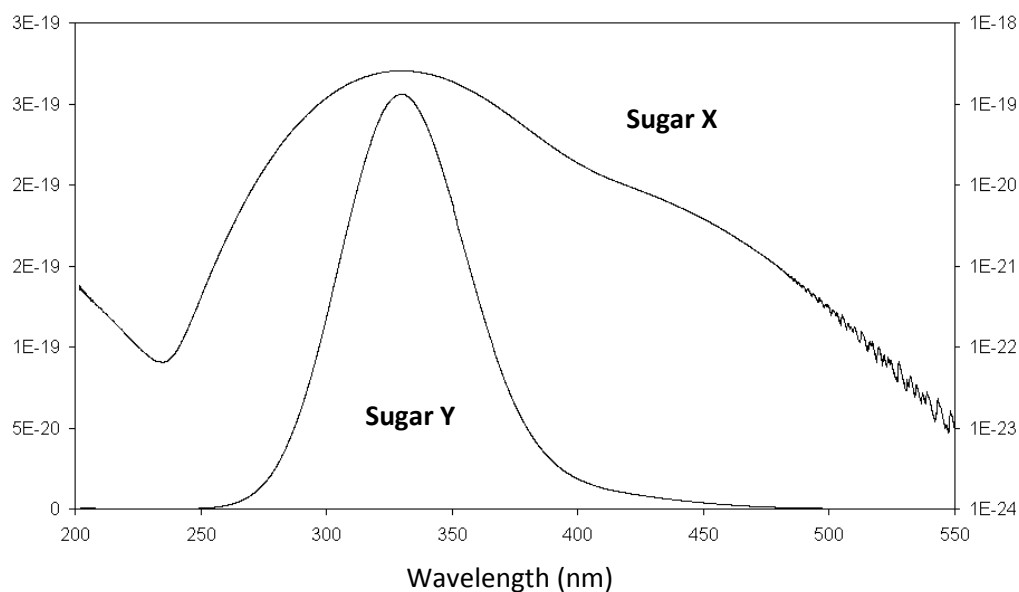
Which of the following statements relating to paper chromatography is incorrect?

- A R_f values increase as temperature increases.
- B Better resolution of sample components may be obtained by increasing the length of the chromatogram.
- C Components of a sample separate due to differences in their rates of absorption and desorption.
- D Paper chromatography may be used to separate components of mixtures.

QUESTION 17

The ultraviolet spectrum of two different sugars is given below.

Absorbance (Units)



Which wavelength would you select to measure the concentration of Sugar X without interference from Sugar Y?

- A 200 nm
- B 240 nm
- C 335 nm
- D 550 nm

QUESTION 18

The purpose of the electron beam in the mass spectrometer is to

- A separate particles based on charge.
- B separate particles based on mass.
- C accelerate ions in the electric field.
- D convert atoms into ions.

QUESTION 19

A compound introduced into a mass spectrometer gave a spectrum corresponding to fragments including CCl_3^+ , CCl_2F^+ , CCl_2^+ , CCl^+ and CF^+ . Which of the following is the most likely formula for the compound?

- A CCl_3F
- B CCl_2F_2
- C $CClF_3$
- D $CHClF_2$

QUESTION 20

Which of the following statements is incorrect?

- A The ^{12}C nucleus will undergo a measurable change in spin energy levels when exposed to radiation from the radio wave region of the electromagnetic spectrum.
- B There is insufficient energy in the radio wave radiation to cause bending and stretching in covalent bonds.
- C Energies corresponding to the visible spectrum are able to cause excitation of valence electrons in atoms and molecules.
- D Different functional groups in organic molecules absorb radiation of different frequencies from the infra-red region of the electromagnetic spectrum.

SECTION B – SHORT ANSWER QUESTIONS

Instructions For Section B

Answer all questions in the spaces provided.

To obtain full marks for your responses you should

- Give simplified answers with an appropriate number of significant figures for all numerical questions; unsimplified answers will not be given full marks.
- Show all working in your answers to numerical questions. No credit will be given for an incorrect answer unless it is accompanied by details of the working.
- Make sure that all chemical equations are balanced and that the formulas for individual substances include an indication of state (for example, $H_{2(g)}$; $NaCl_{(s)}$).

QUESTION 1

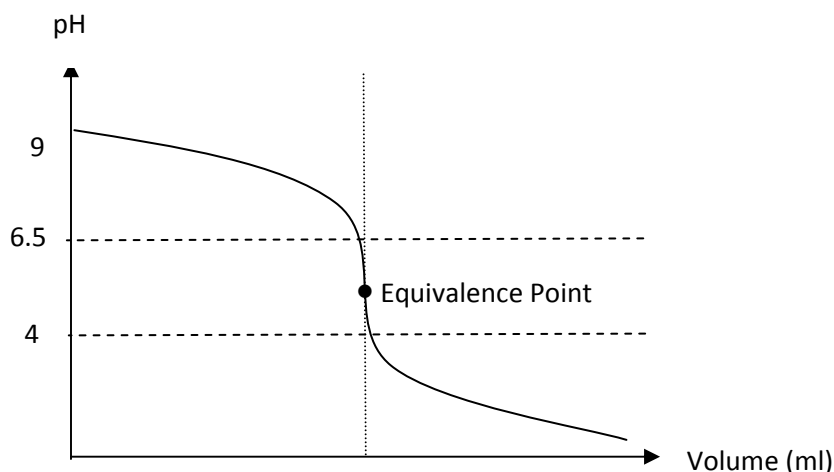
- a. 1.336 g of pure anhydrous Na_2CO_3 was dissolved in water and made up to 250.00 ml of solution in a volumetric flask. Calculate the concentration of this standard solution.

2 marks

- b. This standard Na_2CO_3 solution was used to standardise an approximately 0.1 M HCl solution. A 20.00 ml sample of the Na_2CO_3 solution required 19.02 ml of HCl for complete neutralisation. Calculate the concentration of HCl .

3 marks

c. The neutralisation curve for the titration used in **part b.** is given below.



(i) Name one indicator that could be used to accurately detect the equivalence point for the reaction in **part b.**

(ii) How would the calculated *HCl* concentration differ from that determined in part b. if phenolphthalein was used as the indicator for this reaction? Circle one option from the answers below.

Concentration will be lower than in part b.

Concentration will be higher than in part b.

Concentration will be the same as in part b.

(iii) Hydrated Na_2CO_3 is not a good primary standard because it is efflorescent i.e. it gives off water to the atmosphere. How would the calculated *HCl* concentration differ from that determined in part b. if hydrated Na_2CO_3 was used as the primary standard for this reaction? Circle one option from the answers below.

Concentration will be lower than in part b.

Concentration will be higher than in part b.

Concentration will be the same as in part b.

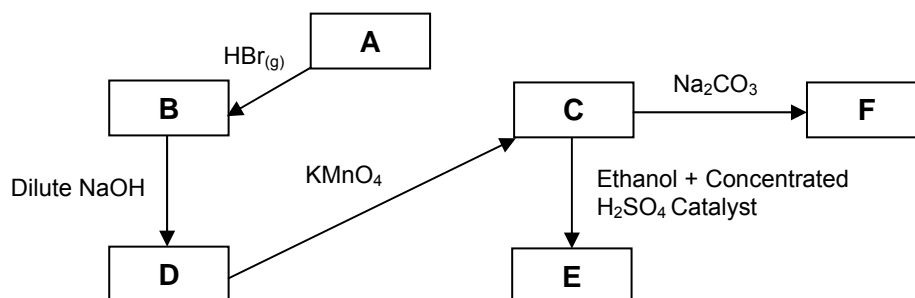
1+1+1 = 3 marks

QUESTION 2

Compound A is a hydrocarbon with molar mass 56 g/mol . It reacts with hydrogen bromide gas to produce 1 product only, Compound B.

Compound B reacts with a dilute solution of sodium hydroxide to form Compound D, which oxidises with potassium permanganate to form Compound C.

Compound C reacts with sodium carbonate to produce a salt (Compound F) and carbon dioxide. Compound C may also react with ethanol and sulfuric acid to produce a fruity smelling substance - Compound E.



a. Identify compounds:

A: _____

C: _____

E: _____

1+1+1 = 3 marks

b. Write semi-structural equations for the formation of:

(i) Compound B

(ii) Compound D

(iii) Compound F

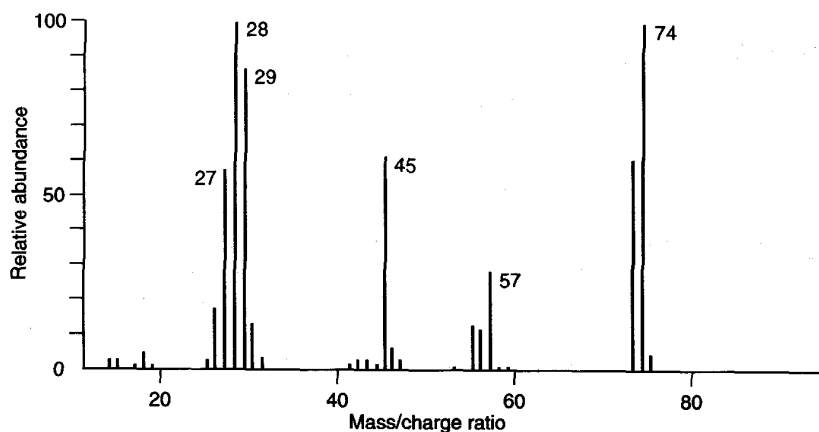
1+1+1 = 3 marks

Total 6 marks

QUESTION 3

Compound X is an organic molecule with empirical formula $C_3H_6O_2$. The infrared spectrum, mass spectrum and proton NMR spectrum for this compound are given below.

Mass Spectrum For Compound X



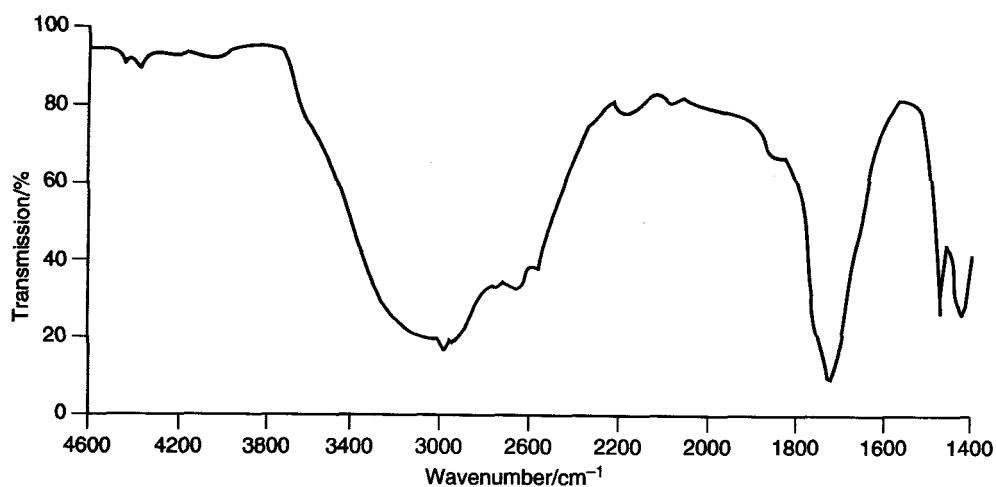
- a. (i) Give the formula of the component that produced the peak at mass/charge ratio 74.

- (ii) Account for the differences in structure for the components that produced the peaks at mass/charge ratio 74 and 75.

- (ii) Would an isomer of Compound X produce the same or different spectrum to that given above? Give a reason for your answer.

1+1+1 = 3 marks

Infra-Red Spectrum For Compound X

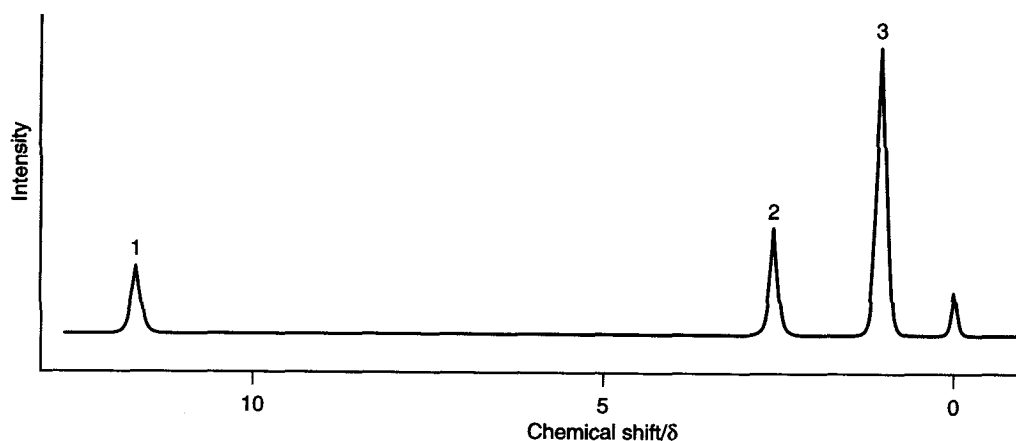


- b. (i) Use the spectrum above to indicate the family of organic compounds to which $C_3H_6O_2$ belongs. Give a reason to support your answer.

- (ii) Would an isomer of Compound X produce the same or different spectrum to that given above? Give a reason for your answer.

2+1 = 3 marks

Proton NMR Spectrum For Compound X



- c. (i) What is responsible for the peak at zero chemical shift?

- (ii) Use the spectrum above as well as the spectra from **a.** and **b.** to draw the structural formula of Compound X.

- (iii) Would an isomer of Compound X produce the same or different spectrum to that given above? Give a reason for your answer.

1+2+1= 4 marks

Total 10 marks

QUESTION 4

Various methods have been used over the years to determine the blood alcohol concentration in drivers of motor vehicles.

The earliest method for detecting ethanol in breath was based on a reaction between dichromate (VI) ions and ethanol to produce chromium (III) ions, which resulted in a colour change from orange to green if ethanol was present in breath.

- a. (i) Write a balanced half equation for the conversion of dichromate (VI) ions, $Cr_2O_7^{2-}$ into chromium (III) ions, Cr^{3+} in acid solution.

- (ii) Write a balanced half equation for the conversion of ethanol into its conjugate organic product.

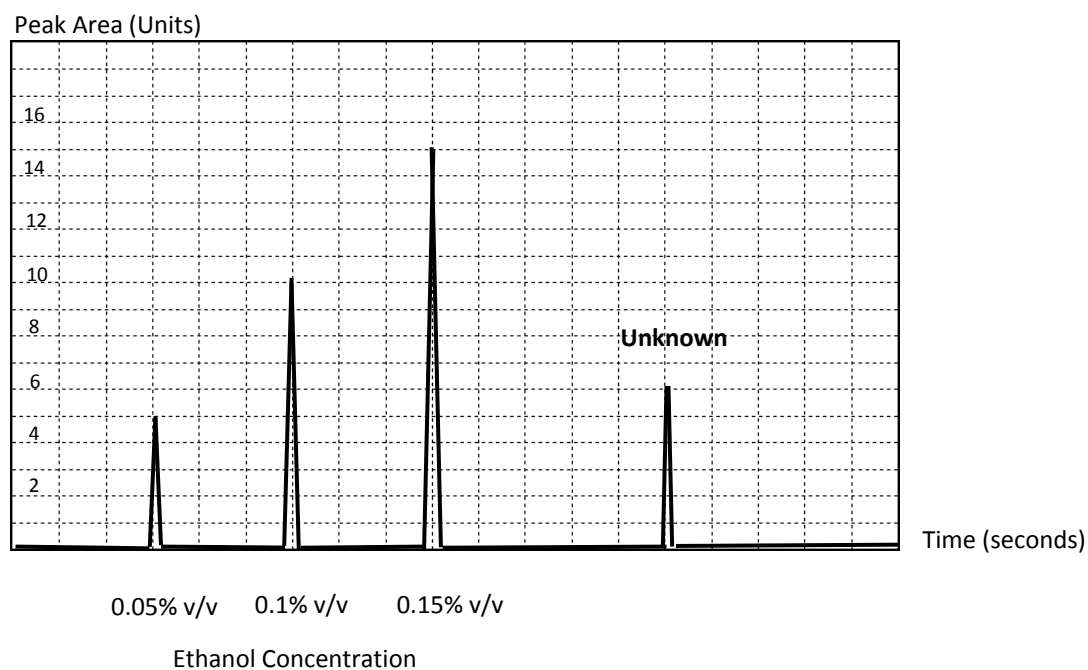
- (iii) Hence write an overall ionic equation for the reaction between dichromate (VI) ions and ethanol.

1+1+1 = 3 marks


If large quantities of alcohol are detected in the breath of motorists, accurate determinations of alcohol levels are often employed. This can be achieved by analysing blood or urine specimens by gas-liquid chromatography (GLC).

A series of standards of known ethanol concentration were injected into the GLC and their peak areas were determined from the chromatogram. Shortly after the standards were analysed, a sample of blood from a driver at an accident scene was analysed under identical conditions.

The chromatogram obtained is illustrated below.

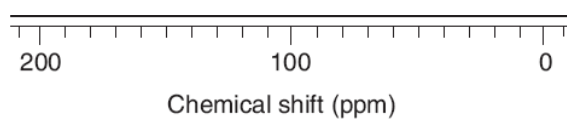


- b. (i) Plot a calibration curve of the concentration of ethanol as a function of peak area on the axes below.



- (ii) Determine the %v/v of alcohol in the blood of the motorist.

- c. Draw the spectrum you would expect to observe when ethanol is analysed using Carbon (¹³) NMR spectroscopy.



2 marks

Total 11 marks

QUESTION 5

Esters are commonly used as flavours in the food industry. A student decided to prepare an ester in a school laboratory.

- a. (i) Which chemicals from the list below would you use to prepare an ester?
Circle the appropriate choices.

Ethene

Butanoic acid

H_3PO_4

Methanol

Concentrated H_2SO_4

Glucose

$NaOH$

Ethane

Ethyl ethanoate

- (ii) Give the systematic name of the compound formed.

- (iii) Which of the following terms does NOT describe the reaction in (ii)?

- A esterification
- B condensation
- C polymerisation
- D dehydration

1+1+1 = 3 marks

- b. The ester formed must be distilled in order to isolate it as a pure substance.
Explain the meaning of the term “distillation” indicating how this process can be used to isolate your ester in pure form.

2 marks

c. Palmitic acid forms a component of an important biological ester referred to as a triglyceride.

(i) Draw the structural formula for the triglyceride that consists of palmitic acid chains.

(ii) Give an equation to represent the production of a biodiesel fuel from palmitic acid.

2+ 2 = 2 marks

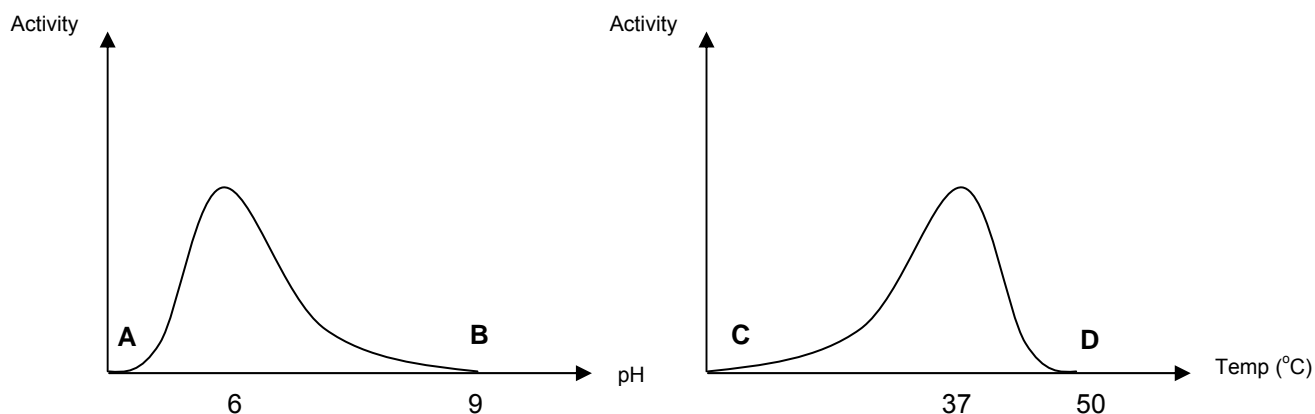
Total 9 marks

QUESTION 6

a. The graphs below illustrate the activity of an enzyme as a function of pH and temperature.

(i) In which regions on the graphs has protein denaturation occurred? Circle the appropriate answer(s) below.

A **B** **C** **D**



(ii) Explain why the catalytic function of an enzyme molecule is dependent on the way the molecule is folded.

1+2 = 3 marks

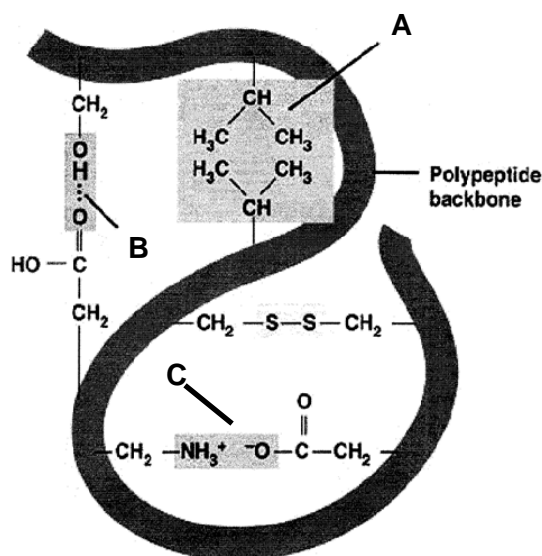
Enzymes are made from long chains of amino acids which join together via condensation reactions.

- b. (i) Write an equation to represent the condensation of alanine and proline to form the dipeptide Ala-Pro.

- (ii) Circle the functional group(s) in this dipeptide.

2 + 1 = 3 marks

- c. A polypeptide chain is illustrated below.



Name the bond and the level of protein structure (primary, secondary or tertiary) at:

(i) A: _____

(ii) B: _____

(iii) C: _____

1+ 1+1 = 3 marks

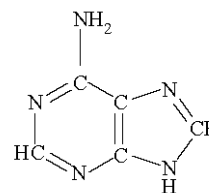
Total 9 marks

QUESTION 7

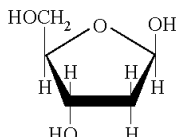
The following structures represent some biologically important molecules.



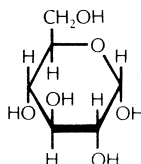
C



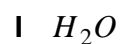
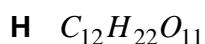
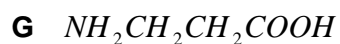
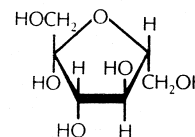
D



E



F



a. Circle the response(s) that best answer the questions below.

(i) Which molecule(s) could be used to form proteins in the human body?

A B C D E F G H I

(ii) Which structure(s) represent the product(s) of the hydrolysis of carbohydrates?

A B C D E F G H I

(iii) Which structure(s) represent the product(s) of the complete oxidation of fats?

A B C D E F G H I

(iv) Which structure would be covalently bonded to a phosphate unit in the DNA molecule?

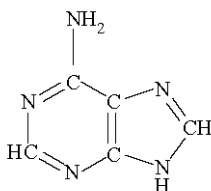
A B C D E F G H I

1+1+1+1 = 4 marks

- b. Molecule C forms a component of human DNA. This molecule forms specific bonds with another nitrogen containing compound on a complementary strand of DNA.

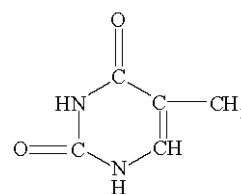
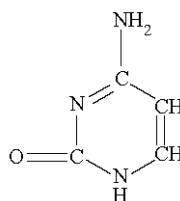
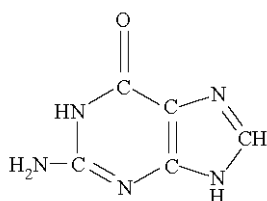
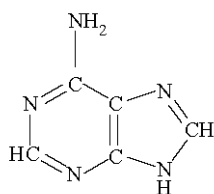
Molecule C

Circle the components directly involved in maintaining the secondary structure of DNA.



Complementary Base:

Identify the base which is complementary to Molecule C and circle the components of this molecule that are directly involved in maintaining the secondary structure of DNA with molecule C.

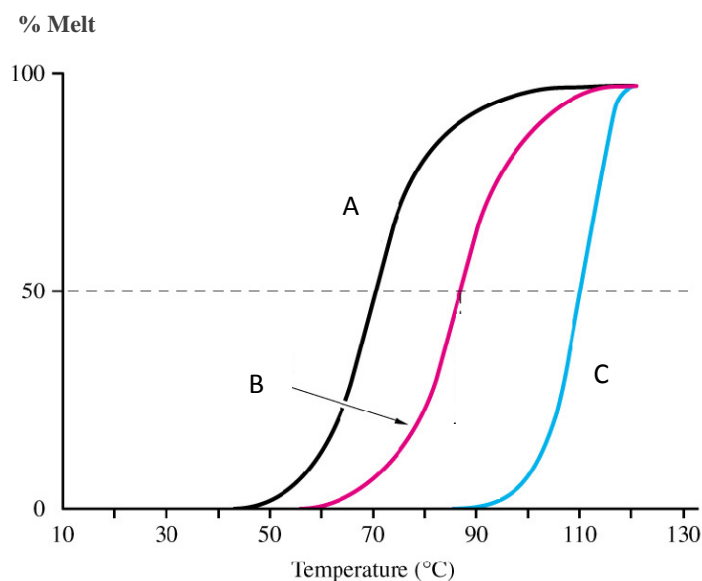


1+2 = 3 marks

- c. When double stranded DNA samples are heated, the strands separate in a process known as “melting”.

DNA melting is often used to detect sequence differences between different strands of DNA, as well as to obtain an indication of the relative amounts of each base in a DNA strand.

The % Melt for 3 different DNA strands at varying temperatures is given below. Assuming that the strands contain the same number of nucleotides, identify the curve (A, B or C below) that most likely represents the melt properties of a strand of DNA containing large amounts of Molecule C. Give a reason for your answer.



2 marks

Total 9 marks

End of Paper