



# Victorian Certificate of Education 2005

SUPERVISOR TO ATTACH PROCESSING LABEL HERE

## STUDENT NUMBER

Letter

Figures

Words


# CHEMISTRY

## Written examination 2

Friday 11 November 2005

Reading time: 9.00 am to 9.15 am (15 minutes)

Writing time: 9.15 am to 10.45 am (1 hour 30 minutes)

## QUESTION AND ANSWER BOOK

### Structure of book

Section	Number of questions	Number of questions to be answered	Number of marks	Suggested times (minutes)
A	20	20	20	27
B	9	9	60	63
			Total 80	90

- Students are permitted to bring into the examination room: pens, pencils, highlighters, erasers, sharpeners, rulers, an approved graphics calculator (memory cleared) and/or one scientific calculator.
- Students are NOT permitted to bring into the examination room: blank sheets of paper and/or white out liquid/tape.

### Materials supplied

- Question and answer book of 19 pages, with a detachable data sheet in the centrefold.
- Answer sheet for multiple-choice questions.

### Instructions

- Detach the data sheet from the centre of this book during reading time.
- Write your **student number** in the space provided above on this page.
- Check that your **name** and **student number** as printed on your answer sheet for multiple-choice questions are correct, **and** sign your name in the space provided to verify this.
- All written responses must be in English.

### At the end of the examination

- Place the answer sheet for multiple-choice questions inside the front cover of this book.

**Students are NOT permitted to bring mobile phones and/or any other unauthorised electronic devices into the examination room.**

**SECTION A – Multiple-choice questions****Instructions for Section A**

Answer **all** questions in pencil on the answer sheet provided for multiple-choice questions.

Choose the response that is **correct** or that **best answers** the question.

A correct answer scores 1, an incorrect answer scores 0.

Marks will **not** be deducted for incorrect answers.

No marks will be given if more than one answer is completed for any question.

**Question 1**

The trisaccharide formed from the reaction of three glucose ( $C_6H_{12}O_6$ ) molecules has the formula

- A.  $C_{18}H_{36}O_{18}$
- B.  $C_{18}H_{34}O_{17}$
- C.  $C_{18}H_{32}O_{16}$
- D.  $C_{18}H_{30}O_{15}$

**Question 2**

The reaction between a glycerol molecule and three long-chain carboxylic acid molecules is a

- A. condensation reaction and the product contains a  $\begin{array}{c} -C-O-C- \\ || \\ O \end{array}$  group.
- B. hydrolysis reaction and the product contains a  $\begin{array}{c} -C-O-C- \\ || \\ O \end{array}$  group.
- C. condensation reaction and the product contains a  $-C-O-O-C-$  group.
- D. hydrolysis reaction and the product contains a  $-C-O-O-C-$  group.

**Question 3**

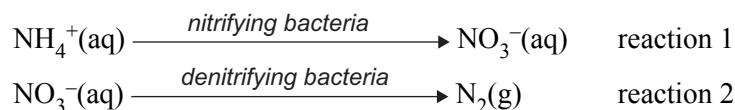
The substances below are present in the food we eat.

Which one provides the lowest amount of energy per gram for the human body?

- A. tristearin (a triglyceride)
- B. glycine (an amino acid)
- C. cellulose (a polysaccharide)
- D. glucose (a monosaccharide)

**Question 4**

Nitrifying and denitrifying bacteria play important roles in the nitrogen cycle. They are involved in the following reactions.

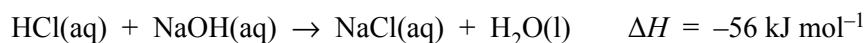


Which one of the following alternatives correctly describes both of these reactions?

- | <b>Reaction 1</b>    | <b>Reaction 2</b> |
|----------------------|-------------------|
| A. nitrogen fixation | oxidation         |
| B. oxidation         | nitrogen fixation |
| C. nitrogen fixation | reduction         |
| D. oxidation         | reduction         |

**Question 5**

The reaction between solutions of hydrochloric acid and sodium hydroxide can be represented by the following equation.



60.0 mL of 2.0 M HCl, at 21°C, is mixed with 40.0 mL of 2.0 M NaOH, also at 21°C, in a well-insulated calorimeter. The calibration factor for the calorimeter and contents is 420 J K<sup>-1</sup>.

The final temperature, in °C, of the resultant solution in the calorimeter would be closest to

- A. 11
- B. 32
- C. 37
- D. 52

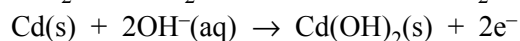
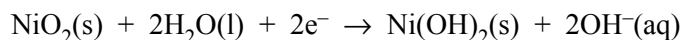
**Question 6**

Which one of the following would be predicted to spontaneously oxidise aqueous iodide ions but not aqueous chloride ions?

- A. Au<sup>+</sup>(aq)
- B. Sn<sup>2+</sup>(aq)
- C. Fe<sup>2+</sup>(aq)
- D. Br<sub>2</sub>(aq)

**Question 7**

The rechargeable nickel-cadmium cell is used to power small appliances such as portable computers. When the cell is being used, the electrode reactions are represented by the following equations.



Which of the following occurs during the **recharging** of the nickel-cadmium cell?

- I cadmium is deposited on the negative electrode
  - II the pH of the electrolyte increases
  - III the direction of electron flow in the external circuit is from the anode to the cathode
- A. I only  
B. I and II only  
C. II and III only  
D. I and III only

**Question 8**

A galvanic cell consists of one half cell that is made up of an inert graphite electrode in a solution containing 1.0 M  $\text{Fe}^{2+}(\text{aq})$  and 1.0 M  $\text{Fe}^{3+}(\text{aq})$  at 25°C.

Which one of the following could be used as the second half cell so that the polarity of the electrode in this second half cell is positive?

- A. a lead electrode in a solution of 1.0 M  $\text{Pb}^{2+}(\text{aq})$
- B. a silver electrode in a solution of 1.0 M  $\text{Ag}^+(\text{aq})$
- C. an iron electrode in a solution of 1.0 M  $\text{Fe}^{2+}(\text{aq})$
- D. an inert graphite electrode in a solution of 1.0 M  $\text{Br}^-(\text{aq})$

*Questions 9 to 11 refer to the following information.*

A copper disc is to be silver-plated in an electrolytic cell. The disc forms one electrode and a silver rod the other electrode. The electrolyte provides a source of  $\text{Ag}^+(\text{aq})$ .

**Question 9**

The disc to be plated is connected to the

- A. positive terminal of a battery so that oxidation occurs at the disc.
- B. positive terminal of a battery so that reduction occurs at the disc.
- C. negative terminal of a battery so that oxidation occurs at the disc.
- D. negative terminal of a battery so that reduction occurs at the disc.

**Question 10**

The mass of silver to be deposited is 0.150 g.

If the current is held steady at 1.50 amps, the time, in seconds, that it takes to complete the plating is closest to

- A. 90
- B. 180
- C. 200
- D. 360

**Question 11**

An identical disc is to be gold-plated with a solution containing  $\text{Au}^{3+}(\text{aq})$  as the electrolyte using a current of 1.50 amps.

The ratio of the time that is needed to plate the disc with 0.150 g of gold to the time needed to plate the disc with 0.150 g of silver is closest to

- A. 1 to 3
- B. 1 to 1.6
- C. 1.6 to 1
- D. 3 to 1

**Question 12**

An electrolytic cell is used commercially to extract aluminium from its ore. The anode and cathode of this electrolytic cell are composed of

- | <b>anode</b> | <b>cathode</b> |
|--------------|----------------|
| A. carbon    | carbon         |
| B. carbon    | iron           |
| C. iron      | carbon         |
| D. iron      | iron           |

**Question 13**

In which one of the following processes will the  $\Delta H$  have the opposite sign to that of the other three?

- A.  $\text{I}_2(\text{s}) \rightarrow \text{I}_2(\text{g})$
- B.  $\text{Na}^+(\text{g}) + \text{e}^-(\text{g}) \rightarrow \text{Na}(\text{g})$
- C.  $\text{CO}_2(\text{g}) \rightarrow \text{C}(\text{s}) + \text{O}_2(\text{g})$
- D.  $2\text{NaCl}(\text{l}) \rightarrow 2\text{Na}(\text{l}) + \text{Cl}_2(\text{g})$

**Question 14**

Element X has an atomic radius that is smaller than that of sulfur. In chemical reactions, element X commonly forms an ion that has the same electron configuration as the  $\text{Sc}^{3+}$  ion.

Element X could be

- A. oxygen.
- B. chlorine.
- C. argon.
- D. potassium.

**Question 15**

In which one of the following sets of chromium-containing compounds do the chromium atoms all have the same oxidation number?

- |                              |                                   |                                   |
|------------------------------|-----------------------------------|-----------------------------------|
| A. $\text{Cr}_2\text{O}_3$   | $\text{K}_2\text{Cr}_2\text{O}_7$ | $\text{Na}_2\text{CrO}_4$         |
| B. $\text{CrCl}_2$           | $\text{Cr}_2\text{O}_3$           | $\text{K}_2\text{Cr}_2\text{O}_7$ |
| C. $\text{Cr}_2\text{O}_3$   | $\text{CrCl}_3$                   | $\text{Cr}(\text{NO}_3)_3$        |
| D. $\text{Na}_2\text{CrO}_4$ | $\text{CrO}_3$                    | $\text{Cr}(\text{NO}_3)_3$        |

**Question 16**

Sodium and chlorine are both in Period 3.

You would expect sodium to have

- A. the lower ionisation energy and the lower electronegativity.
- B. the higher ionisation energy and the lower electronegativity.
- C. the lower ionisation energy and the higher electronegativity.
- D. the higher ionisation energy and the higher electronegativity.

**Question 17**

The noble gases (helium to radon) have an outer shell electron configuration of

- A.  $s^2$
- B.  $s^2p^6$
- C. either  $s^2$  or  $s^2p^6$
- D. either  $s^2p^6$  or  $s^2p^6d^{10}$

**Question 18**

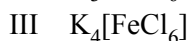
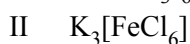
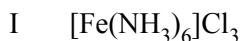
Potassium has a radioactive isotope,  $^{40}\text{K}$ . One of the ways this isotope disintegrates leads to the emission of a beta particle (an electron) by the  $^{40}\text{K}$  nucleus.

The new nucleus produced by this disintegration is

- A.  $^{40}\text{K}^+$
- B.  $^{41}\text{K}$
- C.  $^{40}\text{Ar}$
- D.  $^{40}\text{Ca}$

**Question 19**

Consider the following three compounds which contain complex ions that involve iron



The oxidation state of the iron in each of these compounds is

- |    | I  | II | III |
|----|----|----|-----|
| A. | +3 | -3 | -2  |
| B. | +3 | +3 | +2  |
| C. | +6 | +6 | +6  |
| D. | +3 | -3 | -4  |

**Question 20**

Which one of the following is **least likely** to act as a ligand with  $\text{Fe}^{3+}$  ions?

- A.  $\text{F}^-$
- B.  $\text{CN}^-$
- C.  $\text{H}_2\text{O}$
- D.  $\text{NH}_4^+$

**SECTION B – Short-answer questions****Instructions for Section B**

Answer **all** questions in the spaces provided.

To obtain full marks for your responses you should

- give simplified answers with an appropriate number of significant figures to all numerical questions; unsimplified answers will not be given full marks.
- show all working in your answers to numerical questions. No credit will be given for an incorrect answer unless it is accompanied by details of the working.
- make sure chemical equations are balanced and that the formulas for individual substances include an indication of state; for example,  $\text{H}_2(\text{g})$ ;  $\text{NaCl}(\text{s})$

**Question 1**

From the following list of elements

Li	Be	B	C	N	O	F
Na	Mg	Al	Si	P	S	Cl

give the symbol or name for

- the most electronegative element \_\_\_\_\_
- the element that commonly forms an ion which has an electron configuration of  $1s^2 2s^2 2p^6$  and a  $-2$  charge \_\_\_\_\_
- an element that forms an amphoteric oxide \_\_\_\_\_
- an element X that forms oxides with the formula XO and  $\text{XO}_2$  \_\_\_\_\_
- an element that is found in proteins but **not** in carbohydrates \_\_\_\_\_

Total 5 marks

**Question 2**

Magnesium has three naturally occurring isotopes. Their relative abundances and masses are given in the table below.

	<b>Percentage abundance</b>	<b>Relative isotopic mass</b>
$^{24}\text{Mg}$	78.99	23.985
$^{25}\text{Mg}$	10.00	24.986
$^{26}\text{Mg}$	11.01	25.983

- a. The abundances and relative isotopic masses have been determined experimentally. What instrument is commonly used to obtain this information?

---

1 mark

- b. Using the information above, show how the relative atomic mass of magnesium can be determined. Calculate your answer to an appropriate number of significant figures.

---

---

---

---

---

---

---

---

3 marks



c. Calcium is in the same group of the periodic table as magnesium.

i. Explain why Mendeleev would have placed these two elements in the same vertical group.

---

---

ii. The electronegativity of magnesium (1.31) is greater than that of calcium (1.00). Give a brief explanation for this difference.

---

---

---

iii. Write the electron configuration, in terms of shells and subshells, for the calcium atom.

---

iv. Write the electron configuration, in terms of shells and subshells, for the  $\text{Ca}^{2+}$  ion.

---

v. The radius of the calcium atom is  $1.97 \times 10^{-10}$  m.

The radius of the  $\text{Ca}^{2+}$  ion is  $9.9 \times 10^{-11}$  m.

Explain why the calcium atom is significantly larger than the  $\text{Ca}^{2+}$  ion.

---

---

---

1 + 2 + 1 + 1 + 1 = 6 marks

Total 10 marks

**Question 3**

- a. Coke, which is essentially pure carbon, is widely used as a fuel. Its complete combustion can be represented by the following equation.



However, under certain conditions, the combustion is incomplete and the following reaction also occurs.



Calculate the energy, in kJ, released when 2.00 tonne (1 tonne =  $10^6$  gram) of coke is reacted with oxygen if 80% of the coke is oxidised to carbon dioxide and the remaining 20% is oxidised to carbon monoxide.

---

---

---

---

---

---

---

---

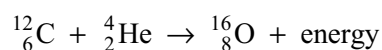
---

---

---

4 marks

- b. Carbon is also a reactant in nuclear fusion reactions in some stars. One such reaction can be represented by the following equation.



For a given amount of carbon, significantly more energy is released in nuclear fusion reactions than in chemical reactions.

- i. What is the source of the energy released in this nuclear fusion reaction?

---

---

- ii. Why is nuclear fusion **not** currently used as an energy source in our society?

---

---

1 + 1 = 2 marks

c. Consider the following list of forms of energy.

chemical      electrical      mechanical      nuclear      solar      thermal

In a coal-fired power station, the energy released from the combustion of coal undergoes several energy conversions before electricity is generated.

i. Using the forms of energy listed above, complete the energy conversions that occur in the following stages of a coal-fired power station. (The same form of energy may be used more than once.)

Coal is oxidised to generate steam \_\_\_\_\_ energy to \_\_\_\_\_ energy

Steam is used to drive a turbine \_\_\_\_\_ energy to \_\_\_\_\_ energy

The turbine drives a generator \_\_\_\_\_ energy to \_\_\_\_\_ energy

ii. The amount of electrical energy obtained in a coal-fired power station is generally less than half of the available energy in the coal. What happens to the rest of the energy released when the coal is burnt?

---

---

3 + 1 = 4 marks

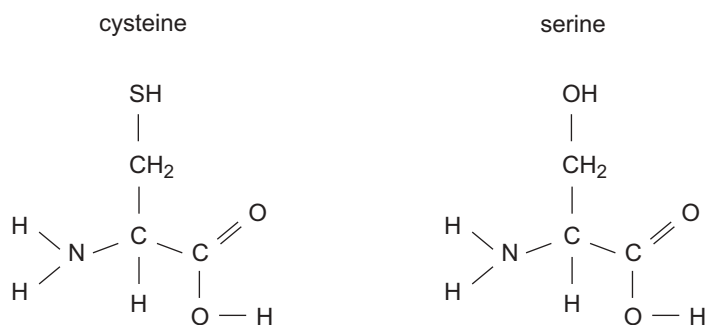
Total 10 marks

**CONTINUED OVER PAGE**

**SECTION B – continued  
TURN OVER**

**Question 4**

- a. Two common  $\alpha$  amino acids (2-amino acids) are cysteine and serine. Their structural formulas are given below.



- i. What chemical feature must an amino acid have in order to be classified as an  $\alpha$  amino acid?

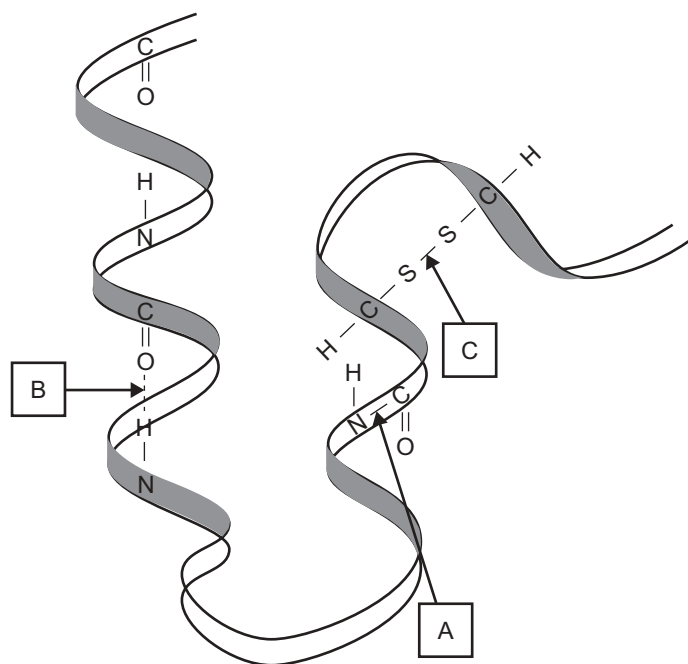
---

---

- ii. Cysteine and serine can combine together to form **two** different dipeptides. Draw the structural formulas of these two dipeptides.

1 + 2 = 3 marks

- b. Enzymes, which are composed mostly of protein, catalyse many chemical reactions. The structure of a portion of an enzyme, with some of its constituent atoms shown, is represented below.



- i. Name the type of chemical bond present in the parts labelled.

A \_\_\_\_\_

B \_\_\_\_\_

C \_\_\_\_\_

- ii. Why is the tertiary structure of an enzyme essential to its function?

---



---



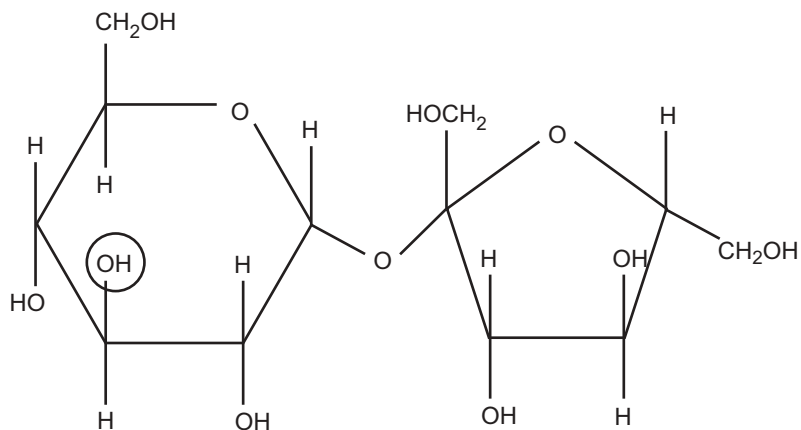
---

3 + 1 = 4 marks

Total 7 marks

**Question 5**

Sucrose is a disaccharide. Bees use an invertase enzyme to convert sucrose to an equimolar mixture of glucose and fructose. The structural formula of sucrose is given below and one of the functional groups in the molecule has been circled.



- a. i. Give the name of the functional group circled in the structural formula of sucrose.
- \_\_\_\_\_
- ii. To which of the major food groups does sucrose belong? \_\_\_\_\_
- iii. Given that glucose has a six-membered ring structure, draw the structural formula of glucose.

3 marks

- b. What simple molecule is the other reactant in the conversion of sucrose to glucose and fructose?
- \_\_\_\_\_

1 mark

- c. The invertase enzyme can be isolated and used in the laboratory to form glucose and fructose from sucrose. In a particular set of experiments, equivalent amounts of the enzyme were mixed with three sucrose solutions of equal concentrations. One of the solutions was kept at 5°C throughout the experiment, one at 35°C and the last at 95°C.

The following gives the percentage yield of glucose after 30 minutes.

Temperature at which the experiment was carried out	Percentage yield of glucose
5°C	10
35°C	95
95°C	2

Explain why the percentage yield is higher at 35°C than at

- i. 5°C

---

---

---

- ii. 95°C

---

---

---

2 marks

Total 6 marks

**Question 6**

Give concise explanations for each of the following.

- a. Food chemists quote the energy content of food in  $\text{kJ g}^{-1}$ , rather than  $\text{kJ mol}^{-1}$ .

---

---

---

1 mark

- b. Hydrogen gas is bubbled through a solution of  $1.0 \text{ M Fe}^{3+}(\text{aq})$  ions. On the basis of the electrochemical series, a redox reaction is predicted to occur. In practice, no reaction occurs at room temperature.

---

---

---

1 mark

- c. The oxidation state of iron, in its compounds, is normally either +2 or +3, whereas that of calcium, in its compounds, is +2 only.

---

---

---

---

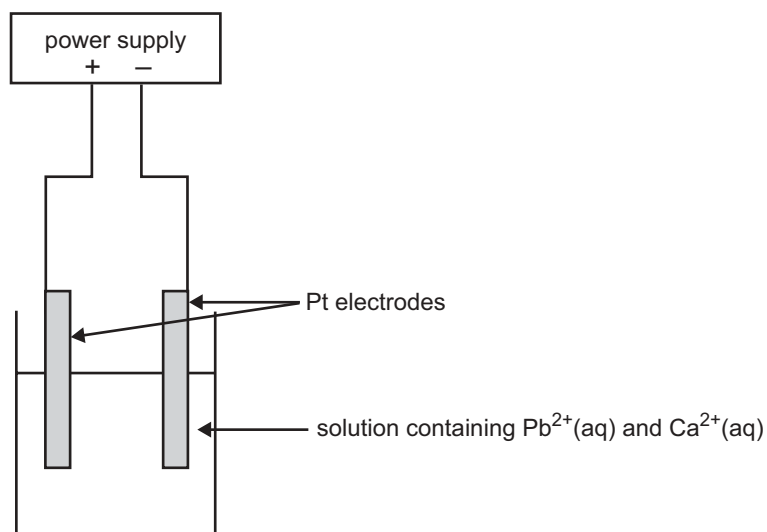
2 marks

Total 4 marks



**Question 7**

A mineral ore contains a mixture of compounds of lead and calcium, in approximately equal proportions. A chemist extracts the metal ions by roasting the ore in air and treating the product with acid. The solution that contains the  $\text{Pb}^{2+}(\text{aq})$  and  $\text{Ca}^{2+}(\text{aq})$  is then placed in an electrolytic cell as shown in the diagram below.



- a. Label the anode and cathode of the cell.

1 mark

- b. When the current begins to flow in the cell, write equations for the half reaction that is likely to occur at the

- positive electrode

---

- negative electrode

---

2 marks

- c. After some time has elapsed, a new half reaction occurs at one of the electrodes. Write the equation for this half reaction.

---



---

1 mark

- d. If the chemist had used copper electrodes instead of platinum electrodes, how would this have affected the half reaction at the anode?

---



---

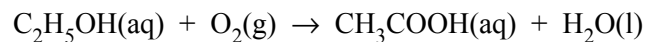
1 mark

Total 5 marks

**Question 8**

One type of ‘breathalyser’ instrument used by police for the measurement of the concentration of alcohol in a driver’s breath is a fuel cell. An acidic electrolyte is used. Ethanol is oxidised to ethanoic acid at one electrode and oxygen from the air is converted to water at the other.

The overall equation for this reaction is



- a. Write the equation for the half reaction at the anode.

---

---

2 marks

- b. A motorist who has consumed alcohol blows into the fuel cell. If the breath entering the cell provides alcohol at the rate of  $3.0 \times 10^{-5}$  g per second, calculate the maximum current, in amps, that the cell would produce.

---

---

---

---

3 marks

- c. The nature of the electrodes in the cell is essential to the effective operation of the breathalyser. State **two** important functions that the electrodes must perform.

Function 1 \_\_\_\_\_

Function 2 \_\_\_\_\_

2 marks

Total 7 marks

**Question 9**

Give balanced equations for the following reactions.

- a. The complete oxidation of glucose ( $C_6H_{12}O_6$ ) in plant and animal cells.

---

---

2 marks

- b. The formation of helium by nuclear reaction in the sun.

---

---

1 mark

- c. The reaction between ammonia and sulfuric acid to form ammonium sulfate fertiliser.

---

---

1 mark

- d. The reaction of an oxide of sulfur with aqueous sodium hydroxide.

---

---

2 marks

Total 6 marks

# **CHEMISTRY**

## **Written examination 2**

### **DATA SHEET**

#### **Directions to students**

Detach this data sheet during reading time.

This data sheet is provided for your reference.

**Physical constants**

$$F = 96\,500 \text{ C mol}^{-1}$$

$$R = 8.31 \text{ J K}^{-1} \text{ mol}^{-1}$$

$$1 \text{ atm} = 101\,325 \text{ Pa} = 760 \text{ mmHg}$$

$$0^\circ\text{C} = 273 \text{ K}$$

$$\text{Molar volume at STP} = 22.4 \text{ L mol}^{-1}$$

$$\text{Avogadro constant} = 6.02 \times 10^{23} \text{ mol}^{-1}$$

**Ideal gas equation**

$$pV = nRT$$

**The electrochemical series**

	$E^\circ$ in volt
$\text{F}_2(\text{g}) + 2\text{e}^- \rightarrow 2\text{F}^-(\text{aq})$	+2.87
$\text{H}_2\text{O}_2(\text{aq}) + 2\text{H}^+(\text{aq}) + 2\text{e}^- \rightarrow 2\text{H}_2\text{O}(\text{l})$	+1.77
$\text{Au}^+(\text{aq}) + \text{e}^- \rightarrow \text{Au}(\text{s})$	+1.68
$\text{Cl}_2(\text{g}) + 2\text{e}^- \rightarrow 2\text{Cl}^-(\text{aq})$	+1.36
$\text{O}_2(\text{g}) + 4\text{H}^+(\text{aq}) + 4\text{e}^- \rightarrow 2\text{H}_2\text{O}(\text{l})$	+1.23
$\text{Br}_2(\text{l}) + 2\text{e}^- \rightarrow 2\text{Br}^-(\text{aq})$	+1.09
$\text{Ag}^+(\text{aq}) + \text{e}^- \rightarrow \text{Ag}(\text{s})$	+0.80
$\text{Fe}^{3+}(\text{aq}) + \text{e}^- \rightarrow \text{Fe}^{2+}(\text{aq})$	+0.77
$\text{I}_2(\text{s}) + 2\text{e}^- \rightarrow 2\text{I}^-(\text{aq})$	+0.54
$\text{O}_2(\text{g}) + 2\text{H}_2\text{O}(\text{l}) + 4\text{e}^- \rightarrow 4\text{OH}^-(\text{aq})$	+0.40
$\text{Cu}^{2+}(\text{aq}) + 2\text{e}^- \rightarrow \text{Cu}(\text{s})$	+0.34
$\text{S}(\text{s}) + 2\text{H}^+(\text{aq}) + 2\text{e}^- \rightarrow \text{H}_2\text{S}(\text{g})$	+0.14
$2\text{H}^+(\text{aq}) + 2\text{e}^- \rightarrow \text{H}_2(\text{g})$	0.00
$\text{Pb}^{2+}(\text{aq}) + 2\text{e}^- \rightarrow \text{Pb}(\text{s})$	-0.13
$\text{Sn}^{2+}(\text{aq}) + 2\text{e}^- \rightarrow \text{Sn}(\text{s})$	-0.14
$\text{Ni}^{2+}(\text{aq}) + 2\text{e}^- \rightarrow \text{Ni}(\text{s})$	-0.23
$\text{Co}^{2+}(\text{aq}) + 2\text{e}^- \rightarrow \text{Co}(\text{s})$	-0.28
$\text{Fe}^{2+}(\text{aq}) + 2\text{e}^- \rightarrow \text{Fe}(\text{s})$	-0.44
$\text{Zn}^{2+}(\text{aq}) + 2\text{e}^- \rightarrow \text{Zn}(\text{s})$	-0.76
$2\text{H}_2\text{O}(\text{l}) + 2\text{e}^- \rightarrow \text{H}_2(\text{g}) + 2\text{OH}^-(\text{aq})$	-0.83
$\text{Mn}^{2+}(\text{aq}) + 2\text{e}^- \rightarrow \text{Mn}(\text{s})$	-1.03
$\text{Al}^{3+}(\text{aq}) + 3\text{e}^- \rightarrow \text{Al}(\text{s})$	-1.67
$\text{Mg}^{2+}(\text{aq}) + 2\text{e}^- \rightarrow \text{Mg}(\text{s})$	-2.34
$\text{Na}^+(\text{aq}) + \text{e}^- \rightarrow \text{Na}(\text{s})$	-2.71
$\text{Ca}^{2+}(\text{aq}) + 2\text{e}^- \rightarrow \text{Ca}(\text{s})$	-2.87
$\text{K}^+(\text{aq}) + \text{e}^- \rightarrow \text{K}(\text{s})$	-2.93
$\text{Li}^+(\text{aq}) + \text{e}^- \rightarrow \text{Li}(\text{s})$	-3.02

## Periodic table of the elements

<b>1</b> <b>H</b> 1.0																	<b>2</b> <b>He</b> 4.0
<b>3</b> <b>Li</b> 6.9	<b>4</b> <b>Be</b> 9.0											<b>5</b> <b>B</b> 10.8	<b>6</b> <b>C</b> 12.0	<b>7</b> <b>N</b> 14.0	<b>8</b> <b>O</b> 16.0	<b>9</b> <b>F</b> 19.0	<b>10</b> <b>Ne</b> 20.1
<b>11</b> <b>Na</b> 23.0	<b>12</b> <b>Mg</b> 24.3											<b>13</b> <b>Al</b> 27.0	<b>14</b> <b>Si</b> 28.1	<b>15</b> <b>P</b> 31.0	<b>16</b> <b>S</b> 32.1	<b>17</b> <b>Cl</b> 35.5	<b>18</b> <b>Ar</b> 39.9
<b>19</b> <b>K</b> 39.1	<b>20</b> <b>Ca</b> 40.1	<b>21</b> <b>Sc</b> 44.9	<b>22</b> <b>Ti</b> 47.9	<b>23</b> <b>V</b> 50.9	<b>24</b> <b>Cr</b> 52.0	<b>25</b> <b>Mn</b> 54.9	<b>26</b> <b>Fe</b> 55.9	<b>27</b> <b>Co</b> 58.9	<b>28</b> <b>Ni</b> 58.7	<b>29</b> <b>Cu</b> 63.6	<b>30</b> <b>Zn</b> 65.4	<b>31</b> <b>Ga</b> 69.7	<b>32</b> <b>Ge</b> 72.6	<b>33</b> <b>As</b> 74.9	<b>34</b> <b>Se</b> 79.0	<b>35</b> <b>Br</b> 79.9	<b>36</b> <b>Kr</b> 83.8
<b>37</b> <b>Rb</b> 85.5	<b>38</b> <b>Sr</b> 87.6	<b>39</b> <b>Y</b> 88.9	<b>40</b> <b>Zr</b> 91.2	<b>41</b> <b>Nb</b> 92.9	<b>42</b> <b>Mo</b> 95.9	<b>43</b> <b>Tc</b> 98.1	<b>44</b> <b>Ru</b> 101.1	<b>45</b> <b>Rh</b> 102.9	<b>46</b> <b>Pd</b> 106.4	<b>47</b> <b>Ag</b> 107.9	<b>48</b> <b>Cd</b> 112.4	<b>49</b> <b>In</b> 114.8	<b>50</b> <b>Sn</b> 118.7	<b>51</b> <b>Sb</b> 121.8	<b>52</b> <b>Te</b> 127.6	<b>53</b> <b>I</b> 126.9	<b>54</b> <b>Xe</b> 131.3
<b>55</b> <b>Cs</b> 132.9	<b>56</b> <b>Ba</b> 137.3	<b>57</b> <b>La</b> 138.9	<b>72</b> <b>Hf</b> 178.5	<b>73</b> <b>Ta</b> 180.9	<b>74</b> <b>W</b> 183.8	<b>75</b> <b>Re</b> 186.2	<b>76</b> <b>Os</b> 190.2	<b>77</b> <b>Ir</b> 192.2	<b>78</b> <b>Pt</b> 197.0	<b>79</b> <b>Au</b> 197.0	<b>80</b> <b>Hg</b> 200.6	<b>81</b> <b>Tl</b> 204.4	<b>82</b> <b>Pb</b> 207.2	<b>83</b> <b>Bi</b> 209.0	<b>84</b> <b>Po</b> (209)	<b>85</b> <b>At</b> (210)	<b>86</b> <b>Rn</b> (222)
<b>87</b> <b>Fr</b> (223)	<b>88</b> <b>Ra</b> (226)	<b>89</b> <b>Ac</b> (227)	<b>104</b> <b>Rf</b> (261)	<b>105</b> <b>Db</b> (262)	<b>106</b> <b>Sg</b> (263)	<b>107</b> <b>Bh</b> (264)	<b>108</b> <b>Hs</b> (265)	<b>109</b> <b>Mt</b> (268)	<b>110</b> <b>Uun</b>	<b>111</b> <b>Uuu</b>	<b>112</b> <b>Uub</b>		<b>114</b> <b>Uuq</b>		<b>116</b> <b>Uuh</b>		<b>118</b> <b>Uuo</b>

<b>58</b> <b>Ce</b> 140.1	<b>59</b> <b>Pr</b> 140.9	<b>60</b> <b>Nd</b> 144.2	<b>61</b> <b>Pm</b> (145)	<b>62</b> <b>Sm</b> 150.3	<b>63</b> <b>Eu</b> 152.0	<b>64</b> <b>Gd</b> 157.2	<b>65</b> <b>Tb</b> 158.9	<b>66</b> <b>Dy</b> 162.5	<b>67</b> <b>Ho</b> 164.9	<b>68</b> <b>Er</b> 167.3	<b>69</b> <b>Tm</b> 168.9	<b>70</b> <b>Yb</b> 173.0	<b>71</b> <b>Lu</b> 175.0
---------------------------------	---------------------------------	---------------------------------	---------------------------------	---------------------------------	---------------------------------	---------------------------------	---------------------------------	---------------------------------	---------------------------------	---------------------------------	---------------------------------	---------------------------------	---------------------------------

<b>90</b> <b>Th</b> 232.0	<b>91</b> <b>Pa</b> 231.0	<b>92</b> <b>U</b> 238.0	<b>93</b> <b>Np</b> 237.1	<b>94</b> <b>Pu</b> (244)	<b>95</b> <b>Am</b> (243)	<b>96</b> <b>Cm</b> (247)	<b>97</b> <b>Bk</b> (247)	<b>98</b> <b>Cf</b> (251)	<b>99</b> <b>Es</b> (254)	<b>100</b> <b>Fm</b> (257)	<b>101</b> <b>Md</b> (258)	<b>102</b> <b>No</b> (259)	<b>103</b> <b>Lr</b> (260)
---------------------------------	---------------------------------	--------------------------------	---------------------------------	---------------------------------	---------------------------------	---------------------------------	---------------------------------	---------------------------------	---------------------------------	----------------------------------	----------------------------------	----------------------------------	----------------------------------

END OF DATA SHEET