



Trial Examination 2023

Question and Response Booklet

QCE Specialist Mathematics Units 3&4

Paper 1 – Technology-free

Student's Name: _____

Teacher's Name: _____

Time allowed

- Perusal time – 5 minutes
- Working time – 90 minutes

General instructions

- Answer all questions in this question and response booklet.
- Calculators are **not** permitted.
- Formula booklet provided.
- Planning paper will not be marked.

Section 1 (10 marks)

- 10 multiple choice questions

Section 2 (50 marks)

- 9 short response questions

Students are advised that this is a trial examination only and cannot in any way guarantee the content or the format of the 2023 QCE Specialist Mathematics Units 3&4 Written Examination.

Neap[®] Education (Neap) Trial Exams are licensed to be photocopied or placed on the school intranet and used only within the confines of the school purchasing them, for the purpose of examining that school's students only for a period of 12 months from the date of receiving them. They may not be otherwise reproduced or distributed. The copyright of Neap Trial Exams remains with Neap. No Neap Trial Exam or any part thereof is to be issued or passed on by any person to any party inclusive of other schools, non-practising teachers, coaching colleges, tutors, parents, students, publishing agencies or websites without the express written consent of Neap.

SECTION 1

Instructions

- Choose the best answer for Questions 1–10.
- This section has 10 questions and is worth 10 marks.
- Use a 2B pencil to fill in the A, B, C or D answer bubble completely.
- If you change your mind or make a mistake, use an eraser to remove your response and fill in the new answer bubble completely.

	A	B	C	D
Example:	<input checked="" type="radio"/>	<input type="radio"/>	<input type="radio"/>	<input type="radio"/>

	A	B	C	D
1.	<input type="radio"/>	<input type="radio"/>	<input type="radio"/>	<input type="radio"/>
2.	<input type="radio"/>	<input type="radio"/>	<input type="radio"/>	<input type="radio"/>
3.	<input type="radio"/>	<input type="radio"/>	<input type="radio"/>	<input type="radio"/>
4.	<input type="radio"/>	<input type="radio"/>	<input type="radio"/>	<input type="radio"/>
5.	<input type="radio"/>	<input type="radio"/>	<input type="radio"/>	<input type="radio"/>
6.	<input type="radio"/>	<input type="radio"/>	<input type="radio"/>	<input type="radio"/>
7.	<input type="radio"/>	<input type="radio"/>	<input type="radio"/>	<input type="radio"/>
8.	<input type="radio"/>	<input type="radio"/>	<input type="radio"/>	<input type="radio"/>
9.	<input type="radio"/>	<input type="radio"/>	<input type="radio"/>	<input type="radio"/>
10.	<input type="radio"/>	<input type="radio"/>	<input type="radio"/>	<input type="radio"/>

SECTION 2

Instructions

- Write using black or blue pen.
 - Questions worth more than one mark require mathematical reasoning and/or working to be shown to support answers.
 - If you need more space for a response, use the additional pages at the back of this booklet.
 - On the additional pages, write the question number you are responding to.
 - Cancel any incorrect response by ruling a single diagonal line through your work.
 - Write the page number of your alternative/additional response, i.e. See page ...
 - If you do not do this, your original response will be marked.
 - This section has nine questions and is worth 50 marks.
-

DO NOT WRITE ON THIS PAGE
THIS PAGE WILL NOT BE MARKED

QUESTION 11 (6 marks)

Consider the lines $l_1 = 4i + 5j - 10k + \lambda(3i - k)$ and $l_2 = -3i + j - k + \mu(-i + 2j - 3k)$.

- a) Determine the point of intersection of l_1 and l_2 . *[2 marks]*

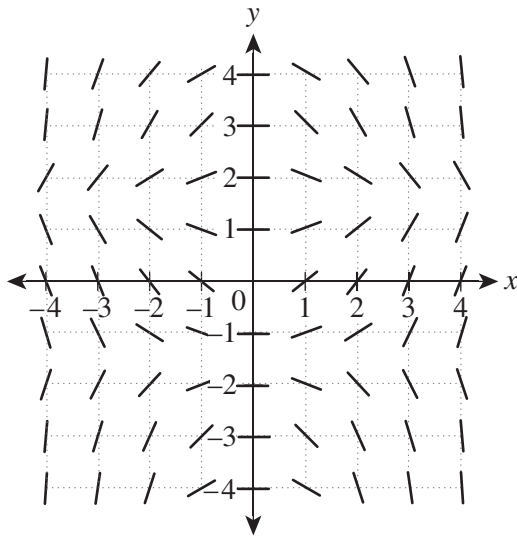
- b) Show that l_1 and l_2 are perpendicular to each other. *[1 mark]*

- c) Determine the equation of the vector plane that contains both l_1 and l_2 in Cartesian form. *[3 marks]*

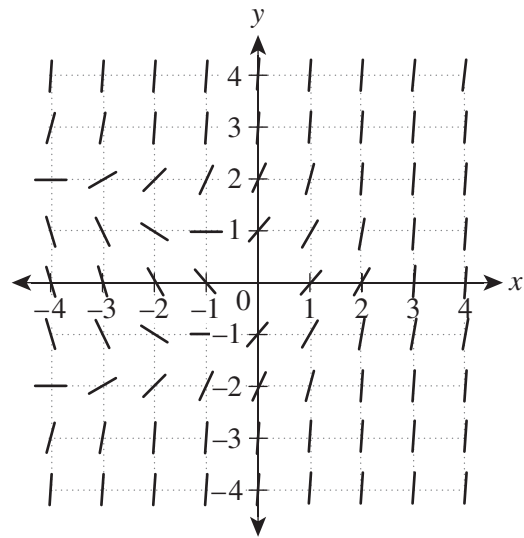
QUESTION 12 (4 marks)

Consider the two slope field diagrams.

Slope field A



Slope field B



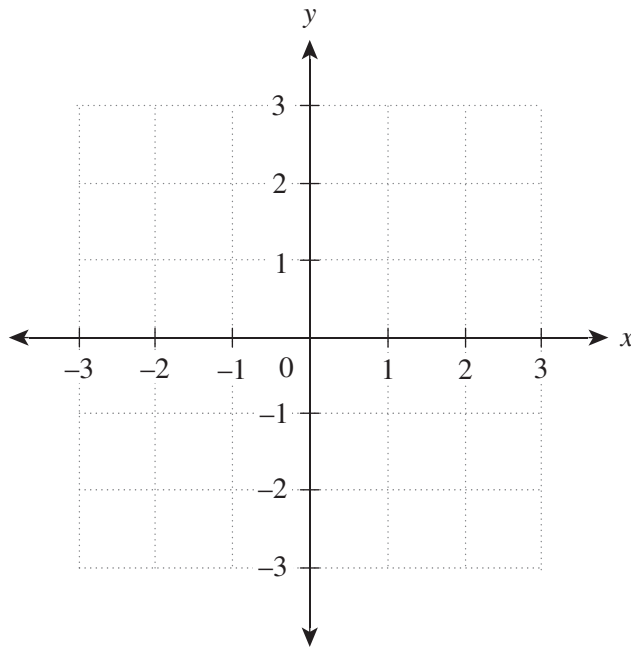
One slope field represents the differential equation $\frac{dy}{dx} = x \cos(y)$ and the other represents the differential equation $\frac{dy}{dx} = x + y^2$.

- a) Identify the differential equation that is represented in slope fields A and B. Explain your reasoning.

[2 marks]

b) Sketch the slope field for the differential equation $\frac{dy}{dx} = \frac{y}{x^2}$ on the grid.

[2 marks]





Trial Examination 2023

Formula Booklet

QCE Specialist Mathematics Units 3&4

Neap[®] Education (Neap) Trial Exams are licensed to be photocopied or placed on the school intranet and used only within the confines of the school purchasing them, for the purpose of examining that school's students only for a period of 12 months from the date of receiving them. They may not be otherwise reproduced or distributed. The copyright of Neap Trial Exams remains with Neap. No Neap Trial Exam or any part thereof is to be issued or passed on by any person to any party inclusive of other schools, non-practising teachers, coaching colleges, tutors, parents, students, publishing agencies or websites without the express written consent of Neap.

Mensuration			
circumference of a circle	$C = 2\pi r$	area of a circle	$A = \pi r^2$
area of a parallelogram	$A = bh$	area of a trapezium	$A = \frac{1}{2}(a+b)h$
area of a triangle	$A = \frac{1}{2}bh$	total surface area of a cone	$S = \pi rs + \pi r^2$
total surface area of a cylinder	$S = 2\pi rh + 2\pi r^2$	surface area of a sphere	$S = 4\pi r^2$
volume of a cone	$V = \frac{1}{3}\pi r^2 h$	volume of a cylinder	$V = \pi r^2 h$
volume of a prism	$V = Ah$	volume of a pyramid	$V = \frac{1}{3}Ah$
volume of a sphere	$V = \frac{4}{3}\pi r^3$		

Calculus	
$\frac{d}{dx}x^n = nx^{n-1}$	$\int x^n dx = \frac{x^{n+1}}{n+1} + c$
$\frac{d}{dx}e^x = e^x$	$\int e^x dx = e^x + c$
$\frac{d}{dx}\ln(x) = \frac{1}{x}$	$\int \frac{1}{x} dx = \ln x + c$
$\frac{d}{dx}\sin(x) = \cos(x)$	$\int \sin(x) dx = -\cos(x) + c$
$\frac{d}{dx}\cos(x) = -\sin(x)$	$\int \cos(x) dx = \sin(x) + c$
$\frac{d}{dx}\tan(x) = \sec^2(x)$	$\int \sec^2(x) dx = \tan(x) + c$
$\frac{d}{dx}\sin^{-1}\left(\frac{x}{a}\right) = \frac{1}{\sqrt{a^2 - x^2}}$	$\int \frac{1}{\sqrt{a^2 - x^2}} dx = \sin^{-1}\left(\frac{x}{a}\right) + c$
$\frac{d}{dx}\cos^{-1}\left(\frac{x}{a}\right) = \frac{-1}{\sqrt{a^2 - x^2}}$	$\int \frac{-1}{\sqrt{a^2 - x^2}} dx = \cos^{-1}\left(\frac{x}{a}\right) + c$
$\frac{d}{dx}\tan^{-1}\left(\frac{x}{a}\right) = \frac{a}{a^2 + x^2}$	$\int \frac{a}{a^2 + x^2} dx = \tan^{-1}\left(\frac{x}{a}\right) + c$

Calculus		
chain rule	If $h(x) = f(g(x))$ then $h'(x) = f'(g(x))g'(x)$	If $y = f(u)$ and $u = g(x)$ then $\frac{dy}{dx} = \frac{dy}{du} \times \frac{du}{dx}$
product rule	If $h(x) = f(x)g(x)$ then $h'(x) = f(x)g'(x) + f'(x)g(x)$	$\frac{d}{dx}(uv) = u \frac{dv}{dx} + v \frac{du}{dx}$
quotient rule	If $h(x) = \frac{f(x)}{g(x)}$ then $h'(x) = \frac{f'(x)g(x) - f(x)g'(x)}{(g(x))^2}$	$\frac{d}{dx}\left(\frac{u}{v}\right) = \frac{v \frac{du}{dx} - u \frac{dv}{dx}}{v^2}$
integration by parts	$\int f(x)g'(x)dx = f(x)g(x) - \int f'(x)g(x)dx$	$\int u \frac{dv}{dx}dx = uv - \int v \frac{du}{dx}dx$
volume of a solid of revolution	about the x -axis	$V = \pi \int_a^b [f(x)]^2 dx$
	about the y -axis	$V = \pi \int_a^b [f(y)]^2 dy$
Simpson's rule	$\int_a^b f(x)dx \approx \frac{w}{3} [f(x_0) + 4[f(x_1) + f(x_3) + \dots] + 2[f(x_2) + f(x_4) + \dots] + f(x_n)]$	
simple harmonic motion	If $\frac{d^2x}{dt^2} = -\omega^2x$ then $x = A \sin(\omega t + \alpha)$ or $x = A \cos(\omega t + \beta)$	
	$v^2 = \omega^2(A^2 - x^2)$	$T = \frac{2\pi}{\omega}$
acceleration	$a = \frac{dv}{dt} = \frac{d^2x}{dt^2} = v \frac{dv}{dx} = \frac{d}{dx}\left(\frac{1}{2}v^2\right)$	

Real and complex numbers	
complex number forms	$z = x + yi = r(\cos(\theta) + i \sin(\theta)) = r \operatorname{cis}(\theta)$
modulus	$ z = r = \sqrt{x^2 + y^2}$
argument	$\arg(z) = \theta, \tan(\theta) = \frac{y}{x}, -\pi < \theta \leq \pi$
product	$z_1 z_2 = r_1 r_2 \operatorname{cis}(\theta_1 + \theta_2)$
quotient	$\frac{z_1}{z_2} = \frac{r_1}{r_2} \operatorname{cis}(\theta_1 - \theta_2)$
De Moivre's theorem	$z^n = r^n \operatorname{cis}(n\theta)$

Statistics	
binomial theorem	$(x + y)^n = x^n + \binom{n}{1}x^{n-1}y + \dots + \binom{n}{r}x^{n-r}y^r + \dots + y^n$
permutation	${}^n P_r = \frac{n!}{(n-r)!} = n \times (n-1) \times (n-2) \times \dots \times (n-r+1)$
combination	${}^n C_r = \binom{n}{r} = \frac{n!}{r!(n-r)!}$
sample means	mean μ
	standard deviation $\frac{\sigma}{\sqrt{n}}$
approximate confidence interval for μ	$\left(\bar{x} - z \frac{s}{\sqrt{n}}, \bar{x} + z \frac{s}{\sqrt{n}} \right)$

Trigonometry	
Pythagorean identities	$\sin^2(A) + \cos^2(A) = 1$ $\tan^2(A) + 1 = \sec^2(A)$ $\cot^2(A) + 1 = \operatorname{cosec}^2(A)$
angle sum and difference identities	$\sin(A + B) = \sin(A) \cos(B) + \cos(A) \sin(B)$ $\sin(A - B) = \sin(A) \cos(B) - \cos(A) \sin(B)$ $\cos(A + B) = \cos(A) \cos(B) - \sin(A) \sin(B)$ $\cos(A - B) = \cos(A) \cos(B) + \sin(A) \sin(B)$
double-angle identities	$\sin(2A) = 2 \sin(A) \cos(A)$ $\cos(2A) = \cos^2(A) - \sin^2(A)$ $\quad = 1 - 2 \sin^2(A)$ $\quad = 2 \cos^2(A) - 1$
product identities	$\sin(A) \sin(B) = \frac{1}{2}(\cos(A - B) - \cos(A + B))$ $\cos(A) \cos(B) = \frac{1}{2}(\cos(A - B) + \cos(A + B))$ $\sin(A) \cos(B) = \frac{1}{2}(\sin(A + B) + \sin(A - B))$ $\cos(A) \sin(B) = \frac{1}{2}(\sin(A + B) - \sin(A - B))$

Vectors and matrices		
magnitude	$ \mathbf{a} = \left \begin{pmatrix} a_1 \\ a_2 \\ a_3 \end{pmatrix} \right = \sqrt{a_1^2 + a_2^2 + a_3^2}$	
scalar (dot) product	$\mathbf{a} \cdot \mathbf{b} = \mathbf{a} \mathbf{b} \cos(\theta)$	
	$\mathbf{a} \cdot \mathbf{b} = \begin{pmatrix} a_1 \\ a_2 \\ a_3 \end{pmatrix} \cdot \begin{pmatrix} b_1 \\ b_2 \\ b_3 \end{pmatrix} = a_1b_1 + a_2b_2 + a_3b_3$	
vector equation of a line	$\mathbf{r} = \mathbf{a} + k\mathbf{d}$	
Cartesian equation of a line	$\frac{x - a_1}{d_1} = \frac{y - a_2}{d_2} = \frac{z - a_3}{d_3}$	
vector (cross) product	$\mathbf{a} \times \mathbf{b} = \mathbf{a} \mathbf{b} \sin(\theta) \hat{\mathbf{n}}$	
	$\mathbf{a} \times \mathbf{b} = \begin{pmatrix} a_1 \\ a_2 \\ a_3 \end{pmatrix} \times \begin{pmatrix} b_1 \\ b_2 \\ b_3 \end{pmatrix} = \begin{pmatrix} a_2b_3 - a_3b_2 \\ a_3b_1 - a_1b_3 \\ a_1b_2 - a_2b_1 \end{pmatrix}$	
vector projection	\mathbf{a} on $\mathbf{b} = \mathbf{a} \cos(\theta) \hat{\mathbf{b}} = (\mathbf{a} \cdot \hat{\mathbf{b}}) \hat{\mathbf{b}}$	
vector equation of a plane	$\mathbf{r} \cdot \mathbf{n} = \mathbf{a} \cdot \mathbf{n}$	
Cartesian equation of a plane	$ax + by + cz + d = 0$	
determinant	If $\mathbf{A} = \begin{bmatrix} a & b \\ c & d \end{bmatrix}$ then $\det(\mathbf{A}) = ad - bc$	
multiplicative inverse matrix	$\begin{bmatrix} a & b \\ c & d \end{bmatrix}^{-1} = \frac{1}{\det(\mathbf{A})} \begin{bmatrix} d & -b \\ -c & a \end{bmatrix}, \det(\mathbf{A}) \neq 0$	
linear transformations	dilation	$\begin{bmatrix} a & 0 \\ 0 & b \end{bmatrix}$
	rotation	$\begin{bmatrix} \cos(\theta) & -\sin(\theta) \\ \sin(\theta) & \cos(\theta) \end{bmatrix}$
	reflection (in the line $y = x \tan(\theta)$)	$\begin{bmatrix} \cos(2\theta) & \sin(2\theta) \\ \sin(2\theta) & -\cos(2\theta) \end{bmatrix}$
Physical constant		
magnitude of mean acceleration due to gravity on Earth	$g = 9.8 \text{ m s}^{-2}$	