



Trial Examination 2022

Question and Response Booklet

QCE Specialist Mathematics Units 1&2

Paper 1 – Technology-free

Student's Name: _____

Teacher's Name: _____

Time allowed

- Perusal time – 5 minutes
- Working time – 90 minutes

General instructions

- Answer all questions in this question and response booklet.
- Calculators are **not** permitted.
- Formula booklet provided.
- Planning paper will not be marked.

Section 1 (10 marks)

- 10 multiple choice questions

Section 2 (55 marks)

- 9 short response questions

Neap[®] Education (Neap) Trial Exams are licensed to be photocopied or placed on the school intranet and used only within the confines of the school purchasing them, for the purpose of examining that school's students only. They may not be otherwise reproduced or distributed. The copyright of Neap Trial Exams remains with Neap. No Neap Trial Exam or any part thereof is to be issued or passed on by any person to any party inclusive of other schools, non-practising teachers, coaching colleges, tutors, parents, students, publishing agencies or websites without the express written consent of Neap.

SECTION 1

Instructions

- Choose the best answer for Questions 1–10.
- This section has 10 questions and is worth 10 marks.
- Use a 2B pencil to fill in the A, B, C or D answer bubble completely.
- If you change your mind or make a mistake, use an eraser to remove your response and fill in the new answer bubble completely.

	A	B	C	D
Example:	<input checked="" type="radio"/>	<input type="radio"/>	<input type="radio"/>	<input type="radio"/>

	A	B	C	D
1.	<input type="radio"/>	<input type="radio"/>	<input type="radio"/>	<input type="radio"/>
2.	<input type="radio"/>	<input type="radio"/>	<input type="radio"/>	<input type="radio"/>
3.	<input type="radio"/>	<input type="radio"/>	<input type="radio"/>	<input type="radio"/>
4.	<input type="radio"/>	<input type="radio"/>	<input type="radio"/>	<input type="radio"/>
5.	<input type="radio"/>	<input type="radio"/>	<input type="radio"/>	<input type="radio"/>
6.	<input type="radio"/>	<input type="radio"/>	<input type="radio"/>	<input type="radio"/>
7.	<input type="radio"/>	<input type="radio"/>	<input type="radio"/>	<input type="radio"/>
8.	<input type="radio"/>	<input type="radio"/>	<input type="radio"/>	<input type="radio"/>
9.	<input type="radio"/>	<input type="radio"/>	<input type="radio"/>	<input type="radio"/>
10.	<input type="radio"/>	<input type="radio"/>	<input type="radio"/>	<input type="radio"/>

SECTION 2

Instructions

- Write using black or blue pen.
 - Questions worth more than one mark require mathematical reasoning and/or working to be shown to support answers.
 - If you need more space for a response, use the additional pages at the back of this booklet.
 - On the additional pages, write the question number you are responding to.
 - Cancel any incorrect response by ruling a single diagonal line through your work.
 - Write the page number of your alternative/additional response, i.e. See page ...
 - If you do not do this, your original response will be marked.
 - This section has nine questions and is worth 55 marks.
-

DO NOT WRITE ON THIS PAGE

THIS PAGE WILL NOT BE MARKED

QUESTION 11 (7 marks)

Consider the complex numbers $w = \sqrt{3} - i$ and $q = -2 + 2i$.

- a) Write w in polar form. *[2 marks]*

- b) Evaluate $\frac{1}{w}$. Give your answer in Cartesian form. *[2 marks]*

- c) Evaluate $\frac{q}{w}$. Give your answer in the form $r \operatorname{cis} \theta$, where θ is an angle in radians. *[3 marks]*

QUESTION 12 (4 marks)

a) Solve $\frac{{}^n C_5}{{}^{n-1} C_4} = 3$ for n .

[2 marks]

b) Solve $25n = {}^n P_2 \times {}^{n-1} P_1$ for n .

[2 marks]

QUESTION 13 (5 marks)

It is known that $\mathbf{B} = \begin{bmatrix} -2 & 2 & 8 \\ -1 & 2 & 5 \\ -2 & 2 & 6 \end{bmatrix}$, $\mathbf{BA} = \mathbf{AB} = \begin{bmatrix} 2 & 0 & 0 \\ 0 & 2 & 0 \\ 0 & 0 & 2 \end{bmatrix}$ and $\mathbf{AX} = \begin{bmatrix} 2 \\ -1 \\ 3 \end{bmatrix}$.

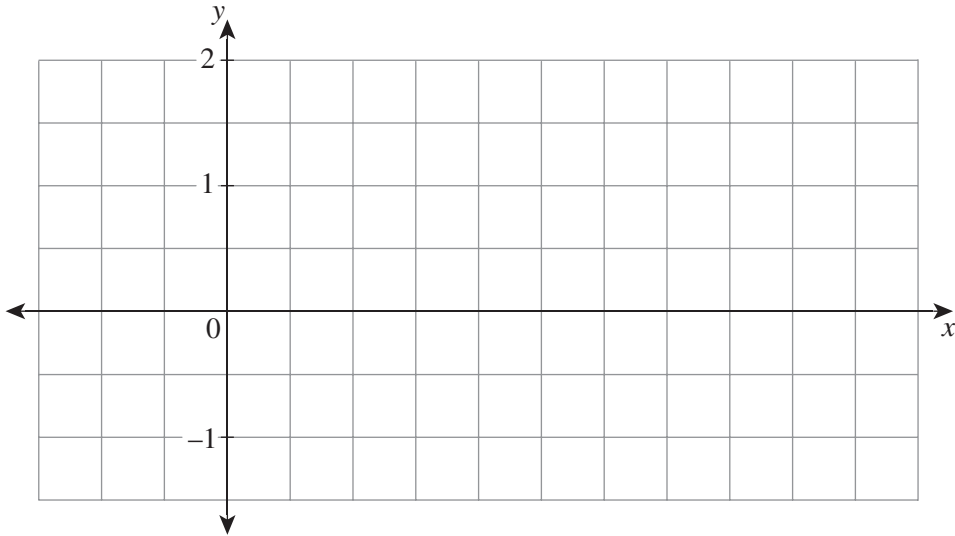
- a) State the dimensions of matrix \mathbf{X} . *[1 mark]*

- b) State matrix \mathbf{A}^{-1} . *[1 mark]*

- c) Determine matrix \mathbf{X} . *[3 marks]*

QUESTION 14 (4 marks)

Sketch one full period of the graph of $y = \sin\left(0.5\left(x - \frac{\pi}{2}\right)\right)$. Include numerals on the x -axis and label any axis intercepts.

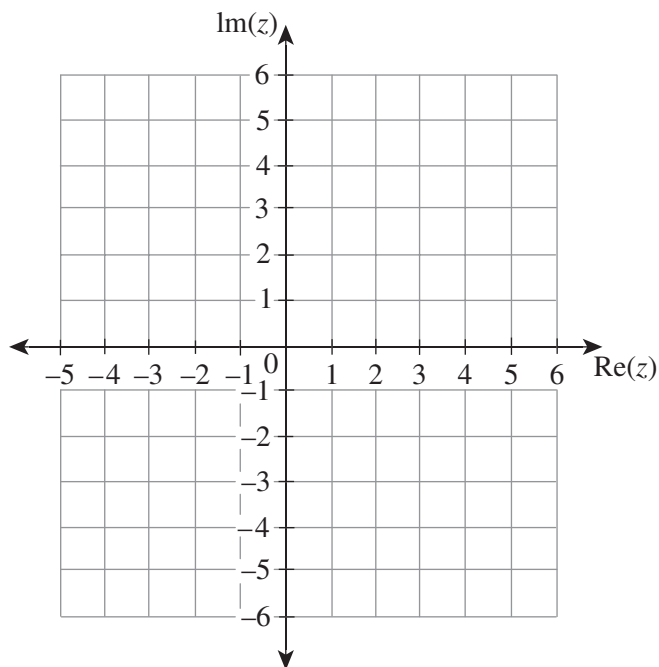


QUESTION 15 (7 marks)

Consider the complex quadratic equation $P(z) = z^2 - 4z + 13$.

- a) Find the complex solutions to $P(z) = 0$. *[3 marks]*

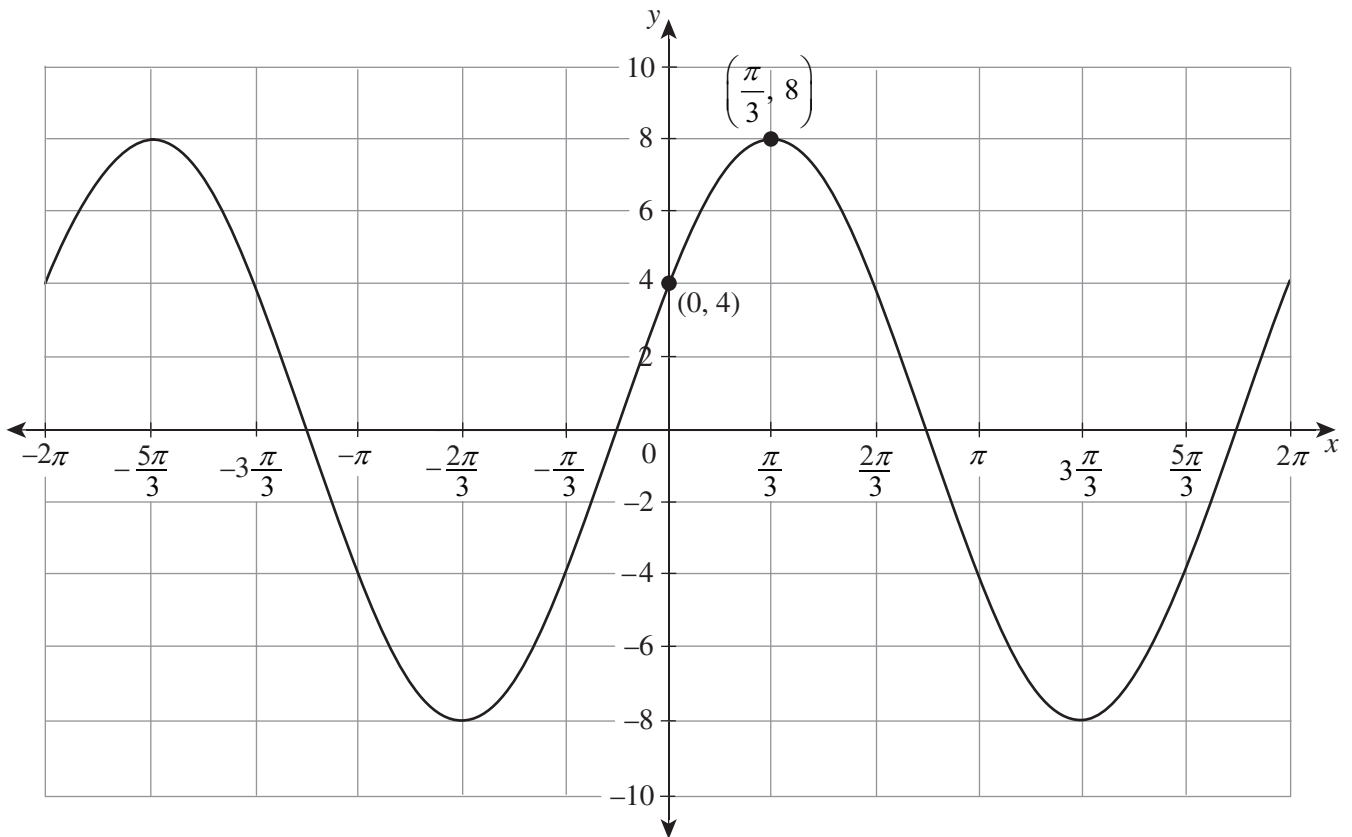
- b) Plot the complex solutions found in Question 15a) on the Argand diagram below. *[2 marks]*



- c) Find the equation of a complex quadratic, $Q(z)$, such that the solutions to $Q(z) = 0$ are the complex conjugate pair $3 + i$ and $3 - i$. *[2 marks]*

QUESTION 16 (8 marks)

Consider the graph.



- a) Given that the equation of the graph has the form $f(x) = A \cos(x - B)$, where $0 < A$ and $0 < B < \frac{\pi}{2}$, determine the values of A and B .

[2 marks]

- b) Given that the equation has the form $g(x) = M \cos x + N \sin x$, determine the values of M and N .

[4 marks]

- c) By evaluating $f\left(\frac{2\pi}{3}\right)$ and $g\left(\frac{2\pi}{3}\right)$ and identifying an appropriate point on the graph, draw a conclusion about the reasonableness of your responses to Questions 16a) and 16b).

[2 marks]

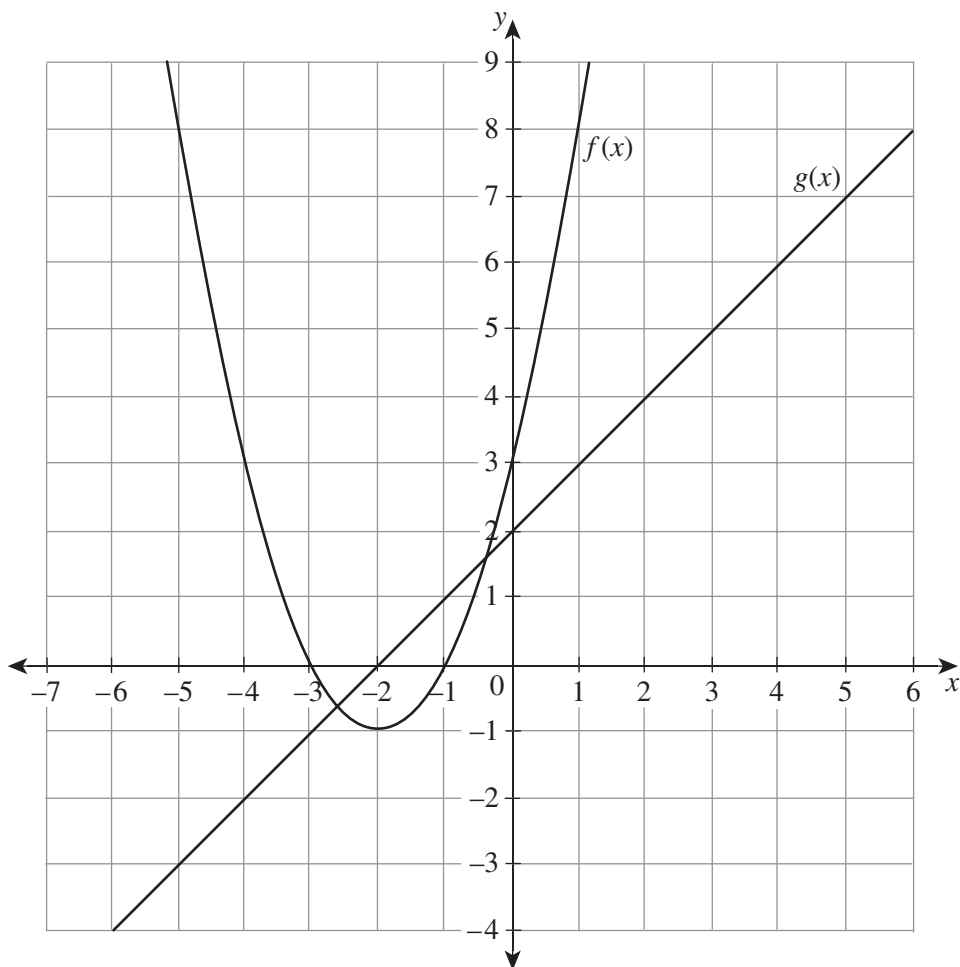
QUESTION 18 (7 marks)

a) Using polynomial division, or otherwise, express the quotient $\frac{x^2 + 4x + 3}{x + 2}$ ($x \neq -2$)

in the form $ax + b + \frac{c}{x + 2}$, $a, b, c \in \mathbb{Z}$.

[3 marks]

b) The functions $f(x) = x^2 + 4x + 3$ and $g(x) = x + 2$ are shown.

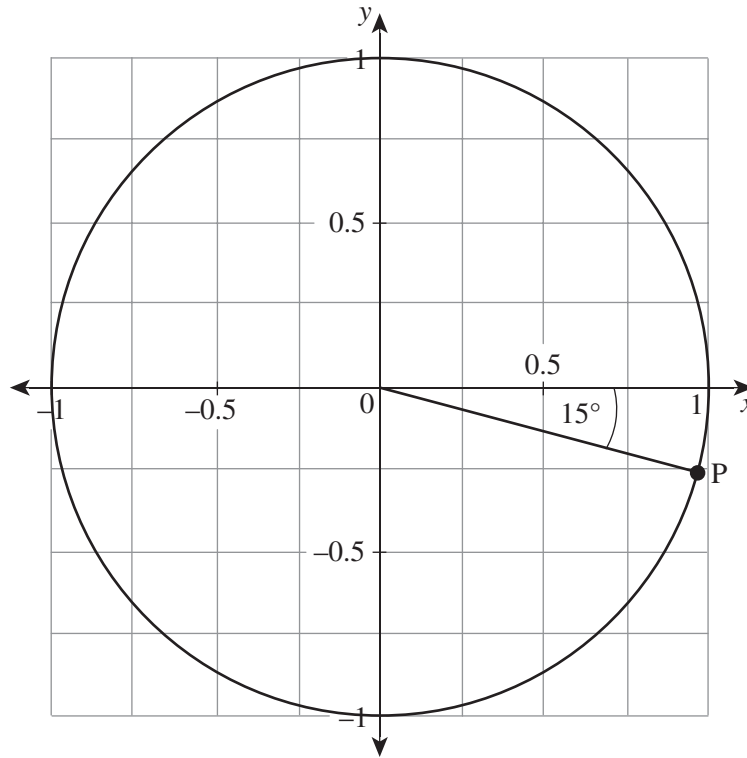


On the axes above, sketch the graph of the quotient obtained in Question 18a). Label any axis intercepts and include the equation(s) for any asymptote(s) that may exist.

[4 marks]

QUESTION 19 (7 marks)

Consider the unit circle shown. The point P is plotted on the circumference of the circle.



- a) State the transformation matrix associated with a rotation of 45° about the origin in the clockwise direction. *[2 marks]*

- b) Using your solution from Question 19a), or otherwise, state the image, Q, of the point $(1, 0)$ after a rotation of 45° about the origin in the clockwise direction. *[1 mark]*



Trial Examination 2022

Formula Booklet

QCE Specialist Mathematics Units 1&2

Neap[®] Education (Neap) Trial Exams are licensed to be photocopied or placed on the school intranet and used only within the confines of the school purchasing them, for the purpose of examining that school's students only. They may not be otherwise reproduced or distributed. The copyright of Neap Trial Exams remains with Neap. No Neap Trial Exam or any part thereof is to be issued or passed on by any person to any party inclusive of other schools, non-practising teachers, coaching colleges, tutors, parents, students, publishing agencies or websites without the express written consent of Neap.

Mensuration			
circumference of a circle	$C = 2\pi r$	area of a circle	$A = \pi r^2$
area of a parallelogram	$A = bh$	area of a trapezium	$A = \frac{1}{2}(a+b)h$
area of a triangle	$A = \frac{1}{2}bh$	total surface area of a cone	$S = \pi rs + \pi r^2$
total surface area of a cylinder	$S = 2\pi rh + 2\pi r^2$	surface area of a sphere	$S = 4\pi r^2$
volume of a cone	$V = \frac{1}{3}\pi r^2 h$	volume of a cylinder	$V = \pi r^2 h$
volume of a prism	$V = Ah$	volume of a pyramid	$V = \frac{1}{3}Ah$
volume of a sphere	$V = \frac{4}{3}\pi r^3$		

Calculus	
$\frac{d}{dx}x^n = nx^{n-1}$	$\int x^n dx = \frac{x^{n+1}}{n+1} + c$
$\frac{d}{dx}e^x = e^x$	$\int e^x dx = e^x + c$
$\frac{d}{dx}\ln(x) = \frac{1}{x}$	$\int \frac{1}{x} dx = \ln x + c$
$\frac{d}{dx}\sin(x) = \cos(x)$	$\int \sin(x) dx = -\cos(x) + c$
$\frac{d}{dx}\cos(x) = -\sin(x)$	$\int \cos(x) dx = \sin(x) + c$
$\frac{d}{dx}\tan(x) = \sec^2(x)$	$\int \sec^2(x) dx = \tan(x) + c$
$\frac{d}{dx}\sin^{-1}\left(\frac{x}{a}\right) = \frac{1}{\sqrt{a^2 - x^2}}$	$\int \frac{1}{\sqrt{a^2 - x^2}} dx = \sin^{-1}\left(\frac{x}{a}\right) + c$
$\frac{d}{dx}\cos^{-1}\left(\frac{x}{a}\right) = \frac{-1}{\sqrt{a^2 - x^2}}$	$\int \frac{-1}{\sqrt{a^2 - x^2}} dx = \cos^{-1}\left(\frac{x}{a}\right) + c$
$\frac{d}{dx}\tan^{-1}\left(\frac{x}{a}\right) = \frac{a}{a^2 + x^2}$	$\int \frac{a}{a^2 + x^2} dx = \tan^{-1}\left(\frac{x}{a}\right) + c$

Calculus		
chain rule	If $h(x) = f(g(x))$ then $h'(x) = f'(g(x))g'(x)$	If $y = f(u)$ and $u = g(x)$ then $\frac{dy}{dx} = \frac{dy}{du} \times \frac{du}{dx}$
product rule	If $h(x) = f(x)g(x)$ then $h'(x) = f(x)g'(x) + f'(x)g(x)$	$\frac{d}{dx}(uv) = u \frac{dv}{dx} + v \frac{du}{dx}$
quotient rule	If $h(x) = \frac{f(x)}{g(x)}$ then $h'(x) = \frac{f'(x)g(x) - f(x)g'(x)}{(g(x))^2}$	$\frac{d}{dx}\left(\frac{u}{v}\right) = \frac{v \frac{du}{dx} - u \frac{dv}{dx}}{v^2}$
integration by parts	$\int f(x)g'(x)dx = f(x)g(x) - \int f'(x)g(x)dx$	$\int u \frac{dv}{dx}dx = uv - \int v \frac{du}{dx}dx$
volume of a solid of revolution	about the x -axis	$V = \pi \int_a^b [f(x)]^2 dx$
	about the y -axis	$V = \pi \int_a^b [f(y)]^2 dy$
Simpson's rule	$\int_a^b f(x)dx \approx \frac{w}{3} [f(x_0) + 4[f(x_1) + f(x_3) + \dots] + 2[f(x_2) + f(x_4) + \dots] + f(x_n)]$	
simple harmonic motion	If $\frac{d^2x}{dt^2} = -\omega^2x$ then $x = A \sin(\omega t + \alpha)$ or $x = A \cos(\omega t + \beta)$	
	$v^2 = \omega^2(A^2 - x^2)$	$T = \frac{2\pi}{\omega}$
acceleration	$a = \frac{dv}{dt} = \frac{d^2x}{dt^2} = v \frac{dv}{dx} = \frac{d}{dx}\left(\frac{1}{2}v^2\right)$	

Real and complex numbers	
complex number forms	$z = x + yi = r(\cos(\theta) + i \sin(\theta)) = r \operatorname{cis}(\theta)$
modulus	$ z = r = \sqrt{x^2 + y^2}$
argument	$\arg(z) = \theta, \tan(\theta) = \frac{y}{x}, -\pi < \theta \leq \pi$
product	$z_1 z_2 = r_1 r_2 \operatorname{cis}(\theta_1 + \theta_2)$
quotient	$\frac{z_1}{z_2} = \frac{r_1}{r_2} \operatorname{cis}(\theta_1 - \theta_2)$
De Moivre's theorem	$z^n = r^n \operatorname{cis}(n\theta)$

Statistics	
binomial theorem	$(x + y)^n = x^n + \binom{n}{1}x^{n-1}y + \dots + \binom{n}{r}x^{n-r}y^r + \dots + y^n$
permutation	${}^n P_r = \frac{n!}{(n-r)!} = n \times (n-1) \times (n-2) \times \dots \times (n-r+1)$
combination	${}^n C_r = \binom{n}{r} = \frac{n!}{r!(n-r)!}$
sample means	mean μ
	standard deviation $\frac{\sigma}{\sqrt{n}}$
approximate confidence interval for μ	$\left(\bar{x} - z \frac{s}{\sqrt{n}}, \bar{x} + z \frac{s}{\sqrt{n}} \right)$

Trigonometry	
Pythagorean identities	$\sin^2(A) + \cos^2(A) = 1$ $\tan^2(A) + 1 = \sec^2(A)$ $\cot^2(A) + 1 = \operatorname{cosec}^2(A)$
angle sum and difference identities	$\sin(A + B) = \sin(A) \cos(B) + \cos(A) \sin(B)$ $\sin(A - B) = \sin(A) \cos(B) - \cos(A) \sin(B)$ $\cos(A + B) = \cos(A) \cos(B) - \sin(A) \sin(B)$ $\cos(A - B) = \cos(A) \cos(B) + \sin(A) \sin(B)$
double-angle identities	$\sin(2A) = 2 \sin(A) \cos(A)$ $\cos(2A) = \cos^2(A) - \sin^2(A)$ $\quad = 1 - 2 \sin^2(A)$ $\quad = 2 \cos^2(A) - 1$
product identities	$\sin(A) \sin(B) = \frac{1}{2}(\cos(A - B) - \cos(A + B))$ $\cos(A) \cos(B) = \frac{1}{2}(\cos(A - B) + \cos(A + B))$ $\sin(A) \cos(B) = \frac{1}{2}(\sin(A + B) + \sin(A - B))$ $\cos(A) \sin(B) = \frac{1}{2}(\sin(A + B) - \sin(A - B))$

Vectors and matrices		
magnitude	$ \mathbf{a} = \left \begin{pmatrix} a_1 \\ a_2 \\ a_3 \end{pmatrix} \right = \sqrt{a_1^2 + a_2^2 + a_3^2}$	
scalar (dot) product	$\mathbf{a} \cdot \mathbf{b} = \mathbf{a} \mathbf{b} \cos(\theta)$	
	$\mathbf{a} \cdot \mathbf{b} = \begin{pmatrix} a_1 \\ a_2 \\ a_3 \end{pmatrix} \cdot \begin{pmatrix} b_1 \\ b_2 \\ b_3 \end{pmatrix} = a_1 b_1 + a_2 b_2 + a_3 b_3$	
vector equation of a line	$\mathbf{r} = \mathbf{a} + k\mathbf{d}$	
Cartesian equation of a line	$\frac{x - a_1}{d_1} = \frac{y - a_2}{d_2} = \frac{z - a_3}{d_3}$	
vector (cross) product	$\mathbf{a} \times \mathbf{b} = \mathbf{a} \mathbf{b} \sin(\theta) \hat{\mathbf{n}}$	
	$\mathbf{a} \times \mathbf{b} = \begin{pmatrix} a_1 \\ a_2 \\ a_3 \end{pmatrix} \times \begin{pmatrix} b_1 \\ b_2 \\ b_3 \end{pmatrix} = \begin{pmatrix} a_2 b_3 - a_3 b_2 \\ a_3 b_1 - a_1 b_3 \\ a_1 b_2 - a_2 b_1 \end{pmatrix}$	
vector projection	\mathbf{a} on $\mathbf{b} = \mathbf{a} \cos(\theta) \hat{\mathbf{b}} = (\mathbf{a} \cdot \hat{\mathbf{b}}) \hat{\mathbf{b}}$	
vector equation of a plane	$\mathbf{r} \cdot \mathbf{n} = \mathbf{a} \cdot \mathbf{n}$	
Cartesian equation of a plane	$ax + by + cz + d = 0$	
determinant	If $\mathbf{A} = \begin{bmatrix} a & b \\ c & d \end{bmatrix}$ then $\det(\mathbf{A}) = ad - bc$	
multiplicative inverse matrix	$\begin{bmatrix} a & b \\ c & d \end{bmatrix}^{-1} = \frac{1}{\det(\mathbf{A})} \begin{bmatrix} d & -b \\ -c & a \end{bmatrix}, \det(\mathbf{A}) \neq 0$	
linear transformations	dilation	$\begin{bmatrix} a & 0 \\ 0 & b \end{bmatrix}$
	rotation	$\begin{bmatrix} \cos(\theta) & -\sin(\theta) \\ \sin(\theta) & \cos(\theta) \end{bmatrix}$
	reflection (in the line $y = x \tan(\theta)$)	$\begin{bmatrix} \cos(2\theta) & \sin(2\theta) \\ \sin(2\theta) & -\cos(2\theta) \end{bmatrix}$

Physical constant

magnitude of mean acceleration due to gravity on Earth	$g = 9.8 \text{ m s}^{-2}$
--	----------------------------